

# On $t$ -relaxed 2-distant circular coloring of graphs\*

Dan He<sup>†</sup> and Wensong Lin<sup>‡</sup>

School of Mathematics, Southeast University, Nanjing 210096, P.R. China

## Abstract

Let  $k$  be a positive integer. For any two integers  $i$  and  $j$  in  $\{0, 1, \dots, k-1\}$ , let  $|i-j|_k$  be the circular distance between  $i$  and  $j$ , which is defined as  $\min\{|i-j|, k-|i-j|\}$ . Suppose  $f$  is a mapping from  $V(G)$  to  $\{0, 1, \dots, k-1\}$ . If, for any two adjacent vertices  $u$  and  $v$  in  $V(G)$ ,  $|f(u) - f(v)|_k \geq 2$ , then  $f$  is called a  $\frac{k}{2}$ -coloring of  $G$ . Klostermeyer in [15, 16] introduced a relaxation of  $\frac{k}{2}$ -coloring named defective circular coloring. Let  $d$  and  $t$  be two nonnegative integers. If each vertex  $v$  is adjacent to at most  $d$  vertices  $u$  with  $|f(u) - f(v)|_k \leq 1$ , then  $f$  is called a  $d$ -defective 2-distant circular  $k$ -coloring, or simply a  $(\frac{k}{2}, d)$ -coloring of  $G$ . If  $G$  has a  $(\frac{k}{2}, d)$ -coloring, then we say  $G$  is  $(\frac{k}{2}, d)$ -colorable. In this paper, we give a new relaxation of  $\frac{k}{2}$ -coloring. If adjacent vertices receive different integers, and for each vertex  $u$  of  $G$ , the number of neighbors  $v$  of  $u$  with  $|f(u) - f(v)|_k = 1$  is at most  $t$ , then  $f$  is called a  $t$ -relaxed 2-distant circular  $k$ -coloring, or simply a  $(\frac{k}{2}, t)^*$ -coloring of  $G$ . If  $G$  has a  $(\frac{k}{2}, t)^*$ -coloring, then  $G$  is called  $(\frac{k}{2}, t)^*$ -colorable. The minimum integer  $k$  such that  $G$  is  $(\frac{k}{2}, t)^*$ -colorable is called the  $t$ -relaxed 2-distant circular chromatic number of  $G$ , denoted by  $c\chi_2^t(G)$ .

In this paper, we determine the  $t$ -relaxed 2-distant circular chromatic numbers of paths, cycles and complete graphs. We prove that, for any two fixed integers  $k$  and  $t$  with  $k \geq 2$  and  $t \geq 1$ , deciding whether  $c\chi_2^t(G) \leq k$  for a graph  $G$  is NP-complete except the case  $k = 2$  and the case  $k = 3$  and  $t \leq 3$ , which are polynomially solvable. For any outerplanar graph  $G$ , it is easy to see that  $G$  is  $(\frac{6}{2}, 0)^*$ -colorable. We show that all outerplanar graphs are  $(\frac{5}{2}, 4)^*$ -colorable. We also prove that there is no fixed positive integer  $t$  such that all outerplanar graphs are  $(\frac{4}{2}, t)^*$ -colorable. To compare the  $d$ -defective 2-distant circular coloring and the  $t$ -relaxed 2-distant circular coloring, we also prove that, for any two fixed positive integers  $k$  and  $d$ , deciding whether a graph  $G$  is  $(\frac{k}{2}, d)$ -colorable is NP-complete except the case  $k \leq 3$ , which is polynomially solvable. Moreover, for any outerplanar graph  $G$ , we prove that  $G$  is  $(\frac{4}{2}, 2)$ -colorable.

**Keywords:** circular coloring; 2-distant coloring;  $t$ -relaxed 2-distant circular coloring;  $d$ -defective 2-distant circular coloring; outerplanar graph; NP-complete.

**AMS Subject Classification (2000):** 05C15

## 1 Introduction

In this paper, we focus on undirected and simple graphs, and we use standard notations in graph theory (cf. [3]). The circular chromatic number of a graph is a natural generalization of the chromatic number of a graph. In [24], Zhu gave the definition of circular coloring by introducing the problem of designing a traffic control system. At a road intersection, each traffic flow is assigned an interval of time during which it faces a green light. A complete traffic period is

\*Research supported by NSFC 11701080 and 11771080.

<sup>†</sup>E-mail: hedanmath@163.com

<sup>‡</sup>E-mail: wslin@seu.edu.cn

a time interval during which each traffic flow gets a turn of green light. It needs to design a red-green light pattern for a complete traffic period and the pattern will be repeated forever. Assume that each interval of green light has unit length. The problem of designing a traffic control system is to minimize the total length of a complete traffic period.

The problem of designing a traffic control system can be modeled as a kind of graph coloring problem. We use vertices of a graph to denote the traffic flow, and two vertices are adjacent if the corresponding traffic flows are not compatible, which means their green light intervals must not overlap. A complete traffic period can be viewed as a circle  $C$ , and each vertex is assigned an open arc of  $C$  with unit length, such that the intervals assigned to adjacent vertices are disjoint. The objective is to minimize the total length of the circle  $C$ . Let  $C$  be a circle of length  $r$ , an  $r$ -circular coloring of a graph  $G$  is a mapping  $f$  which assigns to each vertex  $u$  of  $G$  an open unit length arc of  $C$ , such that for every edge  $uv$  of  $G$ ,  $f(u) \cap f(v) = \emptyset$ . A graph  $G$  is  $r$ -circular colorable if there is an  $r$ -circular coloring of  $G$ , and the *circular chromatic number* of  $G$ , denoted by  $\chi_c(G)$ , is defined as the minimum  $r$  such that  $G$  is  $r$ -circular colorable.

The circular chromatic number  $\chi_c(G)$  of a graph  $G$  was first introduced as “the star chromatic number” by Vince in [21]. Some other equivalent definitions such as  $\frac{k}{q}$ -coloring can be seen in [24]. Let  $k$  be a positive integer. For any two integers  $i$  and  $j$  in  $\{0, 1, \dots, k-1\}$ , the *circular distance* between  $i$  and  $j$ , denoted by  $|i - j|_k$ , is defined as  $\min\{|i - j|, k - |i - j|\}$ . For two integers  $q$  and  $k$  such  $1 \leq q \leq k$ , a  $\frac{k}{q}$ -coloring of a graph  $G$  is a mapping  $f$  from the vertex set of  $G$  to colors in  $\{0, 1, \dots, k-1\}$ , such that for every edge  $uv$  of  $G$ ,  $|f(u) - f(v)|_k \geq q$ . The *circular chromatic number*  $\chi_c(G)$  is the minimum number  $\frac{k}{q}$  such that  $G$  has a  $\frac{k}{q}$ -coloring. It is easy to see that a  $\frac{k}{1}$ -coloring of a graph  $G$  is just an ordinary  $k$ -coloring of  $G$ . For any finite graph  $G$ , the relationship between its chromatic number and circular chromatic number is  $\chi(G) - 1 < \chi_c(G) \leq \chi(G)$ , which can be found in a survey of circular coloring by Zhu [24].

Let  $G$  be a graph and  $f$  a  $\frac{k}{q}$ -coloring of  $G$ . Under the coloring  $f$ , for any edge  $uv$  of  $G$ , since the circular distance between  $f(u)$  and  $f(v)$  is at least  $q$  in the circle of length  $k$ , we call coloring  $f$  a  $q$ -distant circular  $k$ -coloring of  $G$ . If  $G$  has a  $\frac{k}{q}$ -coloring, we say  $G$  is  $\frac{k}{q}$ -colorable. The minimum integer  $k$  such that  $G$  is  $\frac{k}{q}$ -colorable is called the  $q$ -distant circular chromatic number of  $G$ , denoted by  $c\chi_q(G)$ . In this paper, we focus on the case  $q = 2$ .

In the literature, there are many kinds of relaxation about various graph colorings, please see [7, 12, 17–19, 23]. Let  $k$  and  $d$  be two nonnegative integers. In [5, 6], the authors introduced a relaxed coloring which is named as  $(k, d)$ -defective coloring. A  $(k, d)$ -defective coloring of a graph is an assignment of  $k$  colors to the vertices such that each vertex  $v$  is adjacent to at most  $d$  vertices having the same color as  $v$ . Defective coloring is sometimes known as “improper coloring”, which is defined in the book by Jensen and Toft [14]. The  $(k, d)$ -defective coloring has been studied extensively in the literature, please see [1, 8, 13].

There is also a kind of relaxation about circular coloring, which was called defective circular coloring by Klostermeyer in [15, 16]. A *defective circular coloring* for a simple graph  $G$  is a mapping  $f : V(G) \rightarrow \{0, 1, \dots, k-1\}$ , such that each vertex  $v$  is adjacent to at most  $d$  vertices

$u$  where  $|f(u) - f(v)|_k \geq q$  does not hold. In this paper, we call this mapping  $f$  a  $d$ -defective  $q$ -distant circular  $k$ -coloring, or simply a  $(\frac{k}{q}, d)$ -coloring. If  $G$  has a  $(\frac{k}{q}, d)$ -coloring, we say  $G$  is  $(\frac{k}{q}, d)$ -colorable. In [16], Klostermeyer gave some fundamental properties of defective circular coloring and studied the  $(\frac{5}{2}, d)$ -colorability of planar graphs,  $(\frac{5}{2}, 1)$ -colorability of outerplanar graphs and the  $(\frac{5}{2}, 2)$ -colorability of series-parallel graphs. The other results about defective circular coloring can be seen in [11, 20]. In this paper, we introduce a new relaxation of circular coloring.

Let  $k, q$  and  $t$  be nonnegative integers. Suppose  $f$  is a mapping from  $V(G)$  to  $\{0, 1, \dots, k-1\}$ . If adjacent vertices receive different integers, and for each vertex  $u$  of  $G$ , the number of neighbors  $v$  of  $u$  with  $|f(u) - f(v)|_k < q$  is at most  $t$ , we say  $f$  is a  $t$ -relaxed  $q$ -distant circular  $k$ -coloring of  $G$ , or simply a  $(\frac{k}{q}, t)^*$ -coloring of  $G$ . If  $t = 0$ , the above coloring  $f$  is just a  $\frac{k}{q}$ -coloring of  $G$ . In other words, a  $(\frac{k}{q}, 0)^*$ -coloring is also a  $\frac{k}{q}$ -coloring. If  $G$  has a  $(\frac{k}{q}, t)^*$ -coloring, we say  $G$  is  $(\frac{k}{q}, t)^*$ -colorable. The minimum integer  $k$  such that  $G$  is  $(\frac{k}{q}, t)^*$ -colorable is called the  $t$ -relaxed  $q$ -distant circular chromatic number of  $G$ , denoted by  $c\chi_q^t(G)$ . In this paper, we focus on the case  $q = 2$ . According to the above definition of  $t$ -relaxed  $q$ -distant circular chromatic number, for any finite graph  $G$  and positive integer  $t$ , we have  $\chi(G) \leq c\chi_2^t(G) \leq 2\chi(G)$ . Moreover,  $c\chi_2^t(G) = \chi(G)$  when  $t \geq \Delta(G)$ . If  $G$  is  $(\frac{k}{q}, t)^*$ -colorable, then it is also  $(\frac{k}{q}, t)$ -colorable, but not vice versa.

Note that the  $t$ -relaxed  $q$ -distant circular coloring is different from the  $d$ -defective  $q$ -distant circular coloring. In a  $d$ -defective  $q$ -distant circular coloring, the colors assigned to two adjacent vertices can be allowed to be the same. However, in some practical problems, for two adjacent vertices  $u$  and  $v$ , although the circular distance between colors assigned to  $u$  and  $v$  may not be required to be greater than or equal to  $q$ , it is often necessary to require that  $u$  and  $v$  must receive different colors. In a  $t$ -relaxed  $q$ -distant circular coloring, we put forward this requirement. This means the constraint in  $t$ -relaxed  $q$ -distant circular coloring is stronger than that in  $d$ -defective 2-distant circular coloring. In section 5, we will give an example of a graph which is  $(\frac{4}{2}, 1)$ -colorable, but is not  $(\frac{4}{2}, 1)^*$ -colorable.

Suppose  $f$  is a  $t$ -relaxed (resp.  $d$ -defective) 2-distant circular  $k$ -coloring of a graph  $G$ . Let  $v$  be a vertex of  $G$ . If  $v$  has  $p$  neighbors  $u$  with  $|f(u) - f(v)|_k = 1$  (resp.  $|f(u) - f(v)|_k \leq 1$ ), we say  $v$  is relaxed  $p$  times, or  $v$  has  $p$  relaxations. Assume  $S$  is a subset of  $V(G)$ . If there are  $p$  vertices  $w \in N(v) \cap S$  with  $|f(w) - f(v)|_k = 1$  (resp.  $|f(w) - f(v)|_k \leq 1$ ), we say  $v$  has  $p$  relaxations in  $S$ . If, for each neighbor  $u$  of  $v$ ,  $|f(u) - f(v)|_k \geq 2$ , then the vertex  $v$  is not relaxed. For a mapping from the vertex set to  $\{0, 1, \dots, k-1\}$ , if there exists at least one vertex  $u$  which has relaxations, this mapping is called a *relaxed 2-distant circular  $k$ -coloring*.

We proceed as follows. In section 2 we determine  $t$ -relaxed 2-distant circular chromatic numbers of paths, cycles and complete graphs. In section 3 we study the complexity of  $t$ -relaxed 2-distant circular coloring problem. We prove that for two fixed integers  $k \geq 2$  and  $t \geq 1$ , the problem of deciding whether a graph  $G$  is  $(\frac{k}{2}, t)^*$ -colorable is NP-complete except the case  $k = 2$  and the case  $k = 3$  and  $t \leq 3$ , which are polynomially solvable. To compare the

above two relaxations of circular coloring, in section 4, we prove that, for any two fixed positive integers  $k$  and  $d$ , deciding whether a graph  $G$  is  $(\frac{k}{2}, d)$ -colorable is NP-complete except the case  $k \leq 3$ , which is polynomially solvable. In section 5 we investigate relaxed 2-distant circular colorings of outerplanar graphs. For any outerplanar graph  $G$ , it is easy to see  $c\chi_2(G) \leq 6$ . This means outerplanar graphs are all  $(\frac{6}{2}, 0)^*$ -colorable. When  $k = 5$ , we give an outerplanar graph which is not  $(\frac{5}{2}, 1)^*$ -colorable. With the aid of ordered breath first search technique, we construct a polynomial-time algorithm to obtain a  $(\frac{5}{2}, 4)^*$ -coloring for any outerplanar graph. When  $k = 4$ , for any fixed positive integer  $t$ , we present a class of outerplanar graphs that is not  $(\frac{4}{2}, t)^*$ -colorable. However, on the other hand, we prove that all outerplanar graphs are  $(\frac{4}{2}, 2)$ -colorable.

## 2 $c\chi_2^t(G)$ for graph $G$ in some special classes of graphs

In this section, we determine the  $t$ -relaxed 2-distant circular chromatic numbers of paths, cycles and complete graphs.

**Theorem 2.1** *Let  $t$  be a positive integer and  $P_n$  a path on  $n$  vertices with  $n \geq 3$ . Then*

$$c\chi_2^t(P_n) = \begin{cases} 4, & \text{if } t = 1, \\ 2, & \text{if } t \geq 2. \end{cases}$$

**Proof.** Since the chromatic number of path  $P_n$  is 2, we have  $2 \leq c\chi_2^t(P_n) \leq 4$ . First we deal with the case  $t = 1$ . Suppose to the contrary that  $c\chi_2^1(P_n) \leq 3$ . Let  $f : V(P_n) \rightarrow \{0, 1, 2\}$  be a  $(\frac{3}{2}, 1)^*$ -coloring of  $P_n$ . Since the circular distance between any two colors in  $\{0, 1, 2\}$  is equal to 1, the vertex in  $V(P_n)$  with degree 2 can not be colored by colors in  $\{0, 1, 2\}$ . This is a contradiction and so  $c\chi_2^1(P_n) = 4$ . Next we assume  $t \geq 2$ . By assigning the color 0 to all vertices in one part of  $P_n$  and the color 1 to all vertices in the other part of  $P_n$ , we obtain a  $(\frac{2}{2}, t)^*$ -coloring of  $P_n$ . Thus,  $c\chi_2^t(P_n) = 2$  for  $t \geq 2$ . ■

**Theorem 2.2** *Let  $t$  be a positive integer and  $C_n$  a cycle on  $n$  vertices. Then*

$$c\chi_2^1(C_n) = \begin{cases} 4, & \text{if } n > 3, \\ 5, & \text{if } n = 3 \end{cases} \quad \text{and} \quad c\chi_2^t(C_n) = \begin{cases} 2, & \text{if } t \geq 2 \text{ and } n \text{ is even,} \\ 3, & \text{if } t \geq 2 \text{ and } n \text{ is odd.} \end{cases}$$

**Proof.** Note that the chromatic number of  $C_n$  is 2 if  $n$  is even and is 3 if  $n$  is odd. Since the degree of every vertex in  $C_n$  is 2, we have  $c\chi_2^t(C_n) = \chi(C_n)$  for any  $t \geq 2$ . Therefore, it is only necessary to consider the case  $t = 1$ . From Theorem 2.1, we have  $c\chi_2^1(P_n) = 4$  for  $n \geq 3$ , indicating that  $c\chi_2^1(C_n) \geq 4$  for  $n \geq 3$ . Let  $C_n = u_1 u_2 \dots u_n$ . If  $n$  is even (resp. odd and  $n \geq 5$ ), then we color the vertices  $u_1, u_2, \dots, u_n$  in the manner  $0, 2, 0, 2, \dots, 0, 2$  (resp.  $0, 2, 0, 2, \dots, 0, 2, 0, 1, 3$ ). It is straightforward to check that this gives a  $(\frac{4}{2}, 1)^*$ -coloring of  $C_n$ . Thus,  $c\chi_2^1(C_n) = 4$  if  $n \geq 4$ . When  $n = 3$ , suppose to the contrary that  $c\chi_2^1(C_3) = 4$ . Let  $f : V(C_3) \rightarrow \{0, 1, 2, 3\}$  be a  $(\frac{4}{2}, 1)^*$ -coloring of  $C_n$ . Without loss of generality, assume  $f(u_1) = 0$ . Since each vertex has at most one relaxation under the coloring  $f$ , the color 2 must be assigned to  $u_2$  or  $u_3$ . Then

whether  $u_2$  or  $u_3$  is colored by 2, another vertex can not be colored by colors in  $\{0, 1, 2, 3\}$ . This is a contradiction and  $c\chi_2^1(C_3) \geq 5$ . By assigning colors 0, 2 and 4 to vertices  $u_1, u_2$  and  $u_3$  respectively, we get a  $(\frac{5}{2}, 1)^*$ -coloring of  $C_3$ . Thus,  $c\chi_2^1(C_3) = 5$  and the theorem holds. ■

**Theorem 2.3** *Let  $t$  be a positive integer and  $K_n$  a complete graph on  $n$  vertices. Then*

$$c\chi_2^t(K_n) = \begin{cases} \frac{3n}{2}, & \text{if } t = 1 \text{ and } n \text{ is even,} \\ \frac{3n+1}{2}, & \text{if } t = 1 \text{ and } n \text{ is odd,} \\ n, & \text{if } t \geq 2. \end{cases}$$

**Proof.** Note that each color  $c$  in  $\{0, 1, \dots, n-1\}$  has only two colors whose circular distance from  $c$  is equal to 1. By assigning different colors in  $\{0, 1, \dots, n-1\}$  to  $n$  vertices of  $K_n$ , we get a 2-relaxed 2-distant circular  $n$ -coloring. It follows that  $c\chi_2^t(K_n) = n$  for  $t \geq 2$ .

Next we deal with the case  $t = 1$ . Suppose  $c\chi_2^1(K_n) = k$  and let  $f : V(K_n) \rightarrow \{0, 1, \dots, k-1\}$  be a  $(\frac{k}{2}, 1)^*$ -coloring of  $K_n$ . By the definition of 1-relaxed 2-distant circular coloring, the colors assigned to the  $n$  vertices must be different from each other, and for each vertex  $u \in V(K_n)$ , there is at most one neighbor  $v$  of  $u$  satisfying  $|f(u) - f(v)|_k = 1$ . Let  $j$  be a color in  $\{0, 1, \dots, k-1\}$ . Denote by  $n_j$  the number of vertices assigned color  $j$  by  $f$ . Then it is easy to see that  $n_j + n_{j+1} + n_{j+2} \leq 2$ , where the subscripts  $j+1$  and  $j+2$  are taken module  $k$ . Thus

$$3n = \sum_{j=0}^{k-1} (n_j + n_{j+1} + n_{j+2}) \leq 2 \cdot k,$$

implying  $k \geq \frac{3}{2}n$ . This means  $c\chi_2^1(K_n) \geq \frac{3}{2}n$ . To prove the theorem, it is necessary to give a 1-relaxed 2-distant circular coloring of  $K_n$ .

If  $n$  is even, let  $n = 2p$  ( $p$  is an integer greater than 1) and  $C_1 = \{0, 1, 3, 4, \dots, 3p-3, 3p-2\}$ . Note that  $|C_1| = 2p = n$ . By assigning different colors in  $C_1$  to vertices of  $K_n$ , we get a  $(\frac{3p}{2}, 1)^*$ -coloring of  $K_n$  and so  $c\chi_2^1(K_n) = 3p = \frac{3n}{2}$  for even  $n$ . If  $n$  is odd, it is clear that  $c\chi_2^1(K_n) = k \geq \frac{3n+1}{2}$ . Let  $n = 2p+1$  ( $p$  is a positive integer) and  $C_2 = \{0, 1, 3, 4, \dots, 3p-3, 3p-2, 3p\}$ . Then  $|C_2| = 2p+1 = n$ . By assigning different colors in  $C_2$  to vertices of  $K_n$ , we get a  $(\frac{3p+2}{2}, 1)^*$ -coloring and so  $c\chi_2^1(K_n) = 3p+2 = \frac{3n+1}{2}$  for odd  $n$ . ■

### 3 The complexity of $t$ -relaxed 2-distant circular coloring

The complexity of coloring and relaxed coloring has been studied extensively in the literature [2, 6, 9, 10]. Let's now introduce some known results about coloring and relaxed coloring of graphs, which are quite essential for proving our results on  $t$ -relaxed 2-distant circular coloring. Let  $l$  be a fixed integer with  $l \geq 3$ . It is well known that the  $l$ -coloring problem is NP-complete, please see [9]. Furthermore, Garey etc. proved the following result in [10].

**Lemma 3.1** [10] *The problem of determining whether a graph is 3-colorable is NP-complete, even for planar graphs whose maximum degrees are at most four.*

In section 1, we have mentioned the  $(k, t)$ -defective coloring and 2-distant circular coloring. The complexity about these two kinds of coloring has been proved as follows.

**Lemma 3.2** [6] *For any two fixed integers  $k \geq 2$  and  $t \geq 1$ , the problem of determining whether a graph is  $(k, t)$ -defective colorable is NP-complete.*

**Lemma 3.3** [2] *Let  $G$  be a graph. For any fixed positive integer  $k$  with  $k \geq 5$ , it is NP-complete to decide whether  $c\chi_2(G) \leq k$ .*

In this section, we consider the complexity of  $t$ -relaxed 2-distant circular coloring. Let  $k \geq 2$  and  $t \geq 1$  be two fixed integers.

**Problem 3.4**  $((\frac{k}{2}, t)^*$ -coloring problem)

*Instance:* A graph  $G$ .

*Question:* Is  $G$   $(\frac{k}{2}, t)^*$ -colorable?

It is obvious that if  $G$  is a nonempty graph, then  $c\chi_2^t(G) \geq 2$  for any positive integer  $t$ . Based on this observation, we assume  $k \geq 2$  in this section. When  $k = 2$  (resp.  $k = 3$ ), the circular distance between any two colors in  $\{0, 1\}$  (resp.  $\{0, 1, 2\}$ ) is 1. Note that in a  $t$ -relaxed 2-distant circular coloring, adjacent vertices must receive different colors. The following lemma is easy to see.

**Lemma 3.5** *Let  $t$  be a nonnegative integer and  $\Delta(G)$  be the maximum degree of  $G$ . Then a graph  $G$  is  $(\frac{2}{2}, t)^*$ -colorable if and only if  $G$  is a bipartite graph with  $\Delta(G) \leq t$ . And a graph  $G$  is  $(\frac{3}{2}, t)^*$ -colorable if and only if  $G$  is a 3-partite graph with  $\Delta(G) \leq t$ .*

Based on Lemma 3.5, Problem 3.4 for  $k = 2$  is polynomially solvable, and a graph  $G$  is  $(\frac{3}{2}, t)^*$ -colorable if and only if  $G$  is 3-colorable and  $\Delta(G) \leq t$ . Note that if  $\Delta(G) = 3$ , then  $G$  is 3-colorable unless  $G$  is isomorphic to complete graph  $K_4$ . Thus when  $k = 3$  and  $t \leq 3$ , Problem 3.4 is polynomially solvable. From Lemma 3.1, we know that 3-coloring problem is NP-complete for graphs whose maximum degrees are at most 4. Combining the above discussion and the fact that  $c\chi_2^t(G) = \chi(G)$  for any  $t \geq \Delta(G)$ , we have the following result.

**Lemma 3.6** *Let  $k$  and  $t$  be two integers with  $k \geq 2$  and  $t \geq 1$ . If  $k = 2$  or  $k = 3$  and  $t \leq 3$ , the  $(\frac{k}{2}, t)^*$ -coloring problem is polynomially solvable. Meanwhile, if  $t \geq 4$ , the  $(\frac{3}{2}, t)^*$ -coloring problem is NP-complete.*

From now on, we assume  $k \geq 4$ . We consider the following three cases:  $k = 4$  and  $t = 1$ ,  $k = 4$  and  $t \geq 2$ , and  $k \geq 5$ . The following lemma is essential in our proofs.

**Lemma 3.7** *Let  $P_4 = uxyv$  be a path on four vertices. Then the following two properties hold:*

- (1) *If  $f$  is a  $(\frac{4}{2}, 1)^*$ -coloring of  $P_4$  with  $f(u) = f(v)$ , then each of  $u$  and  $v$  must have one relaxation.*
- (2) *For any two different colors  $a$  and  $b$  in  $\{0, 1, 2, 3\}$ , there is a  $(\frac{4}{2}, 1)^*$ -coloring of  $P_4$  with  $\{f(u), f(v)\} = \{a, b\}$  such that both  $u$  and  $v$  have no relaxations.*

**Proof.** (1) Suppose  $f(u) = f(v) = a$ . If  $u$  has no relaxations, then  $f(x) = a + 2 \pmod{4}$ , implying  $f(y) \in \{a + 1 \pmod{4}, a + 3 \pmod{4}\}$ . So  $y$  has two relaxations, which contradicts the fact that  $f$  is a  $(\frac{4}{2}, 1)^*$ -coloring. It follows that  $f(x) \in \{a + 1 \pmod{4}, a + 3 \pmod{4}\}$ . Similarly,  $f(y) \in \{a + 1 \pmod{4}, a + 3 \pmod{4}\}$ . Since  $f(x) \neq f(y)$ , we must have  $\{f(x), f(y)\} = \{a + 1 \pmod{4}, a + 3 \pmod{4}\}$ . This means each of  $u$  and  $v$  has exactly one relaxation.

(2) We only need to consider two cases:  $f(u) = a$  and  $f(v) = a + 1 \pmod{4}$ , or  $f(u) = a$  and  $f(v) = a + 2 \pmod{4}$ . If  $f(u) = a$  and  $f(v) = a + 1 \pmod{4}$ , let  $f(x) = a + 2 \pmod{4}$  and  $f(y) = a + 3 \pmod{4}$ . If  $f(u) = a$  and  $f(v) = a + 2 \pmod{4}$ , let  $f(x) = a + 2 \pmod{4}$  and  $f(y) = a$ . It is easy to see that  $f$  is the desired  $(\frac{4}{2}, 1)^*$ -coloring of  $P_4$ . ■

**Lemma 3.8** *The  $(\frac{4}{2}, 1)^*$ -coloring problem is NP-complete.*

**Proof.** We prove this lemma by reducing the  $(4, 1)$ -defective coloring problem to the  $(\frac{4}{2}, 1)^*$ -coloring problem. Given an instance  $G$  of the  $(4, 1)$ -defective coloring problem, we construct an instance  $G^*$  of the  $(\frac{4}{2}, 1)^*$ -coloring problem by replacing each edge of  $G$  with a path  $P_4$ . It is obvious that the reduction can be accomplished in polynomial time.

If  $G$  has a  $(4, 1)$ -defective coloring  $f$  using colors in  $\{0, 1, 2, 3\}$ , then we can define a  $(\frac{4}{2}, 1)^*$ -coloring  $g$  of  $G^*$  as follows. For each vertex  $v \in V(G)$ , let  $g(v) = f(v)$ . Suppose the edge  $uv$  of  $G$  is replaced with the path  $P_4 = uxyv$ . The vertices  $x$  and  $y$  can be colored as follows.

If  $f(u) = f(v) = a$ , then let  $g(x) = a + 1 \pmod{4}$  and  $g(y) = a + 3 \pmod{4}$ . If  $f(u) \neq f(v)$ , then by Lemma 3.7 (2), we can color the two vertices  $x$  and  $y$  properly such that both  $u$  and  $v$  have no relaxations. It is clear that the mapping  $g$  is a  $(\frac{4}{2}, 1)^*$ -coloring of  $G^*$ .

On the other hand, suppose  $G^*$  has a  $(\frac{4}{2}, 1)^*$ -coloring  $g$ , then let  $h(u) = g(u)$  for any vertex  $u \in V(G)$ . Let  $u$  and  $v$  be any two adjacent vertices in  $G$ . By Lemma 3.7 (1), we know that if  $g(u) = g(v)$ , then there is no any other neighbors of  $u$  (resp.  $v$ ) in  $G$  which has the same color as  $u$  (resp.  $v$ ). Thus the mapping  $h$  is a  $(4, 1)$ -defective coloring of  $G$ .

We have shown that  $G$  has a  $(4, 1)$ -defective coloring if and only if  $G^*$  has a  $(\frac{4}{2}, 1)^*$ -coloring. Consequently, the NP-completeness of the  $(\frac{4}{2}, 1)^*$ -coloring problem follows from that of the  $(4, 1)$ -defective coloring problem. Therefore, the lemma holds by Lemma 3.2. ■

We now turn to the case  $k = 4$  and  $t \geq 2$ .

**Lemma 3.9** *Let  $t$  be a fixed integer with  $t \geq 2$ . Then the  $(\frac{4}{2}, t)^*$ -coloring problem is NP-complete.*

**Proof.** We prove this lemma by the reduction from the  $(4, t)$ -defective coloring problem to the  $(\frac{4}{2}, t)^*$ -coloring problem. Let  $G$  be an instance of the  $(4, t)$ -defective coloring problem. We construct an instance  $G_t^*$  from  $G$  by replacing each edge  $uv \in E(G)$  with the graph  $A_{t-1}(u, v)$ , which consists of a path  $P_4 = uxyv$  with  $x$  (resp.  $y$ ) connecting to the  $2(t - 1)$  vertices of the  $t - 1$  disjoint copies of  $K_2$ . Please see Figure 1 for the graph  $A_4(u, v)$  as an example. It is obvious that the reduction is polynomial.

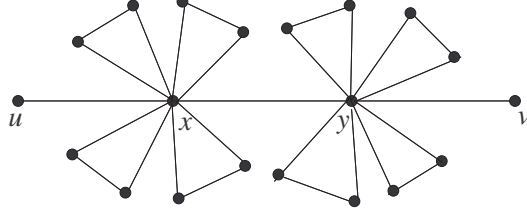


Figure 1: The graph  $A_4(u, v)$

Suppose  $G$  has a  $(4, t)$ -defective coloring  $f$  using colors in  $\{0, 1, 2, 3\}$ . Then we define a  $(\frac{4}{2}, t)^*$ -coloring  $g$  of  $G_t^*$  as follows. For each vertex  $v$  in  $V(G)$ , let  $g(v) = f(v)$ . For any edge  $uv \in E(G)$ , there is a path  $P_4 = uxyv$  in  $G_t^*$ . If  $f(u) = f(v) = a$ , then let  $g(x) = a + 1 \pmod{4}$  and  $g(y) = a + 3 \pmod{4}$ , and assign  $a + 2 \pmod{4}$  and  $a + 3 \pmod{4}$  (resp.  $a$  and  $a + 1 \pmod{4}$ ) to the two vertices in each of the  $t - 1$  copies of  $K_2$  connected to  $x$  (resp.  $y$ ). If  $f(u) \neq f(v)$ , by Lemma 3.7 (2), we can assign colors to  $x$  and  $y$  satisfying  $|g(u) - g(x)|_4 = |g(v) - g(y)|_4 = 2$  and  $|g(x) - g(y)|_4 \geq 1$ . We then assign  $g(x) + 1 \pmod{4}$  and  $g(x) + 2 \pmod{4}$  (resp.  $g(y) + 1 \pmod{4}$  and  $g(y) + 2 \pmod{4}$ ) to the two vertices in each of the  $t - 1$  copies of  $K_2$  connected to  $x$  (resp.  $y$ ). Since  $f$  is a  $(4, t)$ -defective coloring of graph  $G$ , it is easy to see that  $g$  is a  $(\frac{4}{2}, t)^*$ -coloring of graph  $G_t^*$ .

Now suppose  $G_t^*$  has a  $(\frac{4}{2}, t)^*$ -coloring  $g$ . Let  $uv$  be an edge of  $G$  and  $uxyv$  be the corresponding  $P_4$  in  $G_t^*$ . By Lemma 3.7 (1), if  $g(u) = g(v)$ , then  $|g(u) - g(x)|_4 = |g(v) - g(y)|_4 = 1$ . It follows that, for each vertex  $u$  of  $G$ , there are at most  $t$  neighbors  $v$  in  $G$  with  $g(u) = g(v)$ . Let  $h(v) = g(v)$  for each  $v \in V(G)$ . It is clear that  $h$  is a  $(4, t)$ -defective coloring of  $G$ .

Since we have shown that  $G$  has a  $(4, t)$ -defective coloring if and only if  $G_t^*$  has a  $(\frac{4}{2}, t)^*$ -coloring, the NP-completeness of the  $(\frac{4}{2}, t)^*$ -coloring is established by Lemma 3.2.  $\blacksquare$

Finally, we consider the general case  $k \geq 5$ . We construct a reduction from the 2-distant circular coloring problem to the  $(\frac{k}{2}, t)^*$ -coloring problem. Let  $G$  and  $H$  be two simple graphs. The *composition* of  $G$  and  $H$  is the graph  $G[H]$  with vertex set  $V(G) \times V(H)$  in which  $(u, v)$  is adjacent to  $(u', v')$  if and only if either  $uu' \in E(G)$  or  $u = u'$  and  $vv' \in E(H)$ . Denote the empty graph on  $p$  vertices by  $K_p^c$ .

**Lemma 3.10** *Let  $k$  and  $t$  be two fixed integers with  $k \geq 5$  and  $t \geq 1$ . Then the  $(\frac{k}{2}, t)^*$ -coloring problem is NP-complete.*

**Proof.** We prove this lemma by reducing the  $\frac{k}{2}$ -coloring problem to the  $(\frac{k}{2}, t)^*$ -coloring problem. Let  $G$  be an instance of the  $\frac{k}{2}$ -coloring problem. We construct an instance  $G^* = G[K_{kt+1}^c]$  of the  $(\frac{k}{2}, t)^*$ -coloring problem.

Assume  $|V(G)| = n$  and let  $V(G) = \{v_1, v_2, \dots, v_n\}$ . Let the vertex set of  $K_{kt+1}^c$  be  $\{w_1, w_2, \dots, w_{kt+1}\}$ . For simplicity, for  $i \in \{1, 2, \dots, n\}$  and  $j \in \{1, 2, \dots, kt+1\}$ , let  $v_i^j$  denote the vertex  $(v_i, w_j)$  of  $G[K_{kt+1}^c]$ . We use  $V_i$  to denote the vertex set  $\{v_i^1, v_i^2, \dots, v_i^{kt+1}\}$ .



Suppose  $f$  is a  $\frac{k}{2}$ -coloring of  $G$ . Then we define  $g(v_i^j) = f(v_i)$  for  $i = 1, 2, \dots, n$  and  $j = 1, 2, \dots, kt + 1$ . Since  $V_i$  is an independent set of  $G^*$ , it is obvious that  $g$  is a 2-distant circular  $k$ -coloring of  $G^*$ . Of course,  $g$  is a  $(\frac{k}{2}, t)^*$ -coloring.

Now suppose  $g$  is a  $(\frac{k}{2}, t)^*$ -coloring of  $G^*$ . We are going to define a 2-distant circular  $k$ -coloring  $h$  of  $G$ . For  $i = 1, 2, \dots, n$ , since  $V_i$  has  $kt + 1$  vertices and  $g$  only use  $k$  colors, by the pigeonhole principle, there is a color that is assigned to at least  $t + 1$  vertices in  $V_i$ , denoted this color by  $c_i$ . Let  $h(v_i) = c_i$  for  $i = 1, 2, \dots, n$ . If  $v_i v_s \in E(G)$ , we have  $|h(v_i) - h(v_s)|_k \geq 2$ , since otherwise the vertex in  $V_i$  with color  $c_i$  would be relaxed at least  $t + 1$  times in  $V_s$  under the  $(\frac{k}{2}, t)^*$ -coloring  $g$  of  $G^*$ . Thus  $h$  is a 2-distant circular  $k$ -coloring of  $G$ .

We have shown that  $G$  has a  $\frac{k}{2}$ -coloring if and only if  $G^*$  has a  $(\frac{k}{2}, t)^*$ -coloring. So, the NP-completeness of the  $(\frac{k}{2}, t)^*$ -coloring is established from Lemma 3.3. ■

Combining Lemma 3.6, 3.8, 3.9 and 3.10, we have the following theorem.

**Theorem 3.11** *Let  $k$  and  $t$  be two fixed integers with  $k \geq 2$  and  $t \geq 1$ . The  $(\frac{k}{2}, t)^*$ -coloring problem is NP-complete except the case  $k = 2$  and the case  $k = 3$  and  $t \leq 3$ , which are polynomially solvable.*

## 4 The complexity of defective circular coloring

To compare the difference between  $t$ -relaxed 2-distant circular coloring and  $d$ -defective 2-distant circular coloring, we consider the complexity of  $d$ -defective 2-distant circular coloring in this section. Let  $k$  and  $d$  be two fixed positive integers.

**Problem 4.1**  $((\frac{k}{2}, d)$ -coloring problem)

*Instance:* A graph  $G$ .

*Question:* Is  $G$   $(\frac{k}{2}, d)$ -colorable?

Note that, for  $1 \leq k \leq 3$ , the circular distance between any two colors in  $\{0, 1, \dots, k - 1\}$  are less than 2. Therefore, if a graph  $G$  is  $(\frac{k}{2}, d)$ -colorable for some  $1 \leq k \leq 3$ , then we must have  $\Delta(G) \leq d$ . On the other hand, it is easy to see that if  $\Delta(G) \leq d$ , then  $G$  is  $(\frac{k}{2}, d)$ -colorable for any  $1 \leq k \leq 3$ . Thus, a graph  $G$  is  $(\frac{k}{2}, d)$ -colorable for some  $1 \leq k \leq 3$  if and only if  $\Delta(G) \leq d$ . So, we have the following lemma.

**Lemma 4.2** *Let  $k$  and  $d$  be two positive integers. If  $k \leq 3$ , then the  $(\frac{k}{2}, d)$ -coloring problem is polynomially solvable.*

**Lemma 4.3** *Let  $d$  be a fixed positive integer. Then the  $(\frac{4}{2}, d)$ -coloring problem is NP-complete.*

**Proof.** We prove this lemma by reducing the  $(2, d)$ -defective coloring problem to the  $(\frac{4}{2}, d)$ -coloring problem. Let  $G$  be an instance of the  $(2, d)$ -defective coloring problem.

If  $G$  has a  $(\frac{4}{2}, d)$ -coloring  $f$  using colors in  $\{0, 1, 2, 3\}$ , then we define a  $(2, d)$ -defective coloring  $g$  of  $G$  as follows. For each vertex  $v \in V(G)$ , if  $f(v) \in \{0, 1\}$  (resp.  $f(v) \in \{2, 3\}$ ), then we let  $g(v) = 0$  (resp.  $g(v) = 1$ ). By the definition of  $(\frac{4}{2}, d)$ -coloring, for any vertex  $v \in V(G)$ , if  $f(v) \in \{0, 1\}$  (resp.  $\{2, 3\}$ ), then there are at most  $d$  vertices adjacent to  $v$  which are colored by colors in  $\{0, 1\}$  (resp.  $\{2, 3\}$ ). It follows that under the coloring  $g$ , there are at most  $d$  vertices adjacent to  $v$  which are colored by the same color as  $v$ . Thus,  $g$  is a  $(2, d)$ -defective coloring of  $G$ .

On the other hand, we suppose  $G$  has a  $(2, d)$ -defective coloring  $g$  using colors in  $\{0, 1\}$ . Then we define a  $(\frac{4}{2}, d)$ -coloring  $h$  of  $G$  as follows. For each vertex  $v \in V(G)$ , if  $g(v) = 0$  (resp.  $g(v) = 1$ ), then we let  $h(v) = 0$  (resp.  $h(v) = 2$ ). Since for any vertex  $v$ , there are at most  $d$  vertices which have the same color as  $v$ , it is clear that  $h$  is a  $(\frac{4}{2}, d)$ -coloring of  $G$ .

We have shown that  $G$  has a  $(2, d)$ -defective coloring if and only if  $G$  has a  $(\frac{4}{2}, d)$ -coloring. Thus the NP-completeness of the  $(\frac{4}{2}, d)$ -coloring problem follows from that of the  $(2, d)$ -defective coloring problem. Therefore, the lemma holds by Lemma 3.2.  $\blacksquare$

At the end of this section, we prove the NP-completeness of Problem 4.1 for  $k \geq 5$ . We need the following lemma.

**Lemma 4.4** *Let  $k$  and  $d$  be two fixed integers with  $k \geq 5$  and  $d \geq 1$ . Then for the complete graph  $G = K_{\lfloor \frac{k}{2} \rfloor (d+1)}$ , each vertex in  $V(G)$  must be relaxed  $d$  times in any  $(\frac{k}{2}, d)$ -coloring of  $G$ .*

**Proof.** Suppose  $f$  is a  $(\frac{k}{2}, d)$ -coloring of  $G$ . Suppose to the contrary that there is a vertex  $u \in V(G)$  which has at most  $d - 1$  relaxations. By the symmetry of colors, we may assume  $f(u) = 0$ . Because  $f$  is a  $(\frac{k}{2}, d)$ -coloring, there are at most  $d$  vertices which are assigned colors in  $\{0, 1, k - 1\}$ . Therefore, the number of vertices which are assigned colors in  $A = \{2, 3, \dots, k - 2\}$  is at most  $\lfloor \frac{k}{2} \rfloor (d + 1) - d = (\lfloor \frac{k}{2} \rfloor - 1)(d + 1) + 1$ . Note that  $|A| = k - 3$ . Under the definition of  $(\frac{k}{2}, d)$ -coloring, we know that two consecutive colors in  $A$  can be assigned to at most  $d + 1$  vertices. Consequently, if  $k$  is even, then the  $k - 3$  colors in  $A$  can be assigned to at most  $\frac{k-4}{2}(d + 1) + d + 1 = \frac{k-2}{2}(d + 1) = (\lfloor \frac{k}{2} \rfloor - 1)(d + 1)$  vertices; if  $k$  is odd, then the  $k - 3$  colors in  $A$  can be assigned to at most  $\frac{k-3}{2}(d + 1) = (\lfloor \frac{k}{2} \rfloor - 1)(d + 1)$  vertices. This is a contradiction since  $d + (\lfloor \frac{k}{2} \rfloor - 1)(d + 1) < \lfloor \frac{k}{2} \rfloor (d + 1)$ . Thus the lemma holds.  $\blacksquare$

**Lemma 4.5** *Let  $k$  and  $d$  be two fixed integers with  $k \geq 5$  and  $d \geq 1$ . Then the  $(\frac{k}{2}, d)$ -coloring problem is NP-complete.*

**Proof.** We prove this lemma by reducing the  $\frac{k}{2}$ -coloring problem to the  $(\frac{k}{2}, d)$ -coloring problem. Let  $G$  be an instance of the  $\frac{k}{2}$ -coloring problem. We construct from  $G$  an instance  $G^*$  of the  $(\frac{k}{2}, d)$ -coloring problem as follows: for each vertex  $v$  of  $G$ , take a copy of  $K_{\lfloor \frac{k}{2} \rfloor (d+1)}$  and identify one of its vertices with  $v$ . We denote this copy of  $K_{\lfloor \frac{k}{2} \rfloor (d+1)}$  by  $K_v$ .

Suppose  $G$  has a  $\frac{k}{2}$ -coloring  $f$  using colors in  $\{0, 1, \dots, k - 1\}$ . Then we define a  $(\frac{k}{2}, d)$ -coloring of  $G^*$  as follows. For each vertex  $v \in V(G)$ , let  $g(v) = f(v)$ . If  $k$  is even (resp. odd),

then let the  $\lfloor \frac{k}{2} \rfloor (d+1)$  vertices in  $K_v$  be assigned colors in  $\{f(v), f(v)+2, \dots, f(v)+k-2\}$  (resp.  $\{f(v), f(v)+2, \dots, f(v)+k-3\}$ ) (where all “+”s are taken modulo  $k$ ), such that each color is assigned to  $d+1$  vertices. It is straightforward to check that the coloring  $g$  is a  $(\frac{k}{2}, d)$ -coloring of graph  $G^*$ .

On the other hand, suppose  $G^*$  has a  $(\frac{k}{2}, d)$ -coloring  $g$ . Then let  $h(v) = g(v)$  for any vertex  $v \in V(G)$ . By lemma 4.4, we know that vertex  $v$  has  $d$  relaxations in  $V(K_v \setminus \{v\})$ . Thus the mapping  $h$  is a  $\frac{k}{2}$ -coloring of  $G$ .

We have shown that  $G$  has a  $\frac{k}{2}$ -coloring if and only if  $G^*$  has a  $(\frac{k}{2}, d)$ -coloring. So, the NP-completeness of the  $(\frac{k}{2}, d)$ -coloring is established by Lemma 3.3.  $\blacksquare$

Combining Lemma 4.2, 4.3 and 4.5, we have the following result:

**Theorem 4.6** *Let  $k$  and  $d$  be two fixed positive integers. The  $(\frac{k}{2}, d)$ -coloring problem is NP-complete except the case  $k \leq 3$ , which is polynomially solvable.*

## 5 Relaxed 2-distant circular coloring of outerplanar graphs

In this section, we study the relaxed 2-distant circular coloring of outerplanar graphs. An *outerplanar graph* is a graph with a planar drawing for which all vertices belong to the outer face of the drawing. It is shown that a graph  $G$  is an outerplanar graph if and only if  $G$  has no subdivision of complete graph  $K_4$  and complete bipartite graph  $K_{2,3}$ . For  $d$ -defective 2-distant circular coloring, Klostermeyer studied the  $(\frac{5}{2}, 1)$ -colorability of outerplanar graphs in [16].

### 5.1 A graph that is $(\frac{4}{2}, 1)$ -colorable but not $(\frac{4}{2}, 1)^*$ -colorable

To compare the two relaxations of circular coloring, we give an example to illustrate the difference between the  $(\frac{k}{2}, d)$ -coloring and the  $(\frac{k}{2}, t)^*$ -coloring in this subsection. An outerplanar graph  $G_5$  is defined as follows. The vertex set is  $V(G_5) = \{x, y_1, y_2, \dots, y_6, u_1, u_2, \dots, u_5, v_1, v_2, \dots, v_5\}$ . And the edge set is the union of  $\{xy_i | i = 1, 2, \dots, 6\}$  and  $\{y_i u_i, u_i v_i, v_i y_{i+1} | i = 1, 2, \dots, 5\}$ . Note that the boundary of each interior face of  $G_5$  is a 5-cycle. The vertices along the exterior face of  $G_5$  form a cycle  $xy_1 u_1 v_1 y_2 \dots y_5 u_5 v_5 y_6 x$ .

We First consider the  $(\frac{4}{2}, 1)$ -coloring of graph  $G_5$ . We give a mapping  $f$  from  $V(G_5)$  to  $\{0, 1, 2, 3\}$  such that  $f(x) = f(u_i) = f(v_i) = 0$  ( $i = 1, 2, \dots, 5$ ) and  $f(y_j) = 2$  ( $j = 1, 2, \dots, 6$ ). See Figure 2. It is clear that the coloring  $f$  satisfies that each vertex  $v$  is adjacent to at most one vertex  $u$  with  $|f(u) - f(v)|_4 \leq 1$ . Thus,  $G_5$  is  $(\frac{4}{2}, 1)$ -colorable. However, for  $t$ -relaxed 2-distant circular coloring, we shall prove that the graph  $G_5$  is not  $(\frac{4}{2}, 1)^*$ -colorable.

**Theorem 5.1** *The graph  $G_5$  is  $(\frac{4}{2}, 2)^*$ -colorable, but is not  $(\frac{4}{2}, 1)^*$ -colorable.*

**Proof.** The  $(\frac{4}{2}, 2)^*$ -colorability of  $G_5$  is demonstrated by a  $(\frac{4}{2}, 2)^*$ -coloring of  $G_5$  indicated in Figure 3. We next prove that  $G_5$  is not  $(\frac{4}{2}, 1)^*$ -colorable.

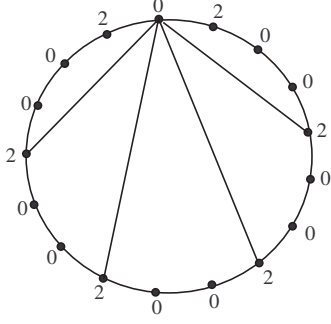


Figure 2: A  $(\frac{4}{2}, 1)$ -coloring of  $G_5$

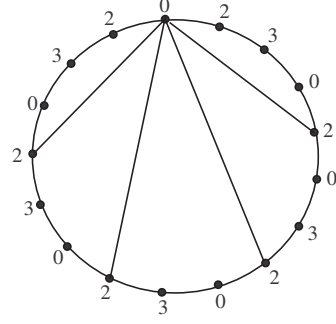


Figure 3: A  $(\frac{4}{2}, 2)^*$ -coloring of  $G_5$

Suppose to the contrary that  $G_5$  is  $(\frac{4}{2}, 1)^*$ -colorable and let  $f : V(G_5) \rightarrow \{0, 1, 2, 3\}$  be a  $(\frac{4}{2}, 1)^*$ -coloring of  $G_5$ . Without loss of generality, we may assume  $f(x) = 0$ . We claim that the vertices  $y_1, y_2$  and  $y_3$  can not be all colored by 2. Suppose  $f(y_1) = f(y_2) = f(y_3) = 2$ . Since  $f$  is a 1-relaxed 2-distant circular coloring of  $G_5$ , it is not difficult to see that  $\{f(u_1), f(v_1)\}$  and  $\{f(u_2), f(v_2)\}$  must be  $\{1, 3\}$ . But then  $y_2$  is relaxed two times. So,  $y_1, y_2$  and  $y_3$  can not be all colored by 2. It follows that the vertex  $x$  must have one relaxation in  $\{y_1, y_2, y_3\}$ . Symmetrically,  $x$  must also have one relaxation in  $\{y_4, y_5, y_6\}$ . This is a contradiction since  $f$  is a  $(\frac{4}{2}, 1)^*$ -coloring. Thus the theorem holds. ■

## 5.2 $(\frac{5}{2}, 4)^*$ -coloring for all outerplanar graphs

For an outerplanar graph  $G$ , since the chromatic number of  $G$  is at most 3, we have  $c\chi_2^t(G) \leq 2\chi(G) = 6$  for any nonnegative integer  $t$ , indicating that all outerplanar graphs are  $(\frac{6}{2}, 0)^*$ -colorable. It was proved in [5] that every outerplanar graph is  $(2, 2)$ -defective colorable. With this result in mind, it is natural to ask whether there exists an positive integer  $t$  such that every outerplanar graph is  $(\frac{5}{2}, t)^*$ -colorable (resp.  $(\frac{5}{2}, t)$ -colorable). To answer this question, we first give an outerplanar graph which is not  $(\frac{5}{2}, 1)^*$ -colorable and also is not  $(\frac{5}{2}, 1)$ -colorable (see [16]).

**Theorem 5.2** *There exists an outerplanar graph that is not  $(\frac{5}{2}, 1)^*$ -colorable.*

**Proof.** It is easy to verify that the graph in Figure 4 is not  $(\frac{5}{2}, 1)^*$ -colorable. ■

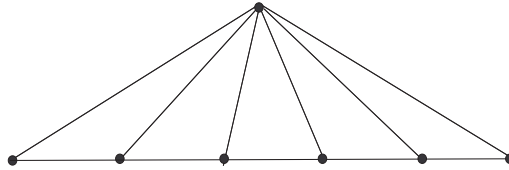


Figure 4: An outerplanar graph which is not  $(\frac{5}{2}, 1)^*$ -colorable

Next we apply the ordered breadth first search algorithm (which was introduced by Calamoneri and Petreschi in [4]) for an outerplanar graph  $G$  to construct a spanning tree  $T$  of  $G$ .

Then we produce a particular  $(\frac{5}{2}, 0)^*$ -coloring  $f$  of  $T$ . With the properties of  $T$ , we finally prove that  $f$  is a  $(\frac{5}{2}, 4)^*$ -coloring of the outerplanar graph  $G$ .

Let  $G$  be a connected outerplanar graph. Choose a vertex  $r \in V(G)$ . At the beginning, we order all vertices clockwise started from  $r$  and along the outerface of  $G$ . Now, we perform a breadth first search starting from  $r$  in such a way that vertices coming first in the ordering are visited first. The authors of [4] called such progress *ordered breadth first search* (OBFS). The spanning tree obtained by OBFS is called *ordered breadth first tree* (OBFT). Using OBFS, an connected outerplanar graph  $G$  can be edge-partitioned into a spanning tree  $T$  and a subgraph  $H$ , that is  $E(G) = E(T) \cup E(H)$  and  $E(T) \cap E(H) = \emptyset$ . This edge-partition is called an *OBFT partition*. To give an example of OBFT partition, we consider the outerplanar graph  $G_1$  depicted in Figure 5. In Figure 6, vertex  $v_1$  is the root of the tree  $T$  produced by OBFT partition and solid (resp. broken) lines denote tree-edges (resp. non-tree-edges). Calamoneri and Petreschi studied the  $L(h, 1)$ -labeling of outerplanar graphs on the basis of OBFS algorithm in [4]. Later, the authors of [22] used OBFT partition to design a polynomial-time algorithm producing nearly-optimal solutions for an edge coloring problem of outerplanar graphs.

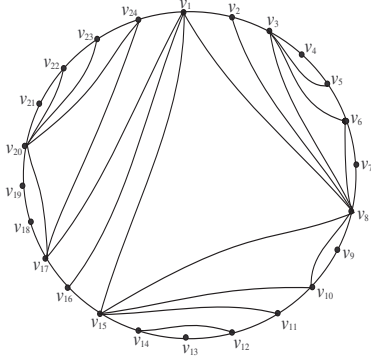


Figure 5: An outerplanar graph  $G_1$

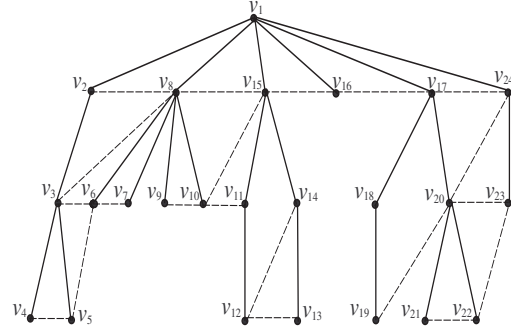


Figure 6: An OBFT partition of  $G_1$

A tree with a particular vertex  $r$  designated as its root is called a *rooted tree*, denoted by  $T_r$ . According to the distance to the root  $r$ , the vertices of a rooted tree can be arranged in layers. All vertices at distance  $i$  from the root form the  $i^{th}$ -layer. Hence, the  $0^{th}$ -layer consists of the root only. For a vertex  $u$  in the  $i^{th}$ -layer ( $i \geq 1$ ), the neighbor of  $u$  in the  $(i-1)^{th}$ -layer is called its *father* and all neighbors of  $u$  in the  $(i+1)^{th}$ -layer are called its *sons*. Let  $SON(u)$  denote the set of all sons of  $u$ . If two vertices have the same father, we say they are *brothers*. Given two vertices  $u$  and  $v$  in  $V(T_r)$ , let  $P(u, v)$  denote the unique path from  $u$  to  $v$  in  $T_r$ . The last common vertex of  $P(r, u)$  and  $P(r, v)$  is called *the latest common ancestor* of  $u$  and  $v$ , denoted by  $LCA(u, v)$ . Let  $u$  and  $v$  be two vertices of  $G$ . If  $uv \in E(H)$  or  $u$  and  $v$  are two consecutive vertices in the same layer, then we define  $Int(u, v)$  as the set of vertices falling within the region bounded by two paths  $P(LCA(u, v), u)$  and  $P(LCA(u, v), v)$  together with the edge  $uv$ . For example, in Figure 6, we have  $Int(v_{10}, v_{11}) = \emptyset$ ,  $Int(v_{13}, v_{19}) = \{v_{16}\}$  and  $Int(v_{19}, v_{20}) = \emptyset$ . For a connected outerplanar graph, choosing any vertex  $r$  and using OBFT

partition, we can get a rooted tree  $T_r$  and a subgraph  $H$ . Let  $L(T_r)$  denote the number of layers of  $T_r$ . For  $i = 0, 1, \dots, L(T_r) - 1$ , denote by  $l_i$  the number of vertices in the  $i^{th}$ -layer. Vertices in the  $i^{th}$ -layer are denoted from left to right by  $v_1^i, v_2^i, \dots, v_{l_i}^i$ . Some key properties about  $T_r$  and  $H$  are either given in [4] and [22] or easily obtained according to outerplanarity of graph.

**Lemma 5.3** *Every OBFT partition  $T_r \cup H$  for a connected outerplanar graph  $G$  has the following properties:*

- (1) *The maximum degree of  $H$  is at most 4.*
- (2) *If  $v_p^i$  is adjacent to  $v_q^i$ , then  $v_p^i v_q^i$  is a non-tree-edge, and  $q = p + 1$  or  $p = q + 1$ .*
- (3) *If  $v_p^i v_q^j \in E(H)$  and  $j < i$ , then  $j = i - 1$ .*
- (4) *If  $v_p^i v_q^{i-1} \in E(H)$  and  $v_p^i$  is a son of  $v_h^{i-1}$ , then  $q = h + 1$  and  $v_p^i$  is the rightmost son of  $v_h^{i-1}$ . Meanwhile,  $Int(v_p^i, v_q^{i-1}) = \emptyset$ .*
- (5) *Let  $v_p^{i+1}$  be a son of  $v_l^i$ , and  $v_q^{i+1}$  be a son of  $v_h^i$  such that  $l \leq h$  and  $p < q$ . If  $v_p^{i+1} v_q^{i+1} \in E(H)$ , then  $q = p + 1$ , and  $h = l$  or  $h = l + 1$ . Meanwhile,  $Int(v_p^{i+1}, v_q^{i+1}) = \emptyset$ .*

For a connected outerplanar graph  $G$ , we choose any vertex  $r$  as root and use OBFT partition to get a rooted tree  $T_r$ . The following algorithm will produce a  $(\frac{5}{2}, 0)^*$ -coloring of  $T_r$  and Figure 7 gives a  $(\frac{5}{2}, 0)^*$ -coloring constructed by the algorithm for subgraph  $T_{v_1}$  of  $G_1$ .

---

**Algorithm 1** Construct a  $(\frac{5}{2}, 0)^*$ -coloring  $f$  for  $T_r$

---

- 1: Assign color 0 to the root  $r$ , that is  $f(r) = 0$ ;
  - 2: Assign colors 2 and 3 to the sons of  $r$  alternately from left to right;
  - 3: **for**  $i := 1$  to  $L(T_r) - 2$  **do**
  - 4:   Let  $q = \min_{1 \leq h \leq i} \{SON(v_h^i) \neq \emptyset\}$ ;
  - Assign colors  $f(v_q^i) + 2 \pmod{5}$  and  $f(v_q^i) + 3 \pmod{5}$  to the sons of  $v_q^i$  alternately from left to right;
  - 5:   **for**  $p := q + 1$  to  $l_i$  **do**
  - 6:     **while**  $SON(v_p^i) \neq \emptyset$  **do**
  - 7:       **if**  $SON(v_{p-1}^i) \neq \emptyset$  and  $Int(v_{p-1}^i, v_p^i) = \emptyset$  **then**
  - 8:          Assign colors  $f(v_p^i) + 2 \pmod{5}$  and  $f(v_p^i) + 3 \pmod{5}$  to the sons of  $v_p^i$  alternately from left to right, such that the circular distance between the color assigned to the leftmost son of  $v_p^i$  and the color assigned to the rightmost son of  $v_{p-1}^i$  is one.
  - 9:       **else**
  - 10:          Assign colors  $f(v_p^i) + 2 \pmod{5}$  and  $f(v_p^i) + 3 \pmod{5}$  to the sons of  $v_p^i$  alternately from left to right.
  - 11:       **end if**
  - 12:     **end while**
  - 13:   **end for**
  - 14: **end for**
- 

To prove the correctness of the algorithm, it suffices to verify that in line 8 of Algorithm 1, sons of  $v_p^i$  can be assigned the colors satisfying the conditions specified in the algorithm.

**Lemma 5.4** *Let  $G$  be an outerplanar graph and  $T_r$  a rooted tree obtained by an OBFT partition of  $G$ . For  $i \in \{1, 2, \dots, L(r) - 2\}$  and  $p \in \{1, 2, \dots, l_i - 1\}$ , let  $v_h^{i+1}$  be the rightmost son of  $v_p^i$*

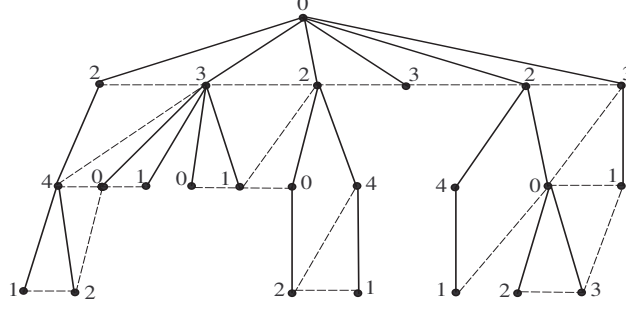


Figure 7: A  $(\frac{5}{2}, 0)^*$ -coloring for subgraph  $T_{v_1}$  of  $G_1$  constructed by Algorithm 1

and  $v_{h+1}^{i+1}$  be the leftmost son of  $v_{p+1}^i$ . Suppose  $f$  is the coloring of  $T_r$  produced by Algorithm 1. If  $\text{Int}(v_p^i, v_{p+1}^i) = \emptyset$ , then  $|f(v_h^{i+1}) - f(v_{h+1}^{i+1})|_5 = 1$ .

**Proof.** We prove this lemma by induction on the value of  $i$ . Assume  $i = 1$ . By Algorithm 1, we have  $\{f(v_p^1), f(v_{p+1}^1)\} = \{2, 3\}$  for all  $p \in \{1, 2, \dots, l_1 - 1\}$ . Without loss of generality, we assume  $f(v_p^1) = 2$  and  $f(v_{p+1}^1) = 3$ . According to Algorithm 1, colors 0 and 4 appear on the sons of  $v_p^1$  alternately from left to right. If  $f(v_h^2) = 0$  (resp.  $f(v_h^2) = 4$ ), then Algorithm 1 will assign color 1 (resp. color 0) to  $v_{h+1}^2$ , and all sons of  $v_{p+1}^1$  from left to right are colored in the pattern as (1010...) (resp. (0101...)). It is clear that the lemma holds for  $i = 1$ .

Now let  $i$  be an integer in  $\{2, 3, \dots, L(r) - 2\}$ . Let  $\text{LCA}(v_p^i, v_{p+1}^i) = v_{h_1}^{i-j}$  for some  $1 \leq j \leq i$  and  $1 \leq h_1 \leq l_{i-j}$ . Let  $P(v_{h_1}^{i-j}, v_p^i) = v_{h_1}^{i-j} v_{h_2}^{i-j+1} \dots v_{h_j}^{i-1} v_p^i$ . Because  $\text{Int}(v_p^i, v_{p+1}^i) = \emptyset$ ,  $P(v_{h_1}^{i-j}, v_{p+1}^i)$  must be  $v_{h_1}^{i-j} v_{h_2}^{i-j+1} \dots v_{h_{j+1}}^{i-1} v_{p+1}^i$ . If  $j = 1$ , then  $v_p^i$  and  $v_{p+1}^i$  are brothers and so according to Algorithm 1, we have  $|f(v_p^i) - f(v_{p+1}^i)|_5 = 1$ . If  $j \geq 2$ , since  $\text{Int}(v_{h_j}^{i-1}, v_{h_{j+1}}^{i-1}) = \emptyset$ , by the inductive hypothesis, we also have  $|f(v_p^i) - f(v_{p+1}^i)|_5 = 1$ . Without loss generality, we may assume  $f(v_p^i) = a$  and  $f(v_{p+1}^i) = a + 1 \pmod{5}$  for some  $a \in \{0, 1, 2, 3, 4\}$ . Then Algorithm 1 assigns  $a + 2 \pmod{5}$  or  $a + 3 \pmod{5}$  (resp.  $a + 3 \pmod{5}$  or  $a + 4 \pmod{5}$ ) to  $v_h^{i+1}$  (resp.  $v_{h+1}^{i+1}$ ). According to Algorithm 1, if  $f(v_h^{i+1}) = a + 2 \pmod{5}$  (resp.  $f(v_h^{i+1}) = a + 3 \pmod{5}$ ), then  $f(v_{h+1}^{i+1}) = a + 3 \pmod{5}$  (resp.  $f(v_{h+1}^{i+1}) = a + 4 \pmod{5}$ ). In both two cases, we have  $|f(v_h^{i+1}) - f(v_{h+1}^{i+1})|_5 = 1$ . The proof is completed.  $\blacksquare$

Note that the coloring  $f$  produced by Algorithm 1 satisfies  $|f(u) - f(v)|_5 = 2$  for any edge  $uv \in E(T_r)$ . The following result is obtained.

**Lemma 5.5** Suppose  $G$  is a connected outerplanar graph, Algorithm 1 produces a  $(\frac{5}{2}, 0)^*$ -coloring for any ordered breadth first tree of  $G$ .

We next show that the  $(\frac{5}{2}, 0)^*$ -coloring  $f$  of  $T_r$  produced by Algorithm 1 is actually a  $(\frac{5}{2}, 4)^*$ -coloring of  $G$ . Thus we obtain the following theorem.

**Theorem 5.6** All Outerplanar graphs are  $(\frac{5}{2}, 4)^*$ -colorable.

**Proof.** Let  $G$  be any outerplanar graph  $G$ . Without loss of generality, assume  $G$  is connected. Choose any vertex  $r \in V(G)$  as root, we use OBF<sup>T</sup> partition to get two edge disjoint subgraphs  $T_r$  and  $H$  of  $G$ . Note that  $V(T_r) = V(G)$ . Let  $f$  be the  $(\frac{5}{2}, 0)^*$ -coloring  $f$  of  $T_r$  produced by Algorithm 1. Then  $|f(u) - f(v)|_5 = 2$  for any edge  $uv \in E(T_r)$ . Since the maximum degree of  $H$  is at most 4 by Lemma 5.3 (1), we only need to prove that  $f(x) \neq f(y)$  for each edge  $xy \in E(H)$ .

**Case 1:**  $x$  and  $y$  are in the same layer. Suppose  $x = v_p^i$ . Since  $xy \in E(H)$ , we may assume  $y = v_{p+1}^i$  by Lemma 5.3 (2). Let  $v_q^{i-1}$  be the father of  $v_p^i$  and  $v_h^{i-1}$  the father of  $v_{p+1}^i$ . From Lemma 5.3 (5), we have  $h = q$  or  $h = q + 1$ . If  $h = q$ , then  $v_p^i$  and  $v_{p+1}^i$  are brothers. It is obvious that  $f(v_p^i) \neq f(v_{p+1}^i)$  by Algorithm 1. If  $h = q + 1$ , then  $v_p^i$  is the rightmost son of  $v_q^{i-1}$  and  $v_{p+1}^i$  is the leftmost son of  $v_h^{i-1}$ . Because  $v_p^i v_{p+1}^i \in E(G)$ , we have  $\text{Int}(v_p^i, v_{p+1}^i) = \emptyset$  by Lemma 5.3 (5), implying  $\text{Int}(v_q^{i-1}, v_h^{i-1}) = \emptyset$ . Hence,  $f(v_p^i) \neq f(v_{p+1}^i)$  according to Algorithm 1.

**Case 2:**  $x$  and  $y$  are in different layers. By Lemma 5.3 (4), we may assume that  $x$  is the rightmost son of  $v_q^{i-1}$  and  $y = v_{q+1}^{i-1}$  (where  $i \geq 2$ ) with  $\text{Int}(x, v_{q+1}^{i-1}) = \text{Int}(v_q^{i-1}, v_{q+1}^{i-1}) = \emptyset$ . According to Algorithm 1, we must have  $|f(v_q^{i-1}) - f(x)|_5 = 2$  and  $|f(v_q^{i-1}) - f(y)|_5 = 1$ , implying  $f(x) \neq f(y)$ . ■

For  $d$ -defective 2-distant circular coloring, we can conclude the following result with the aid of ordered breadth first search algorithm.

**Theorem 5.7** *All Outerplanar graphs are  $(\frac{4}{2}, 2)$ -colorable.*

**Proof.** Let  $G$  be any outerplanar graph. Without loss of generality, assume  $G$  is connected. Choose any vertex  $r$  as root and use OBF<sup>S</sup> partition to get a rooted tree  $T_r$  and a subgraph  $H$ . We define a mapping  $f$  from  $V(T_r)$  to  $\{0, 1, 2, 3\}$  as follows: let  $f(r) = 0$ ,  $f(v) = 2$  for any vertex  $v$  in odd layers, and  $f(u) = 0$  for any vertex  $u$  in even layers. It is clear that  $|f(x) - f(y)|_4 = 2$  if  $xy$  is an edge of  $T_r$  or  $xy$  is an edge of  $H$  with  $x$  and  $y$  in different layer, and  $f(x) = f(y)$  if  $xy$  is an edge of  $H$  with  $x$  and  $y$  in the same layer. By Lemma 5.3 (2), any vertex  $u$  of  $G$  has at most two neighbors with  $|f(u) - f(v)|_4 < 2$ . Thus  $f$  is a  $(\frac{4}{2}, 2)$ -coloring of  $G$ . ■

Regarding to the conclusions in Theorem 5.6 and Theorem 5.7, it is now natural to ask if there exists a fixed positive integer  $t$  such that every outerplanar graph is  $(\frac{4}{2}, t)^*$ -colorable. We answer this question in next subsection.

### 5.3 $(\frac{4}{2}, t)^*$ -colorability of outerplanar graphs

In this subsection, we consider the  $(\frac{4}{2}, t)^*$ -colorability of outerplanar graphs. For a nonnegative integer  $m$ , we define a graph, denoted by  $H(m)$ , as follows. The vertex set  $V(H(m)) = \{x, x_1, x_2, \dots, x_m\} \cup \{y, y_1, y_2, \dots, y_m\} \cup \{z, z_1, z_2, \dots, z_m\}$ . And the edge set is the union of  $\{x_i x_{i+1} | i = 1, 2, \dots, m-1\}$ ,  $\{y_i y_{i+1} | i = 1, 2, \dots, m-1\}$ ,  $\{z_i z_{i+1} | i = 1, 2, \dots, m-1\}$ ,  $\{x_m y, y_m z, z_m x, xy, yz, zx\}$ ,  $\{xx_i | i = 1, 2, \dots, m\}$ ,  $\{yy_i | i = 1, 2, \dots, m\}$  and  $\{zz_i | i = 1, 2, \dots, m\}$ .



It is obvious that  $H(m)$  is an outerplanar graph and  $xx_1 \dots x_my_1 \dots y_mzz_1 \dots z_m$  are in the exterior face in counterclockwise direction. Let  $RT_f(x)$  be the number of relaxations of vertex  $x$  under the coloring  $f$ .

**Lemma 5.8** *Let  $t$  be a positive integer and  $H(2t)$  the graph defined above. Then for any relaxed 2-distant circular 4-coloring  $f$  of  $H(2t)$ , there exists at least one vertex in  $\{x, y, z\}$  which has at least  $t + 2$  relaxations.*

**Proof.** Let  $f$  be a relaxed 2-distant circular 4-coloring of  $H(2t)$ . Suppose to the contrary that  $RT_f(x)$ ,  $RT_f(y)$  and  $RT_f(z)$  are less than or equal to  $t + 1$ . Without loss of generality, assume  $f(x) = 0$ . Note that  $N(x) = \{x_1, x_2, \dots, x_{2t}, y, z, z_{2t}\}$  and  $x_1x_2, x_2x_3, \dots, x_{2t-1}x_{2t}, x_{2t}y, yz$  and  $zz_{2t}$  are edges of  $H(2t)$ , at most  $t + 2$  neighbors of  $x$  are assigned color 2 and at least  $t + 1$  neighbors of  $x$  are assigned colors in  $\{1, 3\}$ . Thus  $RT_f(x) \geq t + 1$  and so  $RT_f(x) = t + 1$ . It follows that  $f(y) = 1$  and  $f(z) \in \{1, 3\}$ . Similarly, we have  $RT_f(y) = t + 1$ . By the symmetry of colors,  $RT_f(y) = t + 1$  together with  $f(y) = 2$  implies  $f(z) = 0$ . This is a contradiction. The lemma follows.  $\blacksquare$

Note that the graph  $H(0)$  is a 3-cycle with vertices  $x, y$  and  $z$ . It is easy to see that  $H(0)$  is not  $(\frac{4}{2}, 1)^*$ -colorable. For any integer  $t$  with  $t \geq 2$ , we have the following result:

**Theorem 5.9** *Let  $t \geq 2$  be a positive integer and  $H(2t - 2)$  the graph defined above. Then  $H(2t - 2)$  is  $(\frac{4}{2}, t + 1)^*$ -colorable, but is not  $(\frac{4}{2}, t)^*$ -colorable.*

**Proof.** To prove that  $H(2t - 2)$  is  $(\frac{4}{2}, t + 1)^*$ -colorable, it suffices to give a  $(\frac{4}{2}, t + 1)^*$ -coloring of  $H(2t - 2)$ . We define a mapping  $f$  from  $V(H(2t - 2))$  to  $\{0, 1, 2, 3\}$  as follows. Let  $f(x) = 0$ ,  $f(y) = 1$  and  $f(z) = 2$ . For  $i \in \{1, 2, \dots, t - 1\}$ , let

$$\begin{cases} f(x_{2i-1}) = 2, \\ f(x_{2i}) = f(y_{2i-1}) = 3, \\ f(y_{2i}) = f(z_{2i-1}) = 0, \\ f(z_{2i}) = 1. \end{cases}$$

It is clear that  $RT_f(x) = RT_f(y) = t + 1$  and  $RT_f(z) = t$ . For each vertex  $u \in V(H(2t - 2)) \setminus \{x, y, z\}$ , as  $d(u) \leq 3$  and  $t \geq 2$ ,  $RT_f(u) \leq t + 1$ . Therefore,  $f$  is a  $(\frac{4}{2}, t + 1)^*$ -coloring of  $H(2t - 2)$ . We illustrate a  $(\frac{4}{2}, t + 1)^*$ -coloring  $f$  of  $H(6)$  ( $t = 4$ ) in Figure 8.

By Lemma 5.8, we know that for any relaxed 2-distant circular 4-coloring of  $H(2t - 2)$ , there exists at least one vertex in  $\{x, y, z\}$  which has at least  $t + 1$  relaxations. That is to say,  $H(2t - 2)$  can not be  $(\frac{4}{2}, t)^*$ -colorable and the theorem holds.  $\blacksquare$

Note that Theorem 5.9 shows there does not exist a fixed positive integer  $t$  such that all outerplanar graphs are  $(\frac{4}{2}, t)^*$ -colorable.

We end the paper by proposing some further research problems on  $(\frac{k}{2}, d)$ -coloring and the  $(\frac{k}{2}, t)^*$ -coloring of graphs.

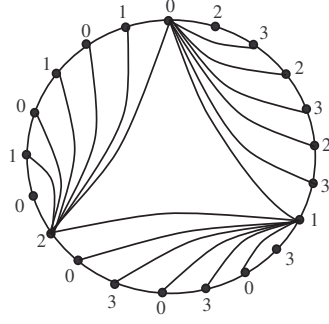


Figure 8: A  $(\frac{4}{2}, 5)^*$ -coloring of  $H(6)$

**Problem 1:** We have shown that every outerplanar graph is  $(\frac{5}{2}, 4)^*$ -colorable and there is an outerplanar graph which is not  $(\frac{5}{2}, 1)^*$ -colorable. It will be interesting to determine the smallest integer  $t$  such that every outerplanar graph is  $(\frac{5}{2}, t)^*$ -colorable.

**Problem 2:** Is there a fixed integer  $t$  such that every planar graph is  $(\frac{7}{2}, t)^*$ -colorable?

**Problem 3:** It is meaningful to clarify the complexity of the  $(\frac{k}{2}, d)$ -coloring problem (resp. the  $(\frac{k}{2}, t)^*$ -coloring) in planar graphs.

**Problem 4:** We expect sufficient conditions under which every outerplanar graph is  $(\frac{5}{2}, 1)^*$ -colorable and sufficient conditions under which every outerplanar graph is  $(\frac{4}{2}, t)^*$ -colorable for some fixed integer  $t$ .

**Problem 5:** It is natural to investigate the  $(\frac{k}{q}, t)^*$ -coloring problem for  $q \geq 3$ .

## References

- [1] D. Archdeacon, A note on defective coloring of graphs in surfaces, J. Graph Theory 11 (1987), 517-519.
- [2] J. Bondy and P. Hell, A note on the star chromatic number, J. Graph Theory 14(4) (1990), 479-482.
- [3] J.A. Bondy and U.S.R. Murty, Graph Theory, Springer, 2008.
- [4] T. Calamoneri and R. Petreschi,  $L(h, 1)$ -labeling subclasses of planar graphs, J. Parallel, Distrib. Comput. 64, 414-426 (2004).
- [5] L. Cowen, R. Cowen and D. Woodall, Defective colorings of graphs in surfaces: Partitions into subgraphs of bounded valency, J. Graph Theory 10 (1986), 187-195.
- [6] L. Cowen, W. Goddard and E. Jesurum, Defective coloring revisited, J. Graph Theory 24 (1997), 205-219.
- [7] C. Chou, W. Wang and X. Zhu, Relaxed game chromatic number of graphs, Discrete Math. 262 (2003), 89-98.

- [8] M. Frick and M.A. Henning, Extremal result on defective colorings of graphs, *Discrete Math.* 126 (1994), 151-158.
- [9] M.R. Garey, D.S. Johnson, *Computers and Intractability, A Guide to the Theory of NP-Completeness*, W.H. Freeman and Company, San Francisco, 1979.
- [10] M.R. Garey, D.S. Johnson and L. Stockmayer, Some simplified NP-complete graph problems, *Theoret. Comput. Sci.* 1 (1976), 237-267.
- [11] W. Goddard and H. Xu, Fractional, circular, and defective coloring of series-parallel graphs, *J. Graph Theory* 81(2) (2016), 146-153.
- [12] D. He and W. Lin, On  $(s, t)$ -relaxed strong edge-coloring of graphs, *J. Comb. Optim.* 33(2) (2017), 609-625.
- [13] F. Havent, R.J. Kang and J.S. Sereni, Improper coloring of unit disk graphs, *Networks* 54(3) (2009), 150-164.
- [14] T. Jensen and B. Toft, *Graph Coloring Problem*, Wiley Interscience, New York, 1995.
- [15] W. Klostermeyer, Circular coloring with defects, *Congr. Numer.* 155 (2002), 15-24.
- [16] W. Klostermeyer, Defective circular coloring, *Australas. J. Combin.* 26 (2002), 21-32.
- [17] W. Lin, Channel assignment problem and relaxed 2-distant coloring of graphs, *Discrete Appl. Math.*, DOI: <https://doi.org/10.1016/j.dam.2019.08.028>.
- [18] W. Lin, On  $(s, t)$ -relaxed  $L(2, 1)$ -labeling of graphs, *J. Comb. Optim.* 31(1) (2016), 405-426.
- [19] W. Lin and X. Zhao, On  $(s, t)$ -relaxed  $L(1, 1)$ -labeling of trees, *Int. J. Comput. Math.* 94(6) (2017), 1219-1227.
- [20] R. Soták, Fractional and circular 1-defective colorings of outerplanar graphs, abstract for 2010 Cycles and Colourings Workshop, Tatranská Štrba.
- [21] A. Vince, Star chromatic number, *J. Graph Theory* 12 (1988), 551-559.
- [22] W. Wang, D. Huang, Y. Wang, Y. Wang and D.Z. Du, A polynomial-time nearly-optimal algorithm for an edge coloring problem in outerplanar graphs, *J. Glob. Optim.* 65(2) (2016), 351-367.
- [23] M.L. Weaver and D.B. West, Relaxed chromatic numbers of graphs, *Graphs Comb.* 10 (1994), 75-93.
- [24] X. Zhu, Circular chromatic number: a survey, *Discrete Math.* 229 (2001), 317-410.