



# PHYX: Does Your Model Have the “Wits” for Physical Reasoning?

Hui Shen<sup>1,2</sup>, Taiqiang Wu<sup>1</sup>, Qi Han<sup>3</sup>, Yunta Hsieh<sup>2</sup>,  
Jizhou Wang<sup>4</sup>, Yuyue Zhang<sup>3</sup>, Yuxin Cheng<sup>1</sup>, Zijian Hao<sup>3</sup>, Yuansheng Ni<sup>5</sup>,  
Xin Wang<sup>6</sup>, Zhongwei Wan<sup>6</sup>, Kai Zhang<sup>6</sup>, Wendong Xu<sup>1</sup>, Jing Xiong<sup>1</sup>,  
Ping Luo<sup>1</sup>, Wenhui Chen<sup>5</sup>, Chaofan Tao<sup>1</sup>, Z. Morley Mao<sup>2</sup>, Ngai Wong<sup>1</sup>

<sup>1</sup>The University of Hong Kong, <sup>2</sup>University of Michigan, <sup>3</sup>Independent,  
<sup>4</sup>University of Toronto, <sup>5</sup>University of Waterloo, <sup>6</sup>The Ohio State University

## Abstract

Existing benchmarks fail to capture a crucial aspect of intelligence: *physical reasoning*, the integrated ability to combine domain knowledge, symbolic reasoning, and understanding of real-world constraints. To address this gap, we introduce PHYX: the first large-scale benchmark designed to assess models’ capacity for physics-grounded reasoning in visual scenarios. PHYX includes 3K meticulously curated multimodal questions spanning 6 reasoning types across 25 sub-domains and 6 core physics domains: thermodynamics, electromagnetism, mechanics, modern physics, optics, and wave & acoustics. In our comprehensive evaluation, even state-of-the-art models struggle significantly with physical reasoning. **GPT-4o**, **Claude3.7-Sonnet**, and **GPT-o4-mini** achieve only **32.5%**, **42.2%**, and **45.8%** accuracy respectively—performance gaps exceeding **29%** compared to human experts. Our analysis exposes critical limitations in current models: *over-reliance on memorized disciplinary knowledge*, *excessive dependence on mathematical formulations*, and *surface-level visual pattern matching* rather than genuine physical understanding. We provide in-depth analysis through fine-grained statistics, detailed case studies, and multiple evaluation paradigms to thoroughly examine physical reasoning capabilities. To ensure reproducibility, we implement an evaluation protocol based on widely-used toolkits such as VLMEvalKit, enabling one-click evaluation. More details are available on our project page: [phyx-bench.github.io](https://phyx-bench.github.io).

## 1 Introduction

*Physics is the most fundamental and all-inclusive of the sciences.*

– Richard Feynman

State-of-the-art models [1–3] now can basically solve Olympiad-level mathematical problems with human-competitive accuracy on benchmarks including AIME [4], GPQA [5], MATH-500 [6] and OlympiadBench [7], *etc.*. Emerging multimodal large language models (MLLMs) like GPT-4o [8] and Claude-3.7-Sonnet [9] further offer promising pathways by combining visual understanding into reasoning capabilities. Recent advances in multimodal foundation models have spurred the development of benchmarks assessing disciplinary knowledge [10] and mathematical problems [11–13]. However, these evaluations overlook a critical dimension of machine intelligence: *physical reasoning*, the ability to integrate disciplinary knowledge, symbolic operations, and understanding of real-world constraints.

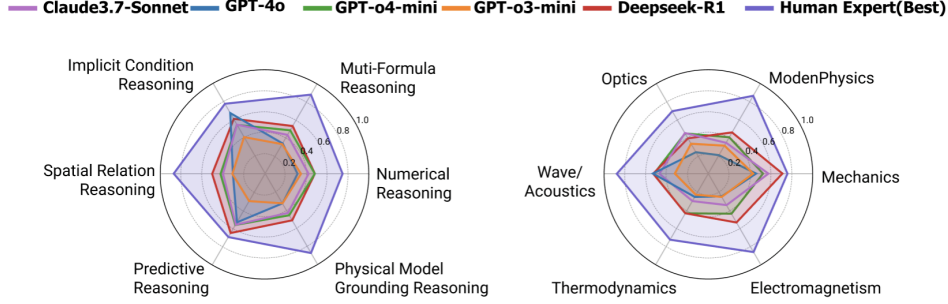


Figure 1: Accuracies of three leading MLLMs, two leading LLM and human performance on our proposed PHYX across 6 physical reasoning types and 6 domains.

<p><b>Mechanics</b></p> <p><b>Description</b> In figure, a heavy piece of machinery is raised by sliding it a distance <math>d = 12.5</math> m along a plank oriented at angle <math>\theta = 20.0^\circ</math> to the horizontal.</p> <p><b>Subfield</b> Kinematics</p> <p><b>Image</b> </p> <p><b>Question</b> How far is it moved vertically?</p> <p><b>Answer</b> 4.28 m</p> <p><b>Reasoning Type</b> Spatial Relation Reasoning</p>	<p><b>Electromagnetism</b></p> <p><b>Description</b> An earth-orbiting satellite has solar energy-collecting panels with a total area of <math>4.0\text{m}^2</math> (figure). If the sun's radiation is perpendicular to the panels and is completely absorbed.</p> <p><b>Subfield</b> Electromagnetic Waves</p> <p><b>Image</b> </p> <p><b>Question</b> Find the average solar power absorbed.</p> <p><b>Answer</b> 5.6 kW</p> <p><b>Reasoning Type</b> Physical Model Grounding Reasoning, Multi-Formula Reasoning</p>	<p><b>Thermodynamics</b></p> <p><b>Description</b> A piston/cylinder assembly in a car contains 0.2 L of air at 90 kPa and <math>20^\circ\text{C}</math>, as shown in figure. The air is compressed in a quasi-equilibrium polytropic process with polytropic exponent <math>n = 1.25</math> to a final volume six times smaller.</p> <p><b>Subfield</b> Laws of Thermodynamics</p> <p><b>Image</b> </p> <p><b>Question</b> Determine the heat transfer for the process.</p> <p><b>Answer</b> -0.0147 kJ</p> <p><b>Reasoning Type</b> Multi-Formula Reasoning, Physical Model Grounding Reasoning</p>
<p><b>Wave/Acoustics</b></p> <p><b>Description</b> A small ball of mass <math>M</math> is attached to the end of a uniform rod of equal mass <math>M</math> and length <math>L</math> that is pivoted at the top (figure). <math>L = 2.00\text{m}</math>.</p> <p><b>Subfield</b> Resonance and Harmonics</p> <p><b>Image</b> </p> <p><b>Question</b> Determine this period.</p> <p><b>Answer</b> 2.68s</p> <p><b>Reasoning Type</b> Physical Model Grounding Reasoning, Numerical Reasoning</p>	<p><b>Optics</b></p> <p><b>Description</b> A 1.00cm-high object is placed 10.0cm from a concave mirror whose radius of curvature is 30.0cm.</p> <p><b>Subfield</b> Geometrical Optics</p> <p><b>Image</b> </p> <p><b>Question</b> Determine the magnification analytically.</p> <p><b>Answer</b> 5.6 kW</p> <p><b>Reasoning Type</b> Physical Model Grounding Reasoning, Multi-Formula Reasoning</p>	<p><b>Modern Physics</b></p> <p><b>Description</b> A rectangular painting measures 1.00m tall and 1.50m wide, figure. It is hung on the side wall of a spaceship which is moving past the Earth at a speed of <math>0.90c</math>.</p> <p><b>Subfield</b> Relativity</p> <p><b>Image</b> </p> <p><b>Question</b> What dimensions does an Earth observer see?</p> <p><b>Answer</b> -0.65m</p> <p><b>Reasoning Type</b> Physical Model Grounding Reasoning, Predictive Reasoning</p>

Figure 2: Sampled PHYX examples from each domain.

Physical problem-solving fundamentally differs from pure mathematical reasoning or science knowledge question answering by requiring models to: (1) decode implicit conditions in the questions (e.g., interpreting "smooth surface" in the question as the coefficient of friction equals to zero), (2) maintain physical consistency across the reasoning chains since the laws of physics do not change with different reasoning trajectories. These differences arise from the fundamental distinction between physical reasoning and the more textual or abstract forms of reasoning emphasized in prior science-related and math-related benchmarks. More importantly, the capacity of physical reasoning assesses the model to ground the abstract physical formulas in the real-world visionary scenarios. It typically demands tight integration of visual perception ("Is the surface rough or smooth?"), material properties ("Will the wooden block float?"), and dynamic simulations ("How will dominoes cascade?").

To address these gaps, we present **PHYX**, the first large-scale benchmark designed for evaluating physics-based reasoning via multimodal problem-solving with three core innovations: (1) 3,000 newly collected questions with realistic physical scenarios requiring integrated visual analysis and causal reasoning, (2) Expert-validated data design covering six fundamental physics domains with representative examples illustrated in Figure 2, and six distinct physical reasoning types, Physical Model Grounding Reasoning, Spatial Relation Reasoning, Multi-Formula Reasoning, Implicit Condition Reasoning, Numerical Reasoning, and Predictive Reasoning and (3) Strict unified three-step evaluation protocols, account for varying instruction-following capabilities across models and enables accurate assessment of reasoning. Each scenario undergoes rigorous validation by physics Ph.D. students to ensure scientific accuracy while eliminating dataset bias.

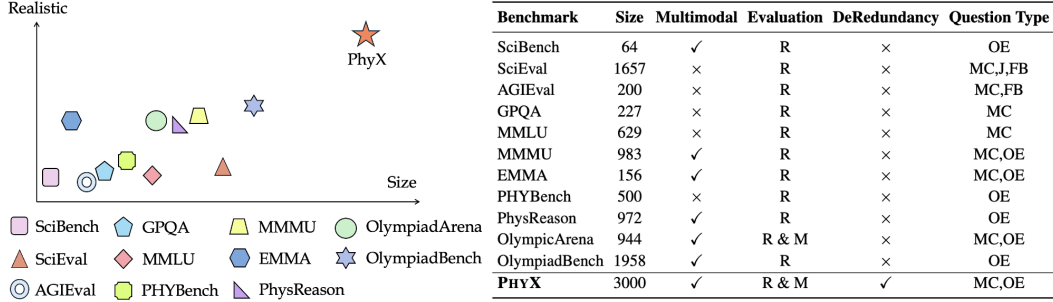


Figure 3: Comparison with existing physics benchmarks. Realistic refers to the extent to which the dataset contains visually realistic physical scenarios. Size indicates the number of physics questions with images in multimodal benchmarks or total physics questions in text-only benchmarks. For evaluation methods, R: rule-based, M: model-based. For question type, OE: Open-ended, MC: Multiple-choice, FB: Fill-in-the-blank, J: Judgement. Upon comparison, PHYX leads in all aspects.

In addition to MLLMs, our benchmark supports to evaluate LLMs by translating the images into text descriptions, thereby enabling an assessment of LLMs on these visually-grounded tasks.

Our evaluation of 16 foundation models reveals an unprecedented capability gap: While the worst performance group of physics undergraduates and graduates achieve 75.6% accuracy, the best-performing MLLM (GPT-o4-mini) scores only 45.8%. This 30-point performance chasm persists across all physics domains, most notably in Modern Physics (human 86.7% vs. model 40.6%) and Wave/Acoustics (human 86.7% vs. model 52.7%), as shown in Figure 1.

These results expose three critical shortcomings in current multimodal reasoning frameworks: (1) Visual reasoning errors (39.6%) indicate that models frequently misinterpret visual context, underscoring their limited capability in accurately extracting and reasoning from realistic physical scenarios. (2) The inconsistent performance across input variations—specifically, Full-Text, Text-DeRedundancy, and Text-Minimal—demonstrates that MLLMs remain overly dependent on textual descriptions, failing to effectively leverage visual input for reasoning. (3) Comparing physical reasoning performance to mathematical reasoning benchmarks such as MathVerse [13] and MATH-V [11] reveals that physical reasoning poses significantly greater challenges, highlighting a critical need for improved integration of abstract concepts and real-world knowledge. **PHYX** thus provides both a diagnostic toolkit for model improvement and a roadmap for developing physically-grounded AI systems.

Our contributions can be summarized as follows: **Novel Benchmark Design:** We introduce PHYX, the first large-scale benchmark for evaluating the reasoning capabilities in the physical world for both multi-modal models and language models. Curated by experts, it spans 25 fine-grained domains and 6 reasoning types with realistic scenarios. **Versatile Evaluation Framework:** PHYX supports versatile evaluation frameworks, including *assessment formats* (multiple-choice vs. open-ended) and *hierarchical answer judge* (rule-based and model-based). It also seamlessly integrates with mainstream toolkits (e.g., VLMEvalKit) for reproducible benchmarking. **Critical Insights on Reasoning:** We provide granular performance analysis and reveal some interesting observations, which sheds light on the design of the future models that jointly consider the disciplinary knowledge, symbolic operations, and real-world constraints for high-level physical reasoning.

## 2 The PhyX Benchmark

### 2.1 Overview of PHYX

We introduce PHYX, a novel benchmark meticulously curated to assess the physical reasoning capabilities of foundation models. PHYX consists of 3,000 visually-grounded physics questions, meticulously curated to cover six distinct physics domains including *Mechanics* (550), *Electromagnetism* (550), *Thermodynamics* (500), *Wave/Acoustics* (500), *Optics* (500), and *Modern Physics* (400). Each problem in PHYX is centered around realistic physical scenarios to robustly assess the model’s ability to reason the physical world. Detailed data statistics are summarized in Table 1, with representative question examples from each domains illustrated in Figure 2. To enable comprehensive

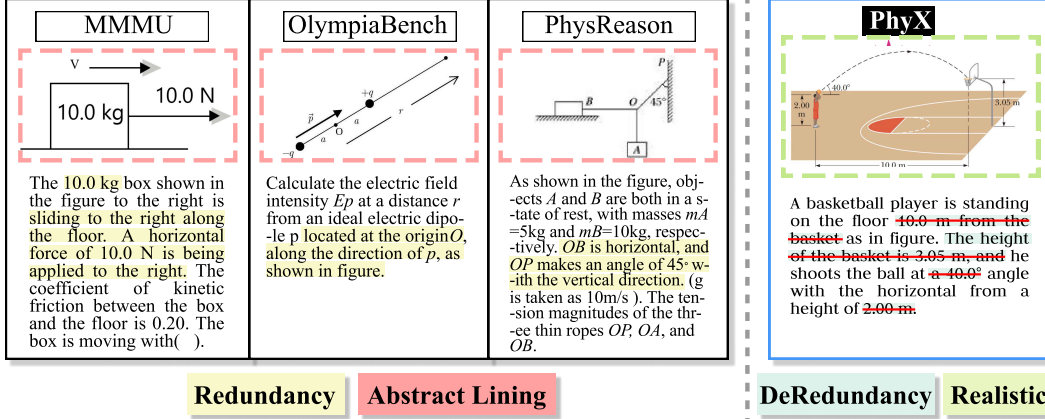


Figure 4: Existing benchmarks that contain physics-related questions suffer from information redundancy and abstract representation. In contrast, de-redundancy in PHYX benchmark increases the difficulty, as models can perceive concepts from ONE modality only. Additionally, realistic visuals provide authentic context that challenges models to accurately apply physical laws.

Table 1: Key Statistics of PHYX.

Statistic	Number
<b>Total new questions</b>	<b>6,000</b>
- Multiple-choice questions	3,000 (50.0%)
- Open-ended questions	3,000 (50.0%)
Unique number of images	3,000
Unique number of questions	3,000
Maximum description length	288
Maximum question length	119
Maximum option length	46
Average description length	48.3
Average question length	14.6
Average option length	11.2

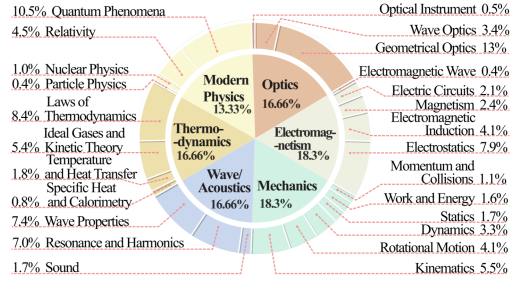


Figure 5: Fine-grained Distribution of PHYX.

assessment, each question within PHYX has been categorized into six well-defined physical reasoning types: *Physical Model Grounding Reasoning*, *Spatial Relation Reasoning*, *Multi-Formula Reasoning*, *Implicit Condition Reasoning*, *Numerical Reasoning*, and *Predictive Reasoning*. Detailed definitions and illustrative examples of these reasoning types are provided in Appendix C.4.

Through its carefully curated structure and extensive coverage of diverse reasoning dimensions, PHYX represents a robust resource for systematically benchmarking and advancing the capabilities of foundation models in realistic physical reasoning tasks.

## 2.2 Data Curation Process

**Data Collection.** To ensure high-quality data, we design a four-stage data collection process. Firstly, we conducted an in-depth survey of core physics disciplines to determine the coverage of our benchmark. We selected diverse physics domains and subfields, and defined a set of reasoning types. Secondly, we recruited a team of graduate students in STEM fields to serve as expert annotators. Annotators are instructed to comply with copyright and licensing rules by avoiding content from sources that restrict copying or redistribution. To mitigate potential data contamination in foundation models, they are also advised to select questions for which answers are not immediately available alongside the problem, such as those found in separate materials or at the end of textbooks. Then, each open-ended question is required to be converted into a multiple-choice version, and vice versa. We also constructed three parallel versions of each question: (1) the original version as it appears in the textbook; (2) a concise version where redundant textual information—those duplicated by the corresponding image—was removed; and (3) a question-only version that retains only the core question. Lastly, to support evaluation of LLMs and facilitate multi-modal understanding, we used



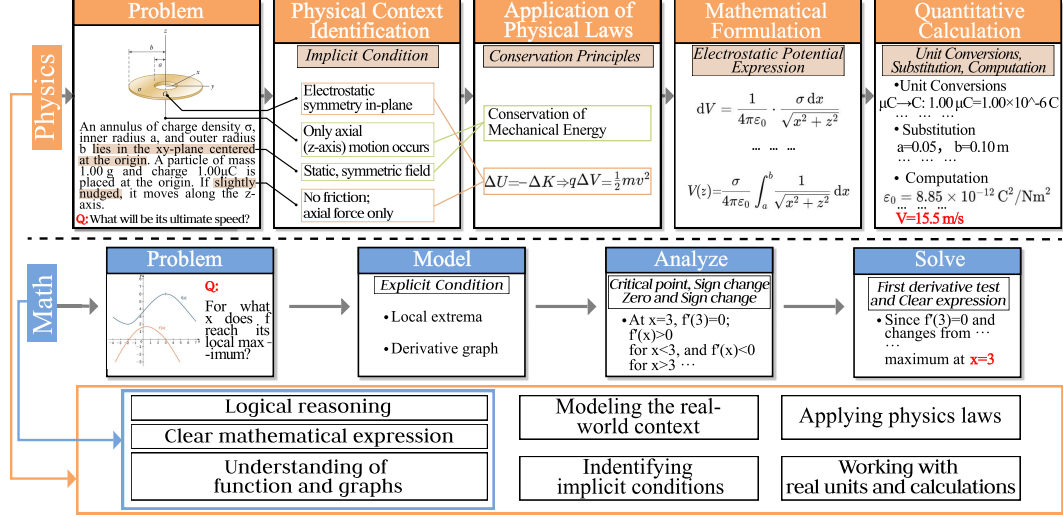


Figure 6: An real example of reasoning trajectory based on GPT-4o and the comparison of required capabilities when solving physical and mathematical problems.

GPT-4o to generate descriptive captions for each image, aim to summarize the visual content in a self-contained textual form. This data curation process results in a diverse collection of 3,300 questions from various sources. The detailed annotation protocol is in Appendix F.

**Data Quality Control.** To further control the quality of our data, we perform a three-stage data cleaning process. First, we detect potentially duplicated questions by analyzing lexical overlap, followed by manual review from physics Ph.D. students to confirm and remove duplicates. Then, we filter out the shortest 10% of questions based on their textual length. This rigorous process plays a crucial role in maintaining the quality and difficulty of PHYX.

### 2.3 Key Difference Compared to Existing Benchmarks

**Compared with Scientific Knowledge Benchmarks.** From Figure 3, science benchmarks like MMMU [10] cover broad disciplinary reasoning but lack focus on deep reasoning capability. These benchmarks often rely on memorization and basic understanding of disciplinary knowledge, with tasks that prioritize factual recall or simple cross-modal association. In contrast, PHYX specializes in university-level hard questions through high-fidelity visual scenarios. Unlike generalist benchmarks, our tasks demand integration of visual cues with implicit physical laws, requiring models to surpass mere knowledge recall and perform nuanced, context-driven inference. This targeted design evaluates true multimodal reasoning about the physical world, exposing gaps in models’ ability to handle professional-level scientific challenges.

**Compared with Mathematical Reasoning Benchmarks.** Mathematical reasoning benchmarks, such as MathVista [13], MathVerse [12], and MATH-V [11], focus on logical deduction with clear expressions and explicit conditions, representing a subset of the challenges in physical reasoning. Physical reasoning, as evaluated by PHYX, extends beyond these by requiring models to model real-world contexts (e.g., dynamic physical systems), identify implicit conditions from visual cues (e.g., Figure 6), and integrate the application of physical laws with symbolic logic, which are key capabilities absent in purely mathematical tasks. This makes PHYX a more comprehensive test of multimodal reasoning, capturing the complexity of real-world physics problems.

**Compared with Physics-related Benchmarks** Existing benchmarks (e.g., PHYBench [14], UG-Physics [15], OlympiadBench [7]) prioritize text-based problems or schematic visuals, limiting their assessment of multimodal reasoning. In details, PHYBench’s problems and UGPhysics’s questions rely heavily on textual descriptions, while OlympiadBench’s problems use simplified diagrams, as shown in Figure 4. These benchmarks mainly test disciplinary knowledge but overlook the integration of visual perception with implicit physical constraints. PHYX bridges these gaps by embedding high-fidelity visual scenarios that require models to decode complex visual cues, infer context-

Table 2: Accuracy scores on the *testmini* subset of PHYX. The highest scores of models in each section and the overall highest score are respectively highlighted in blue and red.

Models	Full-Text		Text-DeRedundancy		Text-Minimal	
	Open-Ended	Multi-Choice	Open-Ended	Multi-Choice	Open-Ended	Multi-Choice
Random Choice	-	25	-	25	-	25
Human Expert (Worst)	-	-	75.6	-	-	-
Human Expert (Medium)	-	-	77.8	-	-	-
Human Expert (Best)	-	-	78.9	-	-	-
<i>Multimodal Large Language Models</i>						
Claude3.7-Sonnet	44.4	65.8	42.2	64.5	17.2	41.6
Claude3.5-Sonnet	40.2	62.6	39.0	63.5	17.0	43.5
Claude3.5-Haiku	7.9	37.0	13.6	37.5	5.5	31.7
GPT-o4-mini	49.0	87.9	45.8	86.9	24.1	62.6
GPT-4o	33.9	61.0	32.5	57.6	14.3	43.8
InternVL3-78B	35.9	45.6	33.1	46.9	14.8	40.5
Yi-VL-34B	3.5	34.8	3.4	34.1	1.9	34.1
InternVL3-14B	9.0	46.9	7.9	47.5	5.1	45.9
InternVL3-8B	6.3	45.5	6.5	44.9	4.6	44.0
MiniCPM-o-8B	7.1	31.8	7.2	31.6	3.2	34.2
LLaVA-OneVision-7B	7.2	37.7	5.7	37.3	2.7	38.0
DeepSeek-VL2-4.5B	11.4	28.2	10.2	27.8	4.7	27.3
Kimi-VL-A3B-Instruct-2.8B	15.6	37.1	15.4	38.7	8.1	39.3
<i>Large Language Models</i>						
DeepSeek-R1	51.8	63.1	51.2	62.9	22.2	43.6
DeepSeek-V3	40.7	70.8	36.3	67.5	16.2	49.9
GPT-o3-mini	36.9	78.5	31.5	76.9	14.3	56.2

specific physical laws and then reasoning problems. Unlike existing datasets, PHYX mandates equal reliance on both modalities with information de-redundancy, providing a rigorous evaluation of professional-level physical reasoning in multimodal large language models.

### 3 Experiments

#### 3.1 Experimental Setup

**The *testmini* Subset** PHYX comprises 3,000 high-quality visual physics problems and 18,000 corresponding test instances. To streamline evaluation and accelerate model development validation, we extract a smaller representative subset named *testmini* including 1,000 problems and 6,000 instances. The construction of *testmini* involved a proportional random sampling strategy across different physics domains of PHYX. The quantitative evaluations in all subsequent experiments were assessed on this *testmini* subset.

**Baselines.** We include random chance as naive baselines. Additionally, we recruiting 15 undergraduate and graduate physics students to represent the expert performance baseline, each student was tasked with completing 18 questions. The students were divided into three groups of five, and the results of each group are reported separately. Then, we conduct experiments on (a) Reasoning MLLMs: GPT-o4-mini [16], Claude-3.7-Sonnet [9], LLaVA-OneVision-7B [17] MiniCPM-o [18], (b) General MLLMs: GPT-4o [8], Claude-3.5-Sonnet [19], Claude-3.5-Haiku [20], InternVL3 [21], Yi-VL-34B [22], (c) LLMs: o3-mini [23], DeepSeek-R1 [1], DeepSeek-V3 [24], Qwen-3-4B [25], augmented with image captions generated by GPT-4o.

#### 3.2 Evaluation Protocols

Our evaluation is conducted with Chain-of-Thought (CoT) prompting to assess the reasoning capability of models. For both open-ended (OE) and multiple-choice (MC) questions, the instruction-following capabilities of models can vary significantly. To this end, we design a universal evaluation pipeline for all recent LLMs and MLLMs with different instruction-following capabilities:

Table 3: Average scores by model across different domains of physics with open-ended text de-redundancy questions. The highest scores of models in each section and the overall highest score are respectively highlighted in blue and red.

Models	Overall	Mechanics	Electro-magnetism	Thermo-dynamics	Waves & Acoustics	Optics	Modern Physics
Human Expert (Worst)	75.6	76.5	60.0	66.7	86.7	69.2	86.7
Human Expert (Medium)	77.8	94.1	53.3	60.0	93.3	76.9	86.7
Human Expert (Best)	78.9	76.5	86.7	73.3	86.7	69.2	86.7
<i>Multimodal Large Language Models</i>							
Claude3.7-Sonnet	42.2	58.2	36.7	31.5	46.7	44.6	35.2
Claude3.5-Sonnet	39.0	53.5	27.8	33.3	49.7	35.5	3.9
Claude3.5-Haiku	13.6	18.8	8.9	11.5	18.8	12.0	11.5
GPT-o4-mini	45.8	52.3	43.2	41.8	52.7	44.0	40.6
GPT-4o	32.5	45.9	24.3	26.1	53.9	23.5	21.2
InternVL3-78B	33.1	48.8	27.2	25.5	43.0	28.9	24.8
Yi-VL-34B	3.4	1.8	3.5	4.8	2.4	4.2	3.6
InternVL3-14B	7.9	12.4	8.88	4.2	8.5	4.8	8.5
InternVL3-8B	6.5	10.6	6.5	3.6	4.9	6.6	6.7
MiniCPM-o-8B	7.2	11.8	6.5	6.1	7.3	6.0	5.5
LLaVA-OneVision-7B	5.7	10.6	4.1	6.1	7.3	3.0	3.0
DeepSeek-VL2-4.5B	10.2	16.5	7.1	10.3	13.3	9.0	4.8
Kimi-VL-A3B-Instruct-2.8B	15.4	20.6	10.1	13.3	20.0	16.2	12.1
<i>Large Language Models</i>							
DeepSeek-R1	51.2	71.8	53.2	41.8	53.9	39.8	46.1
DeepSeek-V3	36.3	52.9	39.6	28.5	36.4	28.9	30.9
GPT-o3-mini	31.5	41.8	24.9	23.6	32.1	33.7	32.7
Qwen3-8B	27.5	42.9	23.7	21.2	35.8	21.1	20.0

**Step 1. Prediction Generation.** Initially, the models generate prediction given the input query, which incorporates different problem description according to the specific settings, the question, and the image, using the template defined in Appendix D.1.

**Step 2. Answer Extraction.** The raw predictions often contain reasoning steps, explanations, or irrelevant conversational filler. To precisely extract the definitive answer from these raw outputs, we separately employ rule-based answer extraction strategies, which are detailed in Appendix D.2.

**Step 3. LLM Judge.** For OE questions, the next step is comparing the extracted answer against the ground truth to determine its correctness. Given that answers in OE physics questions can be expressed in myriad ways, we proposed an evaluation mechanism using a LLM, such as DeepSeek-V3 [24], as a judge, using the template defined in Appendix D.3. We feeds the answer extracted and the ground truth to a LLM multiple times and checks if a LLM succeed in all attempts. A preliminary study of 200 examples shows that DeepSeek-V3 can judge the answer with more than 99% accuracy with affordable costs. For MC questions, we first attempt to directly match the option letter. If this direct matching fails, we then use a LLM as a judge, using the template for OE questions.

### 3.3 Main Results

In this section, we present a comprehensive comparison of LLMs and MLLMs on PHYX benchmark, detailed in Table 2 and Table 3. Our key findings can be summarized as follows:

**Challenging Nature of PHYX.** PHYX presents significant challenges for current models. Notably, even worst human experts achieve accuracy of 75.6%, significantly outperforming all the models included in our comparative analysis. This disparity demonstrates an existing gap between human expertise and current model capabilities, reflecting the demanding standards inherent in PHYX.

**Multiple-Choice Format Narrows the Performance Gap.** The result reveals that multiple-choice questions reduce the performance gap across models, enabling weaker models to rely on surface-level cues. In contrast, open-ended questions demand genuine reasoning and precise answer generation, leading to greater differentiation between models. This suggests that the open-ended format provides higher discriminative power when evaluating multimodal reasoning capabilities.

**Model Performance across Different Domains.** As shown in Table 3, in domains such as Waves/Acoustics and Mechanics, which typically include natural images and questions requiring

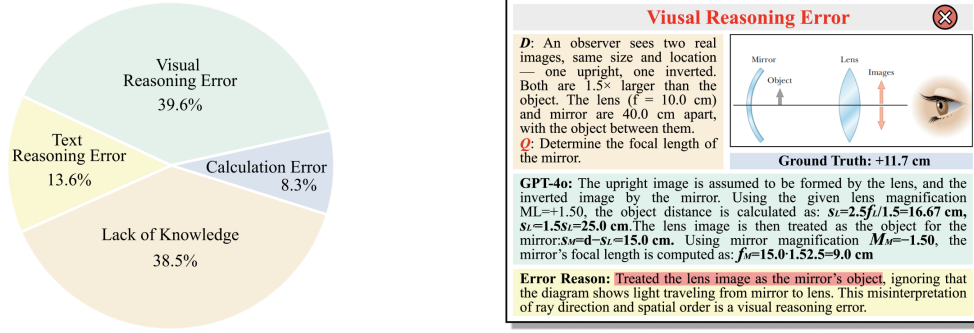


Figure 7: The error distribution over 90 annotated errors based on GPT-4o with a typical visual reasoning error, which is easy for humans but challenging for GPT-4o. More examples can be found in the Appendix.

relatively less reasoning, models tend to achieve higher performance. Conversely, in domains such as Thermodynamics and Modern Physics, where tasks frequently demand intricate visual perception and multi-step reasoning, models performance is generally lower.

### 3.4 Discussion

**Reasoning-oriented Models Perform Better.** Leading reasoning-oriented models such as GPT-o4-mini and DeepSeek-R1 achieve accuracies of 45.8% and 51.2%, respectively, significantly outperforming general-purpose models like GPT-4o and Claude3.7-Sonnet. The results highlight the advantage of models specifically optimized for reasoning tasks, suggesting that architectural and training differences play a key role in bridging the multimodal reasoning gap.

**LLMs Achieve Competitive Results.** Despite lacking direct visual input, LLMs such as DeepSeek-R1 and GPT-o3-mini perform competitively with most multimodal models. The strong performance of LLMs suggests that, in many cases, the caption provides sufficient visual context for reasoning. This highlights both the impressive generalization capabilities of LLMs and the current limitations of MLLMs in leveraging raw visual signals for physical reasoning.

**MLLMs' Physical Reasoning Relies More on Text.** Our experiments show a clear performance gradient across the three input variations: Full-Text, Text-DeRedundancy, and Text-Minimal, with decreasing accuracy in that order. This indicates that MLLMs rely heavily on detailed textual descriptions, highlighting their limited ability to reason purely from visual context.

**Physical Reasoning Poses Greater Challenges than Mathematical Reasoning.** Comparing GPT-4o's performance on our physical reasoning dataset to its previously reported results on MathVista (63.8%) and MATH-V (63.8%), we observe notably lower accuracy in physical reasoning tasks. This finding emphasizes that physical reasoning inherently requires a deeper integration of abstract concepts and real-world knowledge, presenting a more substantial challenge for current models compared to purely mathematical contexts.

### 3.5 Error Analysis

To dive into the reasoning capabilities and limitations of models, we meticulously inspected 96 randomly sampled incorrect predictions and performed an in-depth analysis based on GPT-4o. The objectives of this analysis were twofold: to identify current model weaknesses and to guide future enhancements in model design and training. The distribution of these errors is illustrated in Figure 7, and a comprehensive case study of 30 notable cases is included in Appendix E.

**Visual Reasoning Errors (39.6%)** arise from the model's incorrect extraction, spatial relationships, or reasoning based on visual information from realistic physical questions included in PHYX. A notable instance of this can be observed in Appendix 8, where the model misread the voltage value shown in the image, leading to a numerical error in its calculation. Given the realistic nature of our images, visual reasoning errors constitute a larger proportion of mistakes, posing a significant new challenge to MLLMs compared to existing benchmarks.

**Text Reasoning Errors (13.5%)** are characterized by incorrect processing or interpretation of textual content. The model occasionally struggles with implicit conditions, or incorrectly handles logical relationships presented in text form. An example of this can be illustrated in Appendix 4, where the model overlooked the explicit instruction to ignore friction and instead reasoned that the coefficient of friction was required to solve the problem. This highlights areas for improved textual inference and contextual reasoning are critical to address these shortcomings.

**Lack of Knowledge (38.5%)** reflects GPT-4o’s incomplete understanding of specific domain knowledge. As demonstrated in the example in Appendix 25, the model lacks the fundamental knowledge that a difference in wave speeds across media invalidates direct geometric reasoning based on symmetric travel paths. Specifically, it ignores that the slower speed in the liver requires a correction when estimating depth from the reflection geometry, leading to an overestimated result.

**Calculation Error (8.3%)** refer to mistakes in arithmetic operations, formula application, or unit conversions. These errors indicate that the model has grasped the physical context and relevant concepts but fails in the final step of numerical computation.

## 4 Related Work

**Multi-modal Large Language Models.** Multi-modal large language models (MLLMs) [9, 16, 3] have shown great potential in a wide achieved excellent visual understanding ability by integrating both visual and textual data in a wide range of multimodal tasks. Recent advances in LLMs have motivated efforts [26, 27] to explore MLLM reasoning. Despite such achievements, it remains unclear whether these models truly possess advanced reasoning abilities when solving the visual tasks, especially in the physical area that is closer to the real world. To bridge this gap and comprehensively evaluate the physical reasoning capabilities of MLLMs, we introduce PHYX, a multimodal benchmark to evaluate the real reasoning ability of recent advanced MLLMs in physics.

**LLM Benchmarks.** Several benchmarks [28, 29, 5, 30, 31] have been proposed to evaluate LLM’s ability on various aspects. Among these works, the most related one is PHYBench [14], which also focuses in the physic reasoning area. Although evaluating the same discipline, their scope remains narrow since it includes only a small number of questions, making it insufficient to fully assess a model’s reasoning capabilities. Furthermore, PHYBench concentrates exclusively on evaluating the understanding of physics concepts by language models through text. However, in real-world scenarios, solving physics problems also requires visual perception and interpretation.

**MLLM Benchmarks.** Recently, several MLLM scientific benchmark [10, 32, 7, 33–35] have also been proposed. For example, PhysReason [34] includes a multimodal subset of 972 physics problems with figures to evaluate the MLLMs. EMMA [35] composes 2,788 problems covering various scientific area such as mathematics, physics, and coding. However, all of these benchmarks only contain a small subset of data in physics area, which still could not fully evaluate the MLLM’s ability on reasoning and solving the advanced physics problems.

## 5 Conclusion and Limitations

Existing benchmarks have overlooked the critical task of physical reasoning, which requires integrating domain knowledge, symbolic reasoning, and real-world constraints. To address this, we present PHYX, the first large-scale benchmark for evaluating physical reasoning in multimodal, visually grounded scenarios. Through rigorous evaluation, we reveal that state-of-the-art models exhibit significant limitations in physical reasoning, relying predominantly on memorized knowledge, mathematical formulas, and superficial visual patterns, rather than genuine understanding of physical principles. Our findings highlight the urgent need for future models to improve deep physical reasoning over surface-level associations, guiding the development of more intelligent models.

On the other hand, our benchmark focuses exclusively on English-language prompts and annotations. While this aligns with the dominant language used in most foundation models, it is not suitable for assessing a model’s reasoning ability in other languages. Also, the images in our dataset depict physically realistic scenarios but are often schematic or textbook-style rather than real-world photographs. While suitable for evaluating conceptual reasoning, this may not fully capture the complexity of perception in natural environments.



## References

- [1] Daya Guo, Dejian Yang, Haowei Zhang, Junxiao Song, Ruoyu Zhang, Runxin Xu, Qihao Zhu, Shirong Ma, Peiyi Wang, Xiao Bi, et al. Deepseek-r1: Incentivizing reasoning capability in llms via reinforcement learning. *arXiv preprint arXiv:2501.12948*, 2025.
- [2] OpenAI. Learning to reason with llms, 2024. URL <https://openai.com/index/learning-to-reason-with-llms/>.
- [3] Gemini Team. Gemini 2.5: Our most intelligent ai model, 2025. URL <https://blog.google/technology/google-deepmind/gemini-model-thinking-updates-march-2025/#gemini-2-5-thinking>.
- [4] MAA. American invitational mathematics examination - aime. In *American Invitational Mathematics Examination - AIME 2024*, February 2024. URL <https://maa.org/math-competitions/american-invitational-mathematics-examination-aime>.
- [5] David Rein, Betty Li Hou, Asa Cooper Stickland, Jackson Petty, Richard Yuanzhe Pang, Julien Dirani, Julian Michael, and Samuel R Bowman. Gpqa: A graduate-level google-proof q&a benchmark. In *First Conference on Language Modeling*, 2024.
- [6] Dan Hendrycks, Collin Burns, Saurav Kadavath, Akul Arora, Steven Basart, Eric Tang, Dawn Song, and Jacob Steinhardt. Measuring mathematical problem solving with the math dataset. *arXiv preprint arXiv:2103.03874*, 2021.
- [7] Chaoqun He, Renjie Luo, Yuzhuo Bai, Shengding Hu, Zhen Thai, Junhao Shen, Jinyi Hu, Xu Han, Yujie Huang, Yuxiang Zhang, et al. Olympiadbench: A challenging benchmark for promoting agi with olympiad-level bilingual multimodal scientific problems. In *Proceedings of the 62nd Annual Meeting of the Association for Computational Linguistics (Volume 1: Long Papers)*, pages 3828–3850, 2024.
- [8] OpenAI. Gpt-4o system card, 2024. URL <https://arxiv.org/abs/2410.21276>.
- [9] claude. Claude 3.7 sonnet and claude code. <https://www.anthropic.com/news/claude-3-7-sonnet>, 2025.
- [10] Xiang Yue, Yuansheng Ni, Kai Zhang, Tianyu Zheng, Ruoqi Liu, Ge Zhang, Samuel Stevens, Dongfu Jiang, Weiming Ren, Yuxuan Sun, et al. Mmmu: A massive multi-discipline multimodal understanding and reasoning benchmark for expert agi. In *Proceedings of the IEEE/CVF Conference on Computer Vision and Pattern Recognition*, pages 9556–9567, 2024.
- [11] Ke Wang, Junting Pan, Weikang Shi, Zimu Lu, Houxing Ren, Aojun Zhou, Mingjie Zhan, and Hongsheng Li. Measuring multimodal mathematical reasoning with math-vision dataset. *Advances in Neural Information Processing Systems*, 37:95095–95169, 2024.
- [12] Renrui Zhang, Dongzhi Jiang, Yichi Zhang, Haokun Lin, Ziyu Guo, Pengshuo Qiu, Aojun Zhou, Pan Lu, Kai-Wei Chang, Yu Qiao, et al. Mathverse: Does your multi-modal llm truly see the diagrams in visual math problems? In *European Conference on Computer Vision*, pages 169–186. Springer, 2024.
- [13] Pan Lu, Hritik Bansal, Tony Xia, Jiacheng Liu, Chunyuan Li, Hannaneh Hajishirzi, Hao Cheng, Kai-Wei Chang, Michel Galley, and Jianfeng Gao. Mathvista: Evaluating mathematical reasoning of foundation models in visual contexts. In *The Twelfth International Conference on Learning Representations*.
- [14] Shi Qiu, Shaoyang Guo, Zhuo-Yang Song, Yunbo Sun, Zeyu Cai, Jiashen Wei, Tianyu Luo, Yixuan Yin, Haoxu Zhang, Yi Hu, et al. Phybench: Holistic evaluation of physical perception and reasoning in large language models. *arXiv preprint arXiv:2504.16074*, 2025.
- [15] Xin Xu, Qiyun Xu, Tong Xiao, Tianhao Chen, Yuchen Yan, Jiaxin Zhang, Shizhe Diao, Can Yang, and Yang Wang. Ugphysics: A comprehensive benchmark for undergraduate physics reasoning with large language models. *arXiv preprint arXiv:2502.00334*, 2025.

- [16] OpenAI. Introducing openai o3 and o4-mini. <https://openai.com/index/introducing-o3-and-o4-mini/>, 2025.
- [17] Bo Li, Yuanhan Zhang, Dong Guo, Renrui Zhang, Feng Li, Hao Zhang, Kaichen Zhang, Peiyuan Zhang, Yanwei Li, Ziwei Liu, et al. Llava-onevision: Easy visual task transfer. *arXiv preprint arXiv:2408.03326*, 2024.
- [18] Yuan Yao, Tianyu Yu, Ao Zhang, Chongyi Wang, Junbo Cui, Hongji Zhu, Tianchi Cai, Haoyu Li, Weilin Zhao, Zhihui He, et al. Minicpm-v: A gpt-4v level mllm on your phone. *arXiv preprint arXiv:2408.01800*, 2024.
- [19] claude. Introducing claude 3.5 sonnet. <https://www.anthropic.com/news/claude-3-5-sonnet>, 2024.
- [20] claude. Claude 3.5 haiku. <https://www.anthropic.com/claude/haiku>, 2024.
- [21] Jinguo Zhu, Weiyun Wang, Zhe Chen, Zhaoyang Liu, Shenglong Ye, Lixin Gu, Yuchen Duan, Hao Tian, Weijie Su, Jie Shao, et al. InternV13: Exploring advanced training and test-time recipes for open-source multimodal models. *arXiv preprint arXiv:2504.10479*, 2025.
- [22] Alex Young, Bei Chen, Chao Li, Chengen Huang, Ge Zhang, Guanwei Zhang, Guoyin Wang, Heng Li, Jiangcheng Zhu, Jianqun Chen, et al. Yi: Open foundation models by 01. ai. *arXiv preprint arXiv:2403.04652*, 2024.
- [23] OpenAI. Openai o3-mini: Pushing the frontier of cost-effective reasoning. <https://openai.com/index/openai-o3-mini/>, 2025.
- [24] DeepSeek-AI. Deepseek-v3 technical report, 2025. URL <https://arxiv.org/abs/2412.19437>.
- [25] An Yang, Anfeng Li, Baosong Yang, Beichen Zhang, Binyuan Hui, Bo Zheng, Bowen Yu, Chang Gao, Chengen Huang, Chenxu Lv, Chujie Zheng, Dayiheng Liu, Fan Zhou, Fei Huang, Feng Hu, Hao Ge, Haoran Wei, Huan Lin, Jialong Tang, Jian Yang, Jianhong Tu, Jianwei Zhang, Jianxin Yang, Jiayi Yang, Jing Zhou, Jingren Zhou, Junyang Lin, Kai Dang, Keqin Bao, Kexin Yang, Le Yu, Lianghao Deng, Mei Li, Mingfeng Xue, Mingze Li, Pei Zhang, Peng Wang, Qin Zhu, Rui Men, Ruize Gao, Shixuan Liu, Shuang Luo, Tianhao Li, Tianyi Tang, Wenbiao Yin, Xingzhang Ren, Xinyu Wang, Xinyu Zhang, Xuancheng Ren, Yang Fan, Yang Su, Yichang Zhang, Yinger Zhang, Yu Wan, Yuqiong Liu, Zekun Wang, Zeyu Cui, Zhenru Zhang, Zhipeng Zhou, and Zihan Qiu. Qwen3 technical report, 2025. URL <https://arxiv.org/abs/2505.09388>.
- [26] Jason Wei, Xuezhi Wang, Dale Schuurmans, Maarten Bosma, Fei Xia, Ed Chi, Quoc V Le, Denny Zhou, et al. Chain-of-thought prompting elicits reasoning in large language models. *Advances in neural information processing systems*, 35:24824–24837, 2022.
- [27] Long Ouyang, Jeffrey Wu, Xu Jiang, Diogo Almeida, Carroll Wainwright, Pamela Mishkin, Chong Zhang, Sandhini Agarwal, Katarina Slama, Alex Ray, et al. Training language models to follow instructions with human feedback. *Advances in neural information processing systems*, 35:27730–27744, 2022.
- [28] Dan Hendrycks, Collin Burns, Steven Basart, Andy Zou, Mantas Mazeika, Dawn Song, and Jacob Steinhardt. Measuring massive multitask language understanding. In *International Conference on Learning Representations*.
- [29] Liangtai Sun, Yang Han, Zihan Zhao, Da Ma, Zhennan Shen, Baocai Chen, Lu Chen, and Kai Yu. Scieval: A multi-level large language model evaluation benchmark for scientific research. In *Proceedings of the AAAI Conference on Artificial Intelligence*, volume 38, pages 19053–19061, 2024.
- [30] Jacob Austin, Augustus Odena, Maxwell Nye, Maarten Bosma, Henryk Michalewski, David Dohan, Ellen Jiang, Carrie Cai, Michael Terry, Quoc Le, et al. Program synthesis with large language models. *arXiv preprint arXiv:2108.07732*, 2021.

- [31] Jeffrey Zhou, Tianjian Lu, Swaroop Mishra, Siddhartha Brahma, Sujoy Basu, Yi Luan, Denny Zhou, and Le Hou. Instruction-following evaluation for large language models, 2023. URL <https://arxiv.org/abs/2311.07911>.
- [32] Xiaoxuan Wang, Ziniu Hu, Pan Lu, Yanqiao Zhu, Jieyu Zhang, Satyen Subramaniam, Arjun R Lomba, Shichang Zhang, Yizhou Sun, and Wei Wang. Scibench: Evaluating college-level scientific problem-solving abilities of large language models. In *International Conference on Machine Learning*, pages 50622–50649. PMLR, 2024.
- [33] Zhen Huang, Zengzhi Wang, Shijie Xia, Xuefeng Li, Haoyang Zou, Ruijie Xu, Run-Ze Fan, Lyumanshan Ye, Ethan Chern, Yixin Ye, et al. Olympicarena: Benchmarking multi-discipline cognitive reasoning for superintelligent ai. *Advances in Neural Information Processing Systems*, 37:19209–19253, 2024.
- [34] Xinyu Zhang, Yuxuan Dong, Yanrui Wu, Jiaying Huang, Chengyou Jia, Basura Fernando, Mike Zheng Shou, Lingling Zhang, and Jun Liu. Physreason: A comprehensive benchmark towards physics-based reasoning. *arXiv preprint arXiv:2502.12054*, 2025.
- [35] Yunzhuo Hao, Jiawei Gu, Huichen Will Wang, Linjie Li, Zhengyuan Yang, Lijuan Wang, and Yu Cheng. Can mllms reason in multimodality? emma: An enhanced multimodal reasoning benchmark. *arXiv preprint arXiv:2501.05444*, 2025.

## Table of Contents in Appendix

<b>A</b>	<b>Ethics Statement</b>	<b>14</b>
<b>B</b>	<b>Broader Impacts</b>	<b>14</b>
<b>C</b>	<b>More Dataset Details</b>	<b>14</b>
C.1	Question Distribution . . . . .	14
C.2	Introduction of Domain and Subfield . . . . .	14
C.3	Images by Domains . . . . .	15
C.4	Physical Reasoning Definition . . . . .	22
<b>D</b>	<b>More Evaluation Details</b>	<b>22</b>
D.1	CoT Prompting for Generating Answer . . . . .	22
D.2	Rule-based Answer Extraction . . . . .	22
D.3	Prompt for Answer Judge . . . . .	22
D.4	Prompt for Caption Generation . . . . .	22
D.5	Prompt for Reasoning Type Labeling . . . . .	22
<b>E</b>	<b>Case Study</b>	<b>27</b>
<b>F</b>	<b>Data Annotation Protocol</b>	<b>58</b>
F.1	Data Collection . . . . .	58
F.2	General Guidelines . . . . .	58
F.3	Data Format and Structure . . . . .	58
F.4	Quality Control and Validation . . . . .	58
F.5	Handling Ambiguities . . . . .	58
F.6	Ethical Considerations . . . . .	59
F.7	Data Contamination Considerations . . . . .	59

## A Ethics Statement

**Legal Compliance.** All questions included in PHYX are sourced from publicly accessible materials. During data collection, annotators are instructed to strictly follow the copyright and licensing terms of the original platforms. Any content from sources that prohibit reuse or redistribution MUST be explicitly excluded. PHYX is a non-commercial project, and its usage aligns with the principles outlined in Fair Use §107: "the fair use of a copyrighted work, including such use by ..... scholarship, or research, is not an infringement of copyright", where fair use is determined by "the purpose and character of the use, including whether such use is of a commercial nature or is for nonprofit educational purposes" and "the effect of the use upon the potential market for or value of the copyrighted work."

**Dataset Intended Usage and License.** The full details of the PHYX dataset are presented in this paper, and both the PHYX and code for reproducing results will be made publicly available. The PHYX dataset is not supposed to be used to train models for cheating. The primary goal is to support the research community in benchmarking and advancing physical reasoning in LLMs and MLLMs. We take full responsibility for any rights violation that may arise. Both the PHYX data and our open-source code are released under the MIT license.

## B Broader Impacts

Our benchmark aims to advance the evaluation of MLLMs in the domain of physical reasoning. By focusing on realistic visual scenarios grounded in physics, we hope to contribute toward the development of AI systems with stronger scientific reasoning capabilities, which is an essential step for applications in education, science tutoring, and automated scientific discovery. In particular, this benchmark may support the design of models that assist learners in understanding complex physical concepts through both text and visuals.

Potential negative impacts are limited but worth noting. First, as our dataset is curated entirely in English, it may not generalize well to non-English-speaking contexts, inadvertently reinforcing language bias. Then, the scenarios in our dataset are schematic rather than real-world images, which may limit generalization to real-world physical perception tasks.

We believe these concerns are manageable and do not diminish the broader positive potential of the benchmark in promoting robust, multimodal physical reasoning in foundation models.

## C More Dataset Details

### C.1 Question Distribution

All questions in PHYX are written in English. Figure 8 presents the distribution of word counts of questions in Text-DeRedundancy setting, demonstrating the variation in question lengths. The similarity between the median and average word counts suggests a roughly symmetrical distribution.

### C.2 Introduction of Domain and Subfield

As shown in Table 4, PHYX covers 6 core domains and 25 subdomains.

**Mechanics.** Mechanics is the branch of physics concerned with the motion of objects and the forces that cause or change this motion. It encompasses both classical mechanics and key subfields such as *Kinematics* (e.g., velocity, acceleration, free fall), *Dynamics* (e.g., Newton’s laws, force analysis, friction), *Work and Energy* (e.g., work-energy theorem, mechanical energy conservation), *Momentum and Collisions* (e.g., conservation of momentum, elastic and inelastic collisions), *Rotational Motion* (e.g., torque, angular acceleration, moment of inertia), and *Statics* (e.g., torque balance, structural analysis). Mechanics lays the groundwork for much of physics, enabling the understanding of how and why objects move or remain at rest in various physical systems.

**Electromagnetism.** Electromagnetism explores the interactions between electric charges and magnetic fields. It includes the subfields of *Electrostatics* (e.g., Coulomb’s law, electric fields and potential), *Electric Circuits* (e.g., Ohm’s law, circuit analysis, RC circuits), *Magnetism* (e.g., magnetic



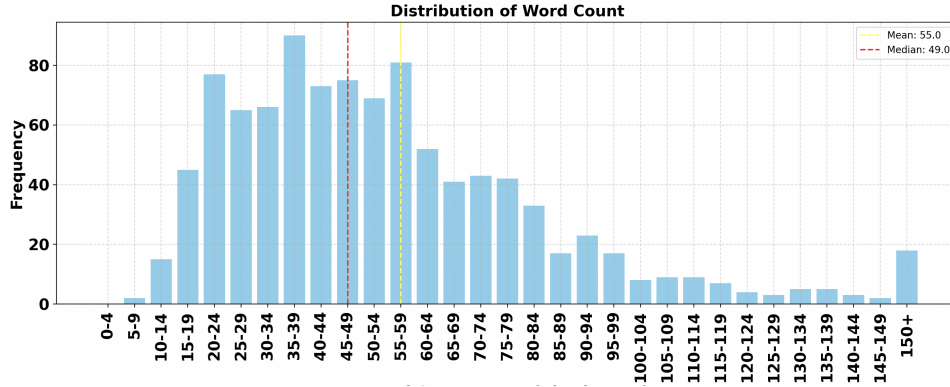


Figure 8: The distribution of the number of words per question in PHYX.

fields, Lorentz force, Ampère’s law), *Electromagnetic Induction* (e.g., Faraday’s law, Lenz’s law, inductance), and optionally, *Maxwell’s Equations and Electromagnetic Waves* for advanced topics. This domain underpins much of modern technology, including electric circuits, motors, and wireless transmission.

**Thermodynamics.** Thermodynamics is the study of heat, energy, and their transformations. Its subtopics include *Temperature and Heat Transfer* (e.g., conduction, convection, radiation), *Specific Heat and Calorimetry* (e.g., phase changes, heat calculations), *Laws of Thermodynamics* (e.g., energy conservation, entropy), and *Ideal Gases and Kinetic Theory* (e.g., gas laws, internal energy, pressure). This domain is central to engines, thermal systems, and understanding natural processes.

**Wave/Acoustics.** This domain investigates wave behavior and sound phenomena. Core subfields include *Wave Properties* (e.g., speed, frequency, wavelength, interference), *Sound* (e.g., pitch, loudness, Doppler effect, standing waves), and *Resonance and Harmonics* (e.g., resonant frequencies, vibrations in strings and air columns). These concepts are crucial in fields ranging from acoustics to telecommunications.

**Optics.** Optics studies the behavior and properties of light. It includes *Geometrical Optics* (e.g., reflection, refraction, lens imaging, total internal reflection), *Wave Optics* (e.g., interference, diffraction, polarization), and *Optical Instruments* (e.g., microscopes, telescopes, image formation). Optics has broad applications in imaging, vision science, and photonics.

**Modern Physics.** Modern Physics addresses phenomena beyond the scope of classical mechanics. Its key subfields include *Relativity* (e.g., time dilation, mass-energy equivalence), *Quantum Phenomena* (e.g., photoelectric effect, atomic models), *Nuclear Physics* (e.g., radioactivity, nuclear reactions, mass defect), and optionally *Particle Physics* (e.g., elementary particles, the Standard Model). These topics form the theoretical basis of contemporary physics and technology.

### C.3 Images by Domains

In this section, we present images example from the physics problems in PHYX. Figure 9, Figure 10, Figure 11, Figure 12, Figure 13 and Figure 14 show images from the problems under the category of Mechanics, Electromagnetism, Thermodynamics, Wave/Acoustics, Optics, Modern Physics, respectively.

We observe that the images in our dataset are highly realistic, often depicting concrete physical scenarios rather than stylized or abstract illustrations. While they are not real-world photographs, these visuals are grounded in plausible physical settings. This realism provides essential context for physical reasoning and helps bridge the gap between abstract physics principles and their real-world manifestations.

Across domains, the visual characteristics vary in alignment with the nature of the physical concepts. Despite their domain-specific variations, a unifying theme across all categories is the consistent use of realistic and context-rich imagery, which provides essential grounding for physical interpretation and distinguishes our benchmark from other datasets with overly synthetic or schematic visual content.

# Mechanics

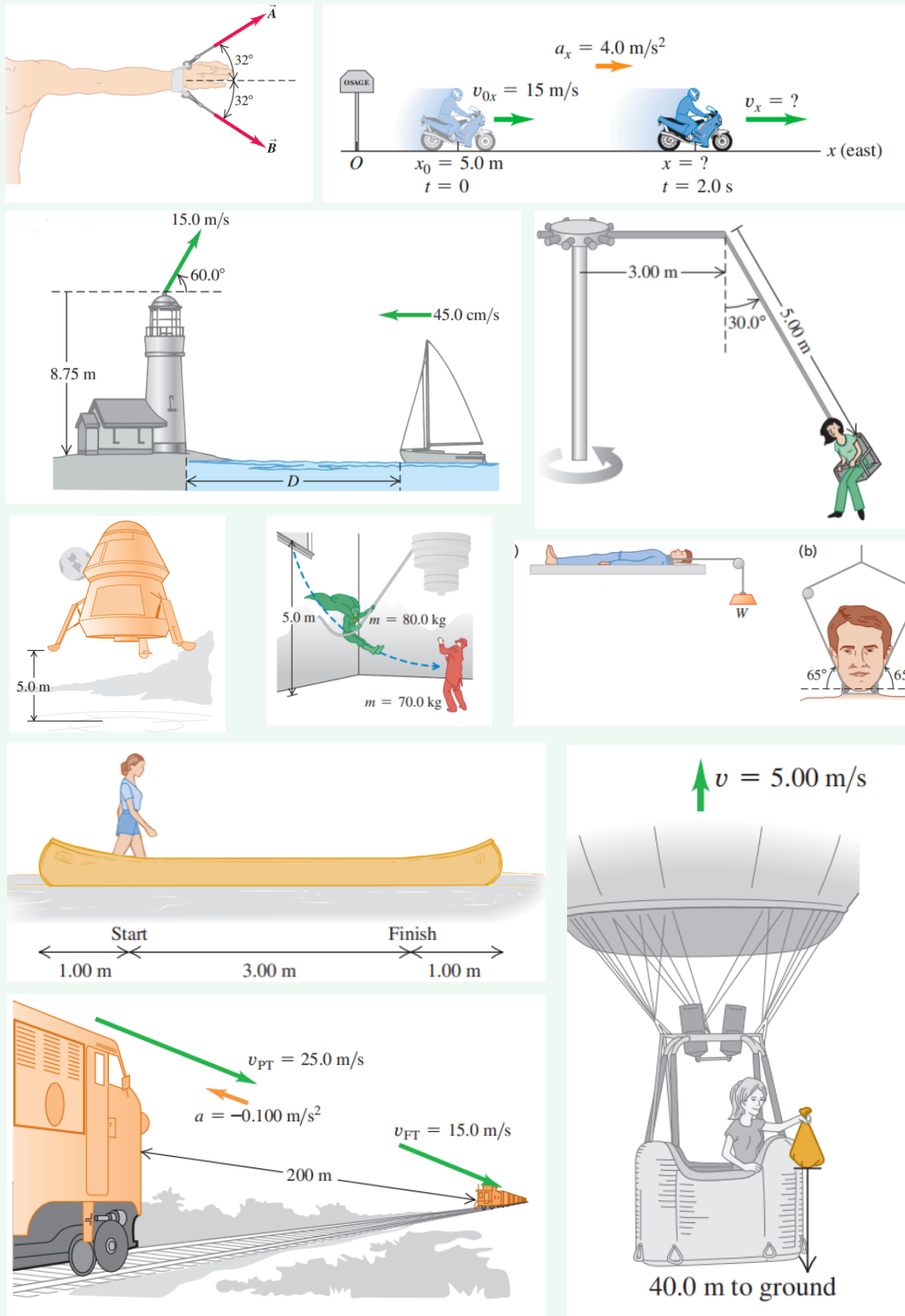


Figure 9: Examples of the visual context for the *Mechanics* domain.

# Electromagnetism

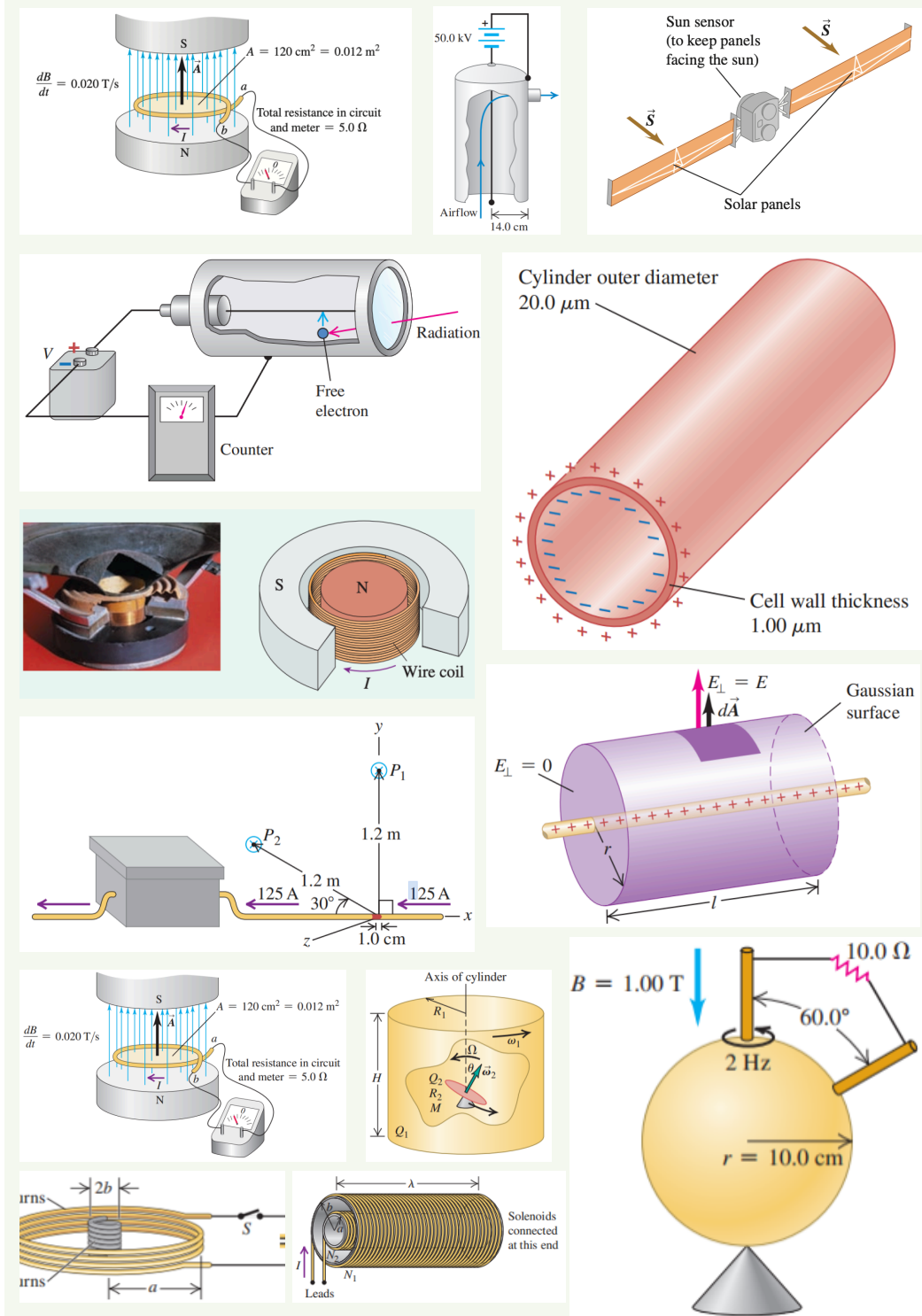


Figure 10: Examples of the visual context for the *Electromagnetism* domain.

# Thermodynamics

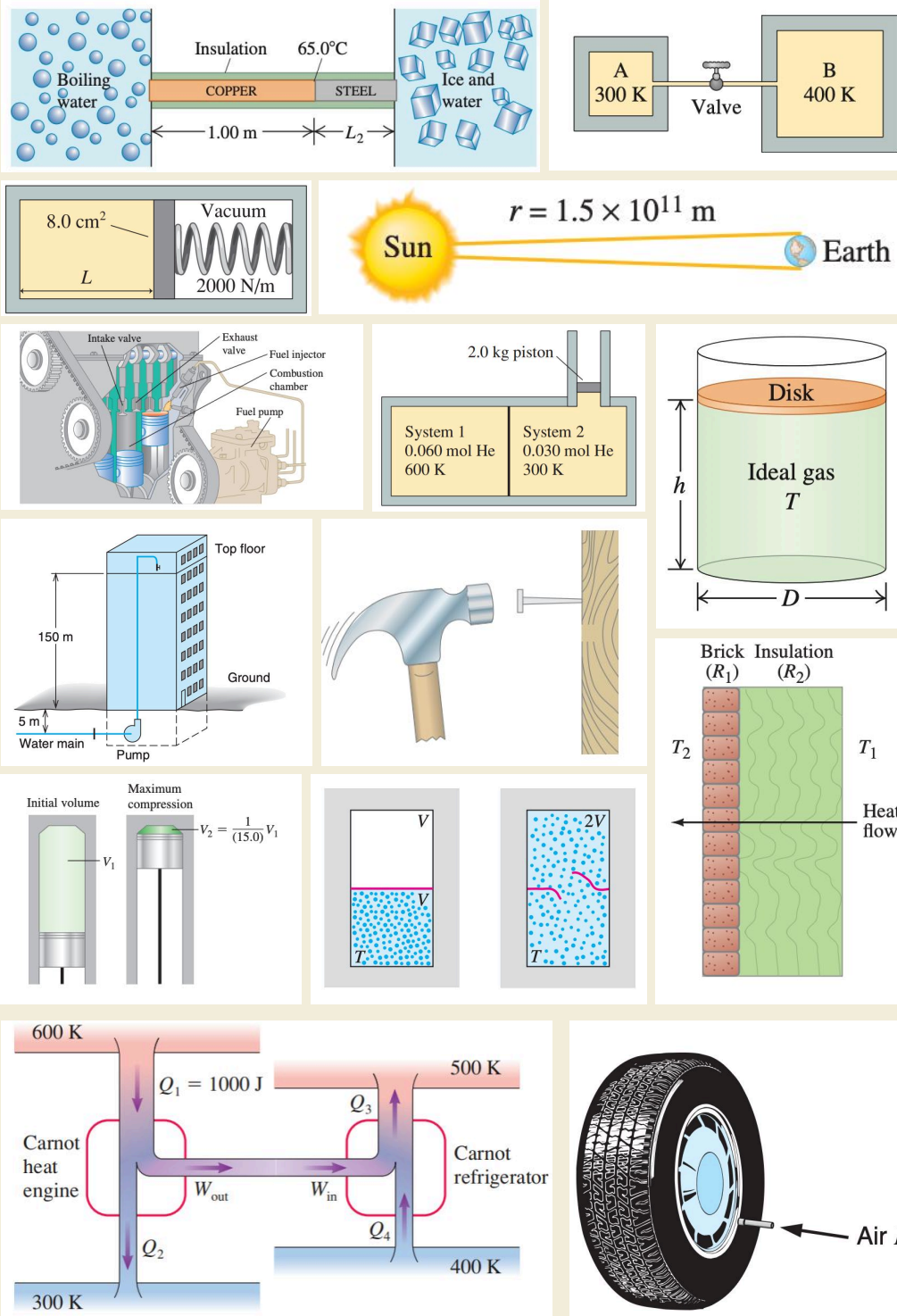


Figure 11: Examples of the visual context for the *Thermodynamics* domain.

# Wave/Acoustics

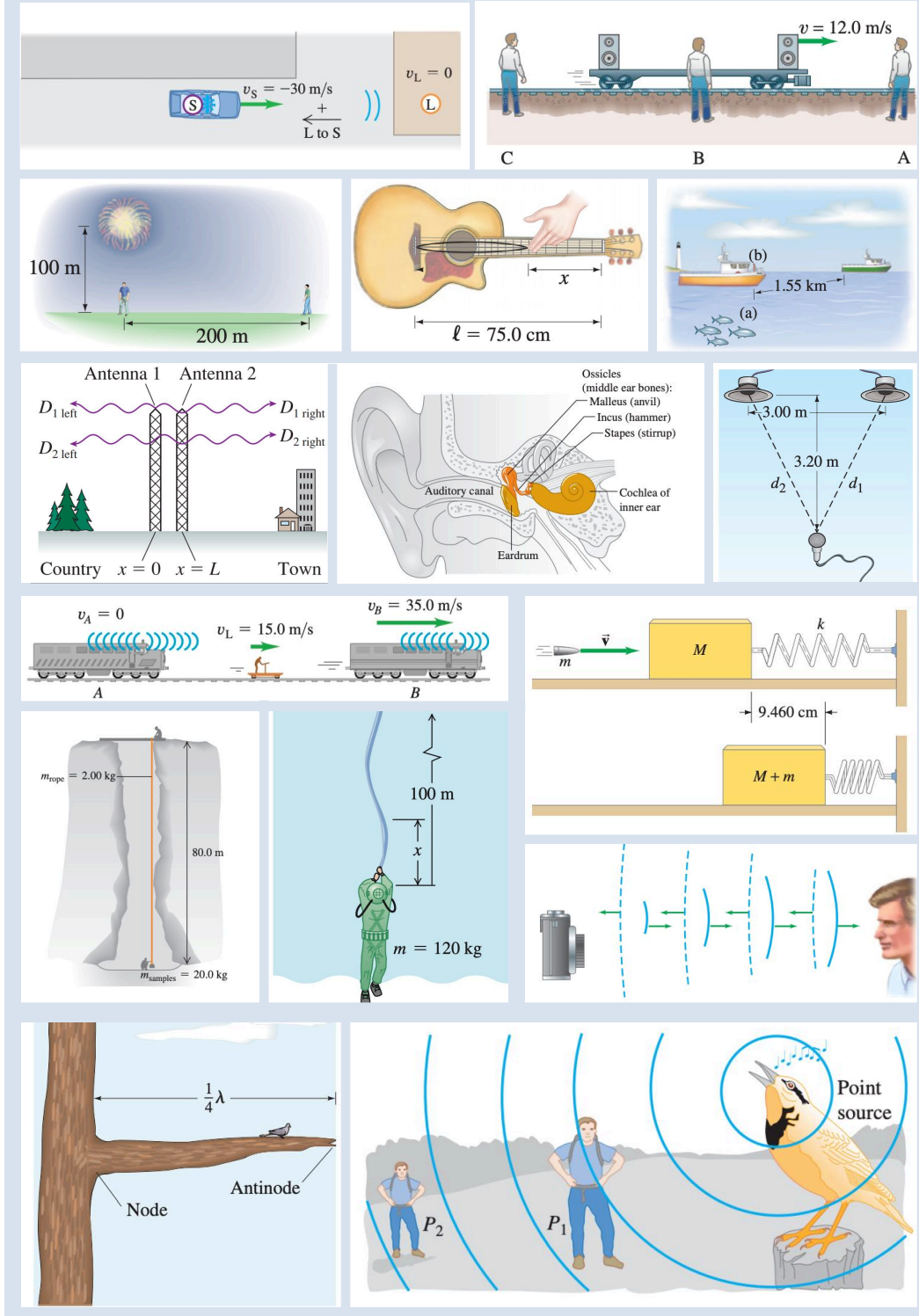


Figure 12: Examples of the visual context for the *Wave/Acoustics* domain.



# Optics

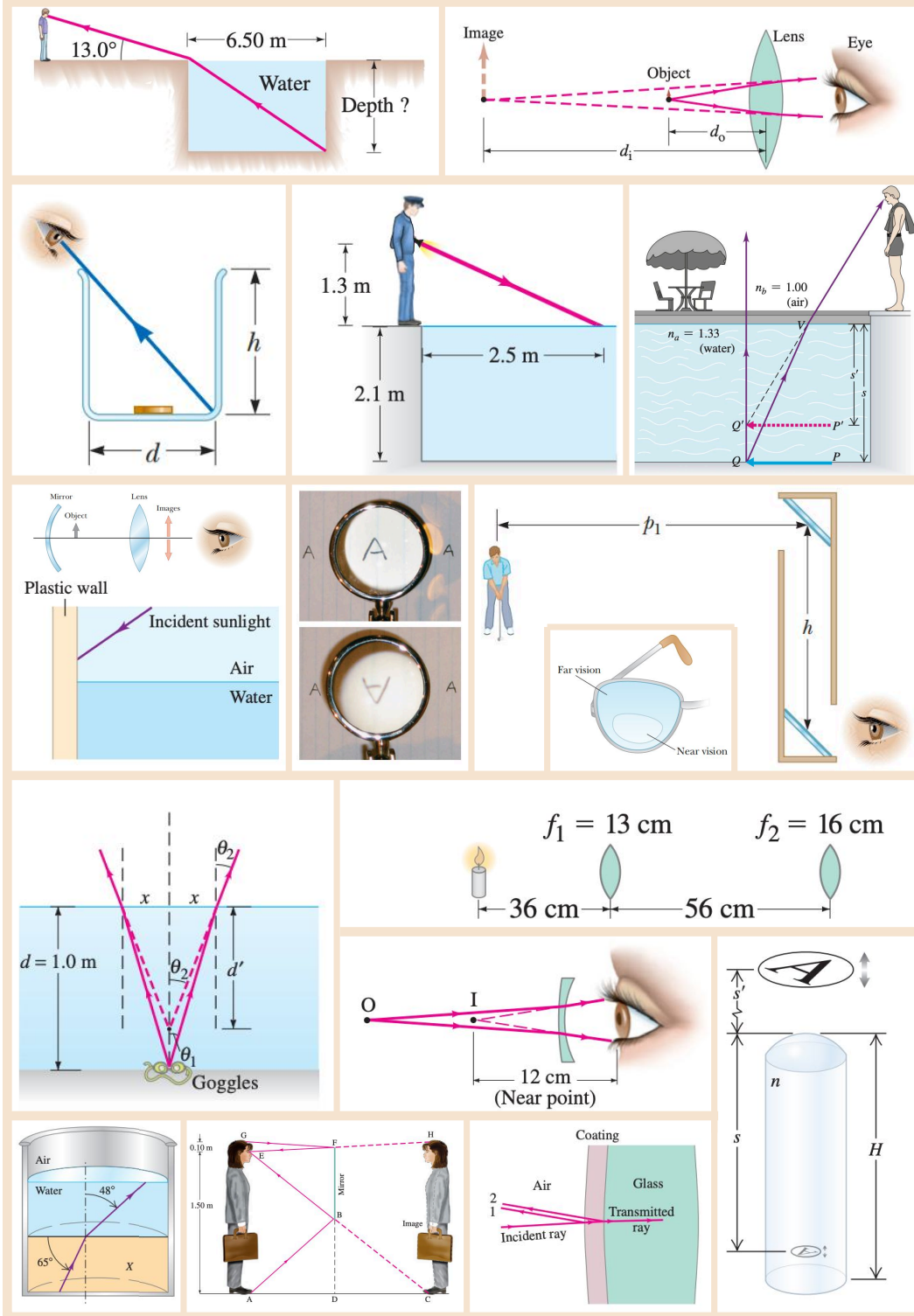


Figure 13: Examples of the visual context for the *Optics* domain.

# Modern Physic

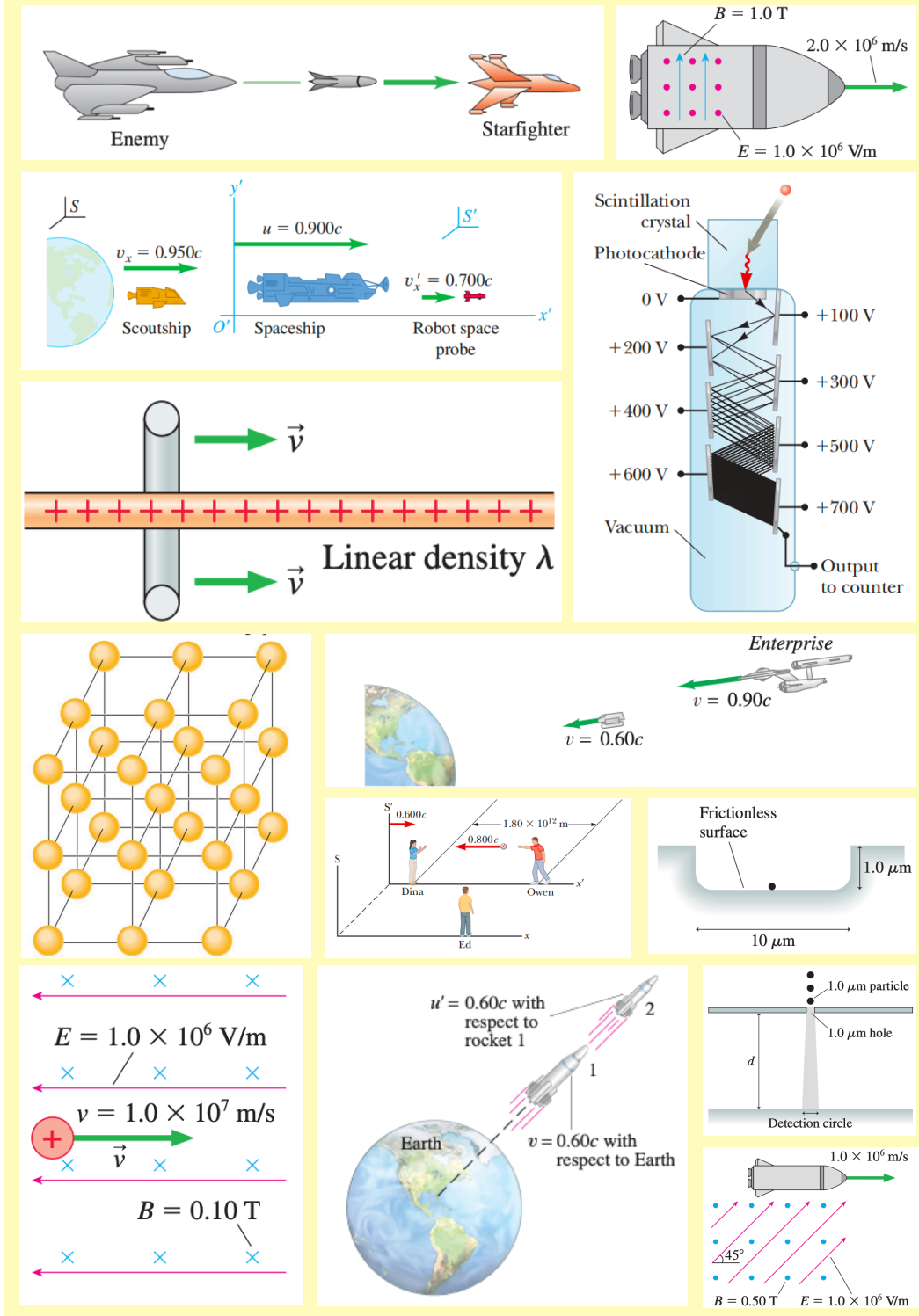


Figure 14: Examples of the visual context for the *Modern Physics* domain.

Domain	Subfields
Optics	Optical Instrument, Wave Optics, and Geometrical Optics
Electromagnetism	Electromagnetic Wave, Electric Circuits, Magnetism, Electromagnetic Induction, and Electrostatics
Mechanics	Momentum and Collisions, Work and Energy, Statics, Dynamics, Relational Motion, and Kinematics.
Wave/Acoustics	Sound, Resonance and Harmonics, and Wave Properties
Thermodynamics	Specific Heat and Calorimetry, Temperature and Heat Transfer, Ideal Gases and Kinetic Theory, and Laws of Thermodynamics
Modern Physics	Particle Physics, Nuclear Physics, Relativity, and Quantum Phenomena

Table 4: Subfields included in each domain in PHYX.

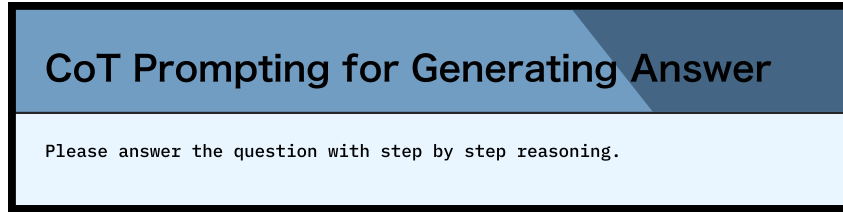


Figure 15: CoT prompting for generating answer.

#### C.4 Physical Reasoning Definition

Six physical reasoning types are defined in Table 5.

### D More Evaluation Details

We conduct all experiments on NVIDIA A100 80G GPUs.

#### D.1 CoT Prompting for Generating Answer

The CoT prompting for generating answer is shown in Figure D.1.

#### D.2 Rule-based Answer Extraction

The rule-based answer extraction strategies for MC and OE questions are shown in Figure 16 and Figure 17, respectively.

#### D.3 Prompt for Answer Judge

The prompt for answer judge is shown in Figure 18.

#### D.4 Prompt for Caption Generation

The prompt for caption generation is shown in Figure 19

#### D.5 Prompt for Reasoning Type Labeling

The prompt for reasoning type labeling is shown in Figure 20 and Figure 21

Physical Reasoning	Description
Physical Model Grounding Reasoning	This reasoning involves connecting the specific details of a problem description to fundamental physical concepts, laws, and idealized models. It's the process of identifying which area of physics is relevant and selecting the appropriate simplified representations that allow the problem to be analyzed using established physical principles and equations. Essentially, it translates a real-world or described scenario into a solvable physics framework.
Spatial Relation Reasoning	This focuses on understanding and manipulating the geometric and directional aspects of a physics problem. It involves visualizing the setup, determining the positions, orientations, distances, angles, and relative movements of objects. This often requires using coordinate systems, vectors (including resolving them into components), and geometric principles.
Multi-Formula Reasoning	This reasoning type is required when a problem cannot be solved using a single physics equation. It involves identifying multiple relevant formulas or principles and understanding how they interrelate. The process typically involves using the output of one formula as the input for another, or setting up and solving a system of simultaneous equations derived from different physical laws.
Implicit Condition Reasoning	This involves recognizing and utilizing information or constraints that are not explicitly stated in the problem text but are implied by the context, standard physics assumptions, or specific keywords. Examples include understanding that "starts from rest" means the initial velocity is zero, a "smooth" surface implies zero friction, a "light string" or "light pulley" means its mass is negligible, or that an object reaching its maximum height has a momentary vertical velocity of zero.
Numerical Reasoning	This reasoning refers to problems where solving requires the application of advanced mathematical methods beyond basic algebra and trigonometry. This includes techniques such as calculus, solving differential equations that model the system, vector calculus, Fourier analysis, linear algebra for complex systems, or other higher-level mathematical procedures necessary to manipulate the physical formulas and arrive at a solution. This applies when the mathematical technique itself is a core part of solving the physics, regardless of whether the final answer is purely numerical or symbolic.
Predictive Reasoning	This involves using established physical laws and the initial conditions of a system to forecast its future state or behavior. Based on the principles governing the situation, you calculate or deduce what will happen after a certain time or interaction. Examples include predicting the trajectory of a projectile, the final temperature of a mixture after thermal equilibrium is reached, or the velocity of objects after a collision.

Table 5: Definitions of six physical reasoning categories in PHYX.

## Rule-based Answer Extraction (MC)

```
def MetaPhyX_process_line_MC(line):
    ret = {}

    answers = str(line['answer'])

    ret["index"] = line["index"]
    ret['gt'] = answers
    ret['pred'] = line['prediction'].strip()

    pattern = r'\b(?:correct|answer|option|Answer|Option|
Correct)\b[\s\S]*?([A-D])'
    match = re.search(pattern, ret['pred'])
```

Figure 16: Rule-based answer extraction strategy for MC questions.

## Rule-based Answer Extraction (OE)

```
def MetaPhyX_process_line(line):
    ret = {}

    answers = str(line['answer'])

    ret["index"] = line["index"]
    ret['gt'] = answers
    ret['pred'] = line['prediction'].strip()

    pattern = r'\b(?:final\s+answer|
correct\s+answer)\b(?:[: :]*[: :]\s*(.*?))?(?=\n\n|\n|\Z)'
    flags = re.IGNORECASE | re.DOTALL
    match = re.search(pattern, ret['pred'], flags=flags)
```

Figure 17: Rule-based answer extraction strategy for OE questions.



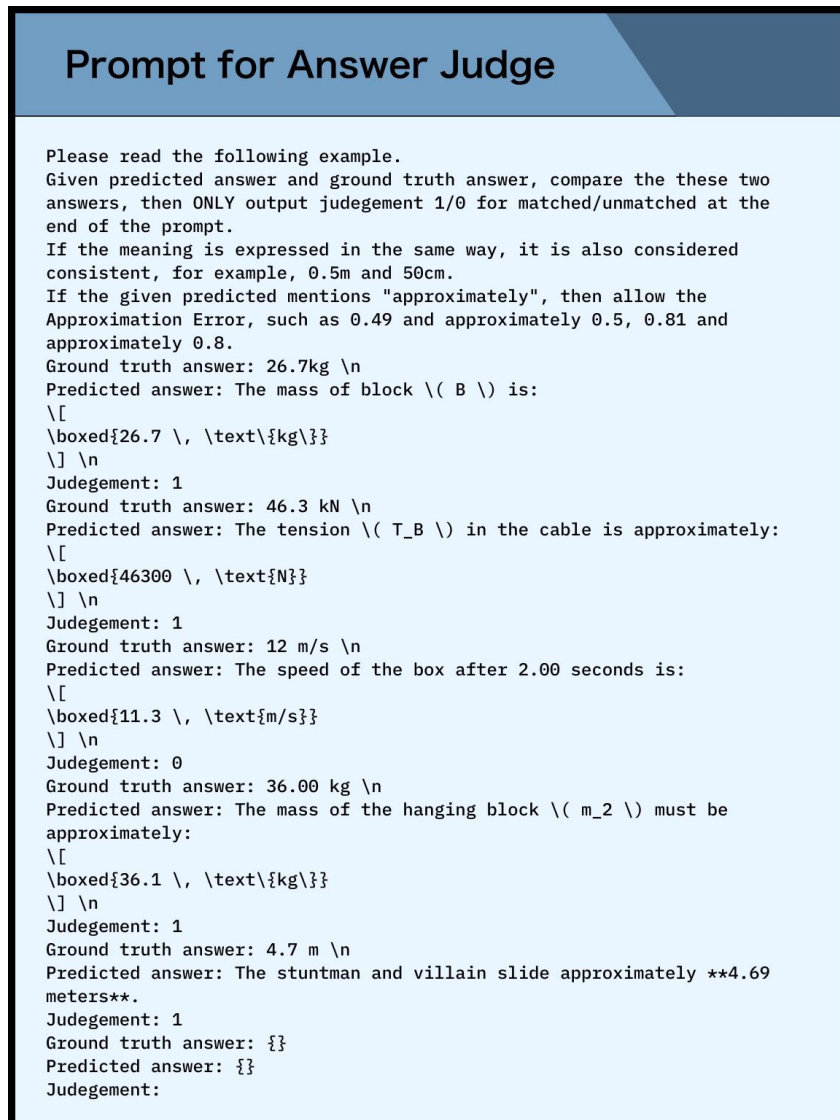


Figure 18: Rule-based answer extraction strategy for OE questions.

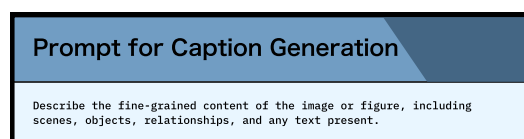


Figure 19: Prompt template for caption generation.

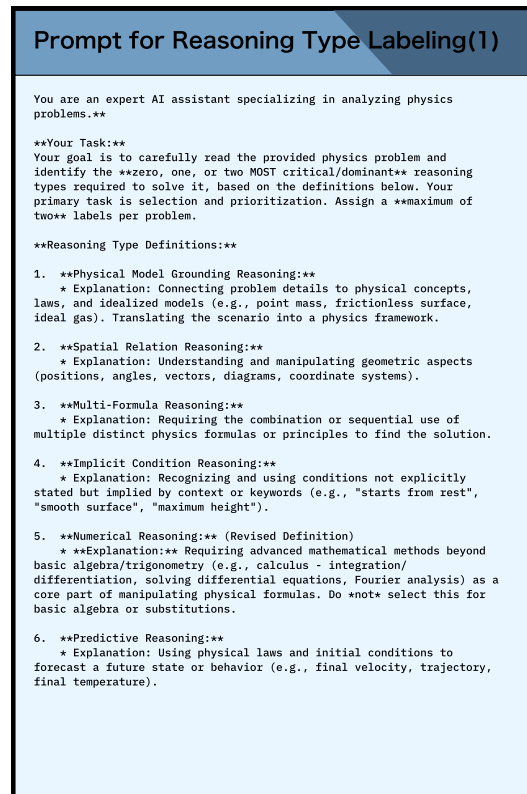


Figure 20: Prompt for reasoning type labeling (1).

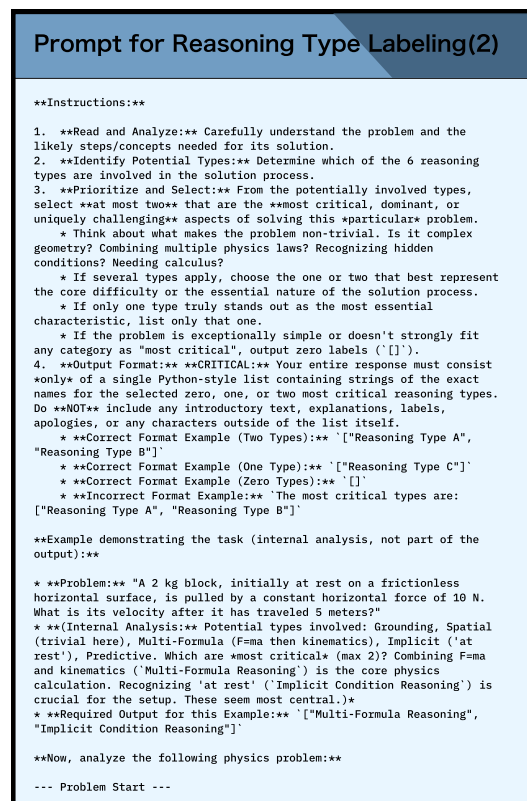


Figure 21: Prompt for reasoning type labeling (2).

## E Case Study

### List of Case Study Figures

1	Mechanics 1: Correct Case . . . . .	28
2	Mechanics 2: Correct Case . . . . .	29
3	Mechanics 3: Visual Reasoning Error . . . . .	30
4	Mechanics 4: Text Reasoning Error . . . . .	31
5	Mechanics 5: Lack of Knowledge . . . . .	32
6	Electromagnetism 1: Correct Case . . . . .	33
7	Electromagnetism 2: Correct Case . . . . .	34
8	Electromagnetism 3: Visual Reasoning Error . . . . .	35
9	Electromagnetism 4: Text Reasoning Error . . . . .	36
10	Electromagnetism 5: Lack of Knowledge . . . . .	37
11	Thermodynamics 1: Correct Case . . . . .	38
12	Thermodynamics 2: Correct Case . . . . .	39
13	Thermodynamics 3: Visual Reasoning Error . . . . .	40
14	Thermodynamics 4: Text Reasoning Error . . . . .	41
15	Thermodynamics 5: Lack of Knowledge . . . . .	42
16	Wave/Acoustics 1: Correct Case . . . . .	43
17	Wave/Acoustics 2: Correct Case . . . . .	44
18	Wave/Acoustics 3: Visual Reasoning Error . . . . .	45
19	Wave/Acoustics 4: Text Reasoning Error . . . . .	46
20	Wave/Acoustics 5: Lack of Knowledge . . . . .	47
21	Optics 1: Correct Case . . . . .	48
22	Optics 2: Correct Case . . . . .	49
23	Optics 3: Visual Reasoning Error . . . . .	50
24	Optics 4: Text Reasoning Error . . . . .	51
25	Optics 5: Lack of Knowledge . . . . .	52
26	Modern Physics 1: Correct Case . . . . .	53
27	Modern Physics 2: Correct Case . . . . .	54
28	Modern Physics 3: Visual Reasoning Error . . . . .	55
29	Modern Physics 4: Text Reasoning Error . . . . .	56
30	Modern Physics 5: Lack of Knowledge . . . . .	57

Domain	Correct	Visual Reasoning Error	Text Reasoning Error	Lack of Knowledge
Mechanics	1, 2	3	4	5
Electromagnetism	6, 7	8	9	10
Thermodynamics	11, 12	13	14	15
Wave/Acoustics	16, 17	18	19	20
Optics	21, 22	23	24	25
Modern Physics	26, 27	28	29	30

Table 6: Table index of case study figures by domains with associated error categories.

# Mechanics

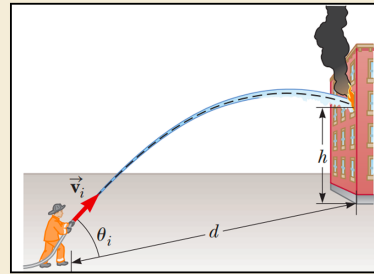


## Description:

A firefighter, a distance  $d$  from a burning building, directs a stream of water from a fire hose at angle  $\theta_i$  above the horizontal as shown in figure.

## Question:

If the initial speed of the stream is  $v_i$ , at what height  $h$  does the water strike the building?



## GPT-4o:

To determine the height  $(h)$  at which the water strikes the building, we will analyze the motion of the water as a projectile. The motion can be broken into horizontal and vertical components. Here's the step-by-step reasoning:

Step 1: Break the initial velocity into components

The initial velocity  $(v_i)$  can be resolved into horizontal and vertical components:  $[v_{ix} = v_i \cos \theta_i]$   $[v_{iy} = v_i \sin \theta_i]$

Step 2: Time of flight to reach the building

The horizontal distance  $(d)$  is covered at a constant horizontal velocity  $(v_{ix})$ . The time  $(t)$  it takes for the water to reach the building is given by:  $[d = v_{ix} t]$

Substitute  $(v_{ix} = v_i \cos \theta_i)$ :  $[t = \frac{d}{v_i \cos \theta_i}]$

Step 3: Vertical displacement at time  $(t)$

The vertical displacement  $(y)$  of the water at time  $(t)$  is determined by the kinematic equation:

$$[y = v_{iy} t - \frac{1}{2} g t^2]$$

Substitute  $(v_{iy} = v_i \sin \theta_i)$  and  $(t = \frac{d}{v_i \cos \theta_i})$ :

$$[y = \left( v_i \sin \theta_i \right) \left( \frac{d}{v_i \cos \theta_i} \right) - \frac{1}{2} g \left( \frac{d}{v_i \cos \theta_i} \right)^2]$$

Simplify the terms:

$$[y = \frac{d \tan \theta_i}{1} - \frac{g d^2}{2 v_i^2 \cos^2 \theta_i}]$$

Step 4: Interpret the result

The height  $(h)$  at which the water strikes the building is the vertical displacement  $(y)$  when the water reaches the horizontal distance  $(d)$ . Thus:

$$[h = d \tan \theta_i - \frac{g d^2}{2 v_i^2 \cos^2 \theta_i}]$$

Final Answer:

The height  $(h)$  at which the water strikes the building is:

$$[h = d \tan \theta_i - \frac{g d^2}{2 v_i^2 \cos^2 \theta_i}]$$

Where:

- $(d)$  is the horizontal distance to the building,
- $(\theta_i)$  is the angle of the water stream above the horizontal,
- $(v_i)$  is the initial speed of the water,
- $(g)$  is the acceleration due to gravity  $(9.8 \text{ m/s}^2)$ .

**Reasoning Type: Physical Model Grounding Reasoning , Spatial Relation Reasoning**

**Ground Truth:  $d \tan \theta_i - \frac{g d^2}{2 v_i^2 \cos^2 \theta_i}$**

Figure 1: A sample correct case of Mechanics.  
[Back to List of Figures](#) | [Back to Table Index](#)

# Mechanics



## Description:

A landscape architect is designing an artificial waterfall in a city park. Water flows at a speed of 1.70 m/s as it exits the end of a horizontal channel located at the top of a vertical wall of height  $h=2.35$  m. From there, the water falls freely into a pool below, as shown in the figure.

## Question:

To sell her plan to the city council, the architect wants to build a model to standard scale, which is one-twelfth actual size. How fast should the water flow in the channel in the model?

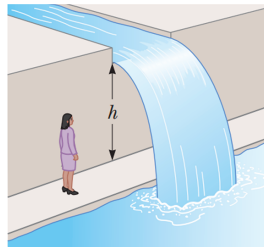
## Options:

A. 0.325m/s

B. 0.120m/s

C. 0.491m/s

D. 0.212m/s



## GPT-4o:

The speed of water in the model can be determined using the principle of similarity. The velocity in the model is scaled by the square root of the length scale factor. Since the model is one-twelfth the size of the actual waterfall, the length scale factor is  $\sqrt{1/12}$ .

The velocity in the model is given by:

$$v_{\text{model}} = v_{\text{actual}} \cdot \sqrt{\frac{\text{scale of model}}{\text{scale of actual}}}$$

Substituting the values:

$$v_{\text{model}} = 1.70 \cdot \sqrt{\frac{1}{12}} = 1.70 \cdot \sqrt{0.0833} \approx 1.70 \cdot 0.2887 \approx 0.491 \text{ m/s}$$

The correct answer is: **C**

**Reasoning Type: Physical Model Grounding Reasoning , Multi-Formula Reasoning**

**Ground Truth: C . 0.491m/s**

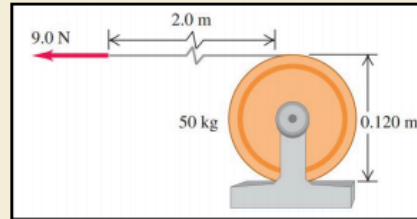
Figure 2: A sample correct case of Mechanics.  
[Back to List of Figures](#) | [Back to Table Index](#)

# Mechanics



## Description:

We wrap a light, nonstretching cable around a solid cylinder, of mass 50 kg and diameter 0.120 m, that rotates in frictionless bearings about a stationary horizontal axis as shown in figure. We pull the free end of the cable with a constant 9.0 N force for a distance of 2.0 m; it turns the cylinder as it unwinds without slipping. The cylinder is initially at rest.



## Question:

Find the final speed of the cable.

## GPT-4o:

To solve this problem, we will use the principles of work and energy, as well as rotational dynamics. Here's the step-by-step reasoning:

Step 1: Understand the system

.....

Step 2: Work done by the force

.....

Step 3: Rotational kinetic energy of the cylinder

.....

Step 4: Relationship between linear and angular velocity

.....

### Step 5: Total kinetic energy

The total kinetic energy of the system is the sum of the rotational kinetic energy of the cylinder and the translational kinetic energy of the cable:

$$K_{\text{total}} = K_{\text{rot}} + K_{\text{trans}}, \quad \text{where } K_{\text{trans}} = \frac{1}{2} m v^2.$$

Substitute  $K_{\text{rot}} = \frac{1}{2} I \omega^2$  and  $\omega = \frac{v}{r}$ :

$$K_{\text{rot}} = \frac{1}{2} I \left( \frac{v}{r} \right)^2 = \frac{1}{2} \left( 0.090 \right) \left( \frac{v}{0.060} \right)^2.$$

Simplify:

$$K_{\text{rot}} = \frac{1}{2} \cdot 0.090 \cdot \frac{v^2}{0.060^2} = \frac{0.090}{2} \cdot 0.060^{-2} v^2 = 12.5 v^2.$$

The translational kinetic energy is:

$$K_{\text{trans}} = \frac{1}{2} m v^2 = \frac{1}{2} (50) v^2 = 25 v^2.$$

Thus, the total kinetic energy is:

$$K_{\text{total}} = K_{\text{rot}} + K_{\text{trans}} = 12.5 v^2 + 25 v^2 = 37.5 v^2.$$

Step 6: Work-energy principle

.....

Final Answer:

The final speed of the cable is approximately:

$$\boxed{0.69 \text{ m/s}}.$$

**Reasoning Type:** Multi-Formula Reasoning , Physical Model Grounding Reasoning

**Error Type:** Text Reasoning Errors

**Ground Truth:** 1.2 m/s

Figure 3: A sample error case of Mechanics. Error category: Visual Reasoning Error  
[Back to List of Figures](#) | [Back to Table Index](#)

# Mechanics

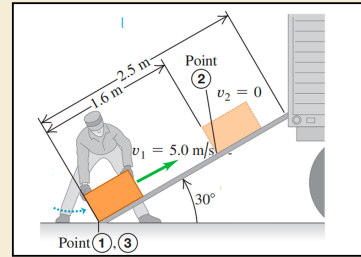


## Description:

We want to slide a 12-kg crate up a 2.5-m-long ramp inclined at  $30^\circ$ . A worker, ignoring friction, calculates that he can do this by giving it an initial speed of 5.0 m/s at the bottom and letting it go. But friction is not negligible; the crate slides only 1.6 m up the ramp, stops, and slides back down.

## Question:

How fast is the crate moving when it reaches the bottom of the ramp?



## GPT-4o:

To solve this problem, we will use the principles of energy conservation, taking into account the work done by friction. Here's the step-by-step reasoning:

Step 1: Define the system and energy components

.....

Step 2: Write the energy conservation equation

.....

Step 3: Calculate the work done by friction\*\*

The work done by friction is:  $W_{\text{friction}} = f_k d$

The frictional force ( $f_k$ ) is given by:  $f_k = \mu_k N$

Where:

- $\mu_k$ : Coefficient of kinetic friction.
- $N = mg \cos \theta$ : Normal force on the ramp.

The total distance traveled by the crate is:

$d = 1.6 \text{ m (up)} + 1.6 \text{ m (down)} = 3.2 \text{ m}$ .

Thus:  $W_{\text{friction}} = \mu_k m g \cos \theta \cdot d$

Step 4: Solve for the final velocity

.....

Step 5: Substitute known values

Given:

- $v_1 = 5.0 \text{ m/s}$ ,
- $g = 9.8 \text{ m/s}^2$ ,
- $\theta = 30^\circ$ ,
- $d = 3.2 \text{ m}$ ,
- $\mu_k = \text{unknown (not provided)}$ .

If ( $\mu_k$ ) is provided, substitute it into the equation to calculate ( $v_2$ ).

Reasoning Type: Physical Model Grounding Reasoning , Multi-Formula Reasoning

Error Type: Text Reasoning Errors

Ground Truth: 2.5 m/s

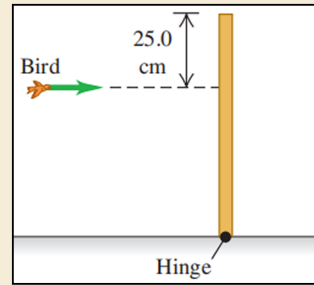
Figure 4: A sample error case of Mechanics. Error category: Text Reasoning Error  
[Back to List of Figures](#) | [Back to Table Index](#)

# Mechanics



## Description:

A 500.0 g bird is flying horizontally at 2.25 m/s, not paying much attention, when it suddenly flies into a stationary vertical bar, hitting it 25.0 cm below the top as shown in figure. The bar is uniform, 0.750 m long, has a mass of 1.50 kg, and is hinged at its base.



## Question:

What is the angular velocity of the bar just as it reaches the ground?

## GPT-4o:

To solve this problem, we need to determine the angular velocity of the bar just as it reaches the ground. This involves analyzing the collision and the subsequent rotational motion of the bar. Here's the step-by-step solution:

### Step 1: Conservation of Angular Momentum

The bird collides with the bar, imparting angular momentum to it. **Since the hinge is frictionless, angular momentum about the hinge is conserved during the collision.**

Angular Momentum Before Collision

The bird has linear momentum before the collision:

$$p_{\text{bird}} = m_{\text{bird}} v_{\text{bird}}$$

...

The bird's angular momentum about the hinge is:

$$L_{\text{bird}} = p_{\text{bird}} \cdot r$$

where  $r = 0.750 - 0.250 = 0.500 \text{ m}$  is the perpendicular distance from the hinge to the point of collision.

$$L_{\text{bird}} = (1.125)(0.500) = 0.5625 \text{ kg}\cdot\text{m}^2/\text{s}$$

Angular Momentum After Collision

**After the collision, the bar rotates about the hinge. Its angular momentum is:**

$$L_{\text{bar}} = I_{\text{bar}} \cdot \omega$$

where:

-  $I_{\text{bar}}$  is the moment of inertia of the bar about the hinge,

-  $\omega$  is the angular velocity of the bar.

...

**Using conservation of angular momentum:**

$$L_{\text{bird}} = L_{\text{bar}}$$

$$0.5625 = (0.28125) \cdot \omega$$

**Solve for  $\omega$ :**

$$\omega = \frac{0.5625}{0.28125} = 2.00 \text{ rad/s}$$

**Thus, the angular velocity of the bar immediately after the collision is:**

$$\omega = 2.00 \text{ rad/s}$$

### Step 2: Energy Conservation During Rotation

**After the collision, the bar rotates about the hinge. As it falls, its potential energy is converted into rotational kinetic energy.**

Initial Potential Energy

...

**Solve for  $\omega$ :**

$$\omega^2 = \frac{2(5.5125)}{0.28125} = 39.2$$

$$\omega = \sqrt{39.2} = 6.26 \text{ rad/s}$$

**Final Answer:**

The angular velocity of the bar just as it reaches the ground is:

$$\boxed{6.26 \text{ rad/s}}$$

**Reasoning Type: Multi-Formula Reasoning, Physical Model Grounding Reasoning**

**Error Type: Lack of knowledge**

**Ground Truth: 6.58 rad/s**

Figure 5: A sample error case of Mechanics. Error category: Lack of Knowledge  
[Back to List of Figures](#) | [Back to Table Index](#)



# Electromagnetism

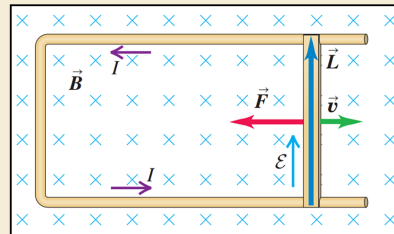


## Description:

In the slidewire, energy is dissipated in the circuit owing to its resistance. Let the resistance of the circuit (made up of the moving slidewire and the U-shaped conductor that connects the ends of the slidewire) at a given point in the slidewire's motion be  $R$ .

## Question:

Find the rate at which energy is dissipated in the circuit.



## GPT-4o:

To find the rate at which energy is dissipated in the circuit, we need to calculate the power dissipated due to the resistance  $(R)$ . The power dissipated in a resistor is given by:

$$P = \frac{\mathcal{E}^2}{R},$$

where  $(\mathcal{E})$  is the electromotive force (emf) induced in the circuit. Let's calculate  $(\mathcal{E})$  and then substitute it into the formula for power dissipation.

Step 1: Determine the induced emf  $(\mathcal{E})$

The emf induced in the circuit is due to the motion of the slidewire in the magnetic field  $(\mathbf{B})$ . According to Faraday's law of electromagnetic induction, the emf is given by:  $\mathcal{E} = B L v$ , where:

- $(B)$  is the magnitude of the uniform magnetic field (perpendicular to the plane of the circuit),
- $(L)$  is the length of the slidewire (the part of the circuit moving in the magnetic field),
- $(v)$  is the velocity of the slidewire (perpendicular to both  $(\mathbf{B})$  and  $(L)$ ).

Step 2: Calculate the current in the circuit

The current  $(I)$  in the circuit is related to the emf and the resistance  $(R)$  by Ohm's law:

$$I = \frac{\mathcal{E}}{R}.$$

Substituting  $(\mathcal{E} = B L v)$ , we get:  $I = \frac{B L v}{R}.$

Step 3: Calculate the power dissipated in the circuit

The power dissipated in the circuit due to the resistance  $(R)$  is given by:  $P = I^2 R.$

Substitute  $(I = \frac{B L v}{R})$  into this expression:  $P = \left( \frac{B L v}{R} \right)^2 R.$

Simplify the expression:  $P = \frac{(B L v)^2}{R}.$

Final Answer:

The rate at which energy is dissipated in the circuit is:

$$P = \frac{(B L v)^2}{R}.$$

This is the power dissipated in the circuit due to its resistance.

**Reasoning Type: Physical Model Grounding Reasoning , Multi-Formula Reasoning**

**Ground Truth:  $B^2 L^2 v^2 / R$**

Figure 6: A sample correct case of Electromagnetism.

[Back to List of Figures](#) | [Back to Table Index](#)

# Electromagnetism



## Description:

A sensitive electronic device with a resistance of  $R=175\ \Omega$  is to be connected to a source of emf (with negligible internal resistance) by a switch. The device is designed to operate with a current of 36 mA, but to avoid damage to the device, the current can rise to no more than 4.9mA in the first 58  $\mu\text{s}$  after the switch is closed. An inductor is therefore connected in series with the device, as shown in the figure; the switch in question is  $S_1$ .

## Question:

What is the R-L time constant  $\tau$  ?

## Options:

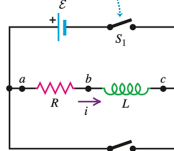
A. 220 $\mu\text{H}$

B. 390 $\mu\text{H}$

C. 750 $\mu\text{H}$

D. 280 $\mu\text{H}$

Closing switch  $S_1$  connects the R-L combination in series with a source of emf  $\mathcal{E}$ .



Closing switch  $S_2$  while opening switch  $S_1$  disconnects the combination from the source.

## GPT-4o:

The  $(R\text{-}L)$  time constant  $(\tau)$  is given by:

$$\tau = \frac{L}{R}.$$

The current in an  $(R\text{-}L)$  circuit grows according to:

$$i(t) = I_{\text{max}} \left( 1 - e^{-t/\tau} \right),$$

where  $I_{\text{max}} = 36\ \text{mA}$ ,  $i(t) = 4.9\ \text{mA}$ , and  $t = 58\ \mu\text{s}$ .

Rearranging for  $(\tau)$ :

$$e^{-t/\tau} = 1 - \frac{i(t)}{I_{\text{max}}}.$$

Substitute the values:

$$e^{-58 \times 10^{-6} / \tau} = 1 - \frac{4.9 \times 10^{-3}}{36 \times 10^{-3}} = 1 - 0.1361 = 0.8639.$$

Take the natural logarithm:

$$-\frac{58 \times 10^{-6}}{\tau} = \ln(0.8639).$$

$$\tau = -\frac{58 \times 10^{-6}}{\ln(0.8639)}.$$

$$\ln(0.8639) \approx -0.146.$$

$$\tau = \frac{58 \times 10^{-6}}{0.146} \approx 397 \times 10^{-6}\ \text{s}.$$

Now, calculate  $(L)$ :

$$L = \tau R = (397 \times 10^{-6})(175) \approx 69.5 \times 10^{-3}\ \text{H} = 390\ \mu\text{H}.$$

Correct option: **B**

**Reasoning Type: Multi-Formula Reasoning , Numerical Reasoning**

**Ground Truth: B . 390 $\mu\text{H}$**

Figure 7: A sample correct case of Electromagnetism.

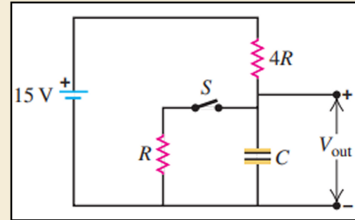
[Back to List of Figures](#) | [Back to Table Index](#)

# Electromagnetism



## Description:

In the circuit, the switch  $S$  has been open for a long time and is suddenly closed. Neither the battery nor the inductors have any appreciable resistance.



## Question:

What does the voltmeter read 0.115 ms after  $S$  is closed?

## GPT-4o:

To solve this problem, we need to analyze the circuit and determine the voltage across the voltmeter  $V$  0.115 ms after the switch  $S$  is closed. Here's the step-by-step reasoning:

---

### Step 1: Understand the circuit

- The circuit consists of a 20.0 V battery, resistors, and inductors.
- The switch  $S$  has been open for a long time, so initially, no current flows through the circuit.
- When  $S$  is closed, current starts flowing, and the inductors oppose the change in current due to their inductance.

---

Step 2: Inductors' behavior

...

Step 3: Equivalent inductance of the parallel inductors

...

Step 4: Time constant of the RL circuit

...

Step 5: Current in the circuit as a function of time

...

Step 6: Voltage across the parallel inductors

...

Now calculate  $V$ :

$$V = L \frac{dI}{dt}$$

Substitute  $L = 4.87 \text{ mH} = 4.87 \times 10^{-3} \text{ H}$  and  $\frac{dI}{dt} = 699 \text{ A/s}$ :

$$V = 4.87 \times 10^{-3} \cdot 699 \approx 3.41 \text{ V}$$

---

Final Answer:

The voltmeter reads approximately **3.41 V** 0.115 ms after the switch is closed.

**Reasoning Type:** Physical Model Grounding Reasoning , Numerical Reasoning

**Error Type:** Visual Reasoning Error

**Ground Truth:** 9.0 V

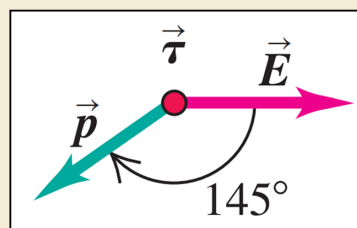
Figure 8: A sample error case of Electromagnetism. Error category: Visual Reasoning Error  
[Back to List of Figures](#) | [Back to Table Index](#)

## Electromagnetism



### Description:

Figure shows an electric dipole in a uniform electric field of magnitude  $5.0 \times 10^5 \text{ N/C}$  that is directed parallel to the plane of the figure. The charges are  $\pm 1.6 \times 10^{-19} \text{ C}$ ; both lie in the plane and are separated by  $0.125 \times 10^{-9} \text{ m}$ .



### Question:

Find the magnitude of the torque.

### GPT-4o:

To calculate the torque ( $\tau$ ) acting on the electric dipole in the uniform electric field, we use the formula:  $\tau = pE \sin \theta$

where:

- ( $p$ ) is the dipole moment,
- ( $E$ ) is the magnitude of the electric field,
- ( $\theta$ ) is the angle between the dipole moment ( $\vec{p}$ ) and the electric field ( $\vec{E}$ ).

Step 1: Calculate the dipole moment ( $p$ )

The dipole moment is given by:

$$p = qd$$

where:

- ( $q = 1.6 \times 10^{-19} \text{ C}$ ) is the charge,
- ( $d = 0.125 \times 10^{-9} \text{ m}$ ) is the separation between the charges.

Substitute the values:

$$p = (1.6 \times 10^{-19})(0.125 \times 10^{-9}) = 2.0 \times 10^{-20} \text{ C}\cdot\text{m}$$

Step 2: Use the torque formula

...

Final Answer:

The magnitude of the torque is:

$$\tau \approx 5.7 \times 10^{-15} \text{ N}\cdot\text{m}$$

**Reasoning Type:** Physical Model Grounding Reasoning , Spatial Relation Reasoning

**Error Type:** Text Reasoning Errors

**Ground Truth:**  $5.7 \times 10^{-24} \text{ N}\cdot\text{m}$

Figure 9: A sample error case of Electromagnetism. Error category: Text Reasoning Error

[Back to List of Figures](#) | [Back to Table Index](#)

# Electromagnetism

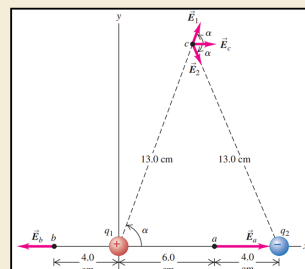


## Description:

Point charges  $q_1 = +12 \text{ nC}$  and  $q_2 = -12 \text{ nC}$  are  $0.100 \text{ m}$  apart. (Such pairs of point charges with equal magnitude and opposite sign are called electric dipoles.

## Question:

Compute the total field at point  $c$ .



## GPT-4o:

To compute the total electric field at point  $(c)$  due to the charges  $(q_1)$  and  $(q_2)$ , we will calculate the contributions of the electric fields from each charge and then combine them vectorially. Here's the step-by-step reasoning:

---

Step 1: Understand the setup

- $(q_1 = +12 \text{ nC})$  (positive charge).
- $(q_2 = -12 \text{ nC})$  (negative charge).
- Distance between  $(q_1)$  and  $(q_2)$ :  $(0.100 \text{ m})$ .
- Point  $(c)$  is equidistant from both charges, at a distance of  $(r = 0.130 \text{ m})$  from each charge.
- The electric field at  $(c)$  due to each charge is directed along the line joining the charge and point  $(c)$ .

---

Step 2: Electric field due to a point charge

The electric field due to a point charge is given by:

$$E = \frac{k|q|}{r^2},$$

where:

- $(k = 8.99 \times 10^9 \text{ N}\cdot\text{m}^2/\text{C}^2)$  (Coulomb's constant),
- $(q)$  is the magnitude of the charge,
- $(r)$  is the distance from the charge to the point where the field is being calculated.

---

Step 3: Calculate the magnitude of the electric field at  $(c)$  due to  $(q_1)$  and  $(q_2)$

...

Final Answer:

The total electric field at point  $(c)$  is:

$$\boxed{11.8 \text{ N/C}, \text{ upward along the vertical axis}}.$$

Reasoning Type: Physical Model Grounding Reasoning , Spatial Relation Reasoning

Error Type: Lack of Knowledge

Ground Truth:  $5.7 \times 10^{-24} \text{ N/C}$

Figure 10: A sample error case of Electromagnetism. Error category: Lack of Knowledge  
[Back to List of Figures](#) | [Back to Table Index](#)

# Thermodynamics

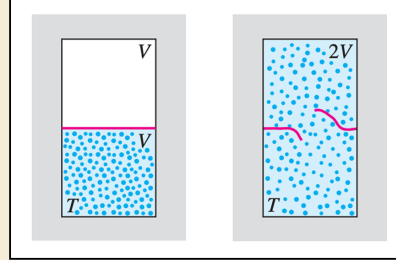


## Description:

A partition divides a thermally insulated box into two compartments, each of volume  $V$  (figure). Initially, one compartment contains  $n$  moles of an ideal gas at temperature  $T$ , and the other compartment is evacuated. We break the partition and the gas expands, filling both compartments.

## Question:

What is the entropy change in this free-expansion process?



## GPT-4o:

To calculate the root-mean-square (rms) speed  $v_{\text{rms}}$  of the molecules in the gas, we use the formula:  $v_{\text{rms}} = \sqrt{\frac{1}{N} \sum_{i=1}^N v_i^2}$  where:

- $N$  is the number of molecules,
- $v_i$  is the speed of the  $i$ -th molecule, and
- $v_i^2 = v_{ix}^2 + v_{iy}^2$ , where  $v_{ix}$  and  $v_{iy}$  are the  $x$ - and  $y$ -components of the velocity of the  $i$ -th molecule.

Step 1: Extract the velocity components for each molecule

From the diagram, the velocity components for each molecule are:

- Molecule 1:  $\vec{v}_1 = 10\hat{i} - 10\hat{j}$   $\Rightarrow v_{1x} = 10, v_{1y} = -10$
- Molecule 2:  $\vec{v}_2 = 2\hat{i} + 15\hat{j}$   $\Rightarrow v_{2x} = 2, v_{2y} = 15$
- .....
- Molecule 6:  $\vec{v}_6 = 0\hat{i} - 14\hat{j}$   $\Rightarrow v_{6x} = 0, v_{6y} = -14$

Step 2: Calculate the speed  $v_i$  for each molecule

The speed of each molecule is given by:  $v_i = \sqrt{v_{ix}^2 + v_{iy}^2}$

- Molecule 1:  $v_1 = \sqrt{10^2 + (-10)^2} = \sqrt{100 + 100} = \sqrt{200} = 10\sqrt{2}$
- Molecule 2:  $v_2 = \sqrt{2^2 + 15^2} = \sqrt{4 + 225} = \sqrt{229}$
- .....
- Molecule 6:  $v_6 = \sqrt{0^2 + (-14)^2} = \sqrt{0 + 196} = 14$

Step 3: Calculate  $v_i^2$  for each molecule

We now square the speeds:

- $v_1^2 = (10\sqrt{2})^2 = 200$
- $v_2^2 = (\sqrt{229})^2 = 229$
- .....
- $v_6^2 = 14^2 = 196$

Step 4: Calculate the mean of  $v_i^2$

The mean of  $v_i^2$  is:

$$\langle \text{Mean} \rangle = \frac{1}{N} \sum_{i=1}^N v_i^2 = \frac{1}{6} (200 + 229 + 100 + 104 + 61 + 196)$$

First, calculate the sum:  $200 + 229 + 100 + 104 + 61 + 196 = 890$

Now divide by  $N = 6$ :  $\langle \text{Mean} \rangle = \frac{890}{6} \approx 148.33$

Step 5: Calculate  $v_{\text{rms}}$

Finally, take the square root of the mean:

$$v_{\text{rms}} = \sqrt{148.33} \approx 12.18$$

Final Answer:

The rms speed is approximately:  $v_{\text{rms}} \approx 12.2$   $\text{m/s}$

**Reasoning Type: Physical Model Grounding Reasoning , Numerical Reasoning**

**Ground Truth: 12.2m/s**

Figure 11: A sample correct case of Thermodynamics.  
[Back to List of Figures](#) | [Back to Table Index](#)

# Thermodynamics



## Description:

Two piston/cylinder arrangements, A and B, have their gas chambers connected by a pipe, as shown in the figure. The cross-sectional areas of the pistons are  $A_A = 75 \text{ cm}^2$  and  $A_B = 25 \text{ cm}^2$ , with the piston mass in arrangement A being  $m_A = 25 \text{ kg}$ . Assume an outside pressure of  $100 \text{ kPa}$  and standard gravitational acceleration.

## Question:

Find the mass  $m_B$  such that none of the pistons rests on the bottom.

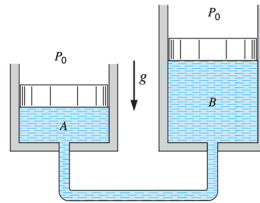
## Options:

A. 490kg

B. 8.33kg

C. 154kg

D. 10.2kg



## GPT-4o:

To solve this, we use the principle of pressure equilibrium. The pressure in both chambers must be equal since they are connected by a pipe.

Step 1: Pressure in chamber A

The pressure in chamber A is given by:

$$P_A = P_0 + \frac{m_A g}{A_A}$$

Substitute the values:

$$P_A = 100,000 + \frac{25 \cdot 9.81}{0.0075} = 100,000 + 32,700 = 132,700 \text{ Pa}$$

Step 2: Pressure in chamber B

The pressure in chamber B is given by:

$$P_B = P_0 + \frac{m_B g}{A_B}$$

Since  $(P_A = P_B)$ , we equate the two pressures:

$$132,700 = 100,000 + \frac{m_B \cdot 9.81}{0.0025}$$

Step 3: Solve for  $(m_B)$

Rearrange to isolate  $(m_B)$ :

$$\frac{m_B \cdot 9.81}{0.0025} = 32,700$$

$$m_B = \frac{32,700 \cdot 0.0025}{9.81} = 8.33 \text{ kg}$$

Final Answer: **B**

**Reasoning Type: Physical Model Grounding Reasoning , Multi-Formula Reasoning**

**Ground Truth: B . 8.33kg**

Figure 12: A sample correct case of Thermodynamics.  
[Back to List of Figures](#) | [Back to Table Index](#)

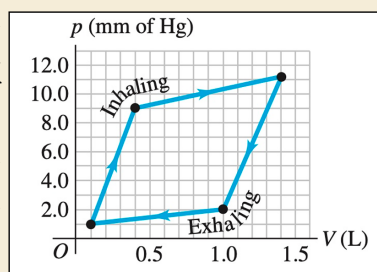


# Thermodynamics



## Description:

The graph in figure shows a PV-diagram of the air in a human lung when a person is inhaling and then exhaling a deep breath. Such graphs, obtained in clinical practice, are normally somewhat curved, but we have modeled one as a set of straight lines of the same general shape. (Important: The pressure shown is the gauge pressure, not the absolute pressure.) The process illustrated here is somewhat different from those we have been studying, because the pressure change is due to changes in the amount of gas in the lung, not to temperature changes.



## Question:

If the temperature of the air in the lung remains a reasonable 20°C, what is the maximum number of moles in this person's lung during a breath?

## GPT-4o:

To determine the maximum number of moles of air in the lung during a breath, we can use the ideal gas law:  $pV = nRT$

Where:

- $p$  is the pressure (in pascals, Pa),
- $V$  is the volume (in cubic meters,  $m^3$ ),
- $n$  is the number of moles,
- $R$  is the ideal gas constant ( $R = 8.314 \text{ J/mol}\cdot\text{K}$ ),
- $T$  is the temperature (in kelvins, K).

### Step 1: Identify the maximum pressure and volume

From the graph:

- The maximum gauge pressure is  $p_{\text{gauge}} = 12.0 \text{ mmHg}$ .
- The maximum volume is  $V = 1.5 \text{ L}$ .

Step 2: Convert pressure and volume to SI units

.....

Step 3: Convert temperature to kelvins

.....

Step 4: Solve for the number of moles

.....

### Final Answer:

The maximum number of moles of air in the lung during a breath is approximately:

$$\boxed{0.0634 \text{ mol}}$$

Reasoning Type: Physical Model Grounding Reasoning , Multi-Formula Reasoning

Error Type: Visual Reasoning Errors

Ground Truth: 0.059mol

Figure 13: A sample error case of Thermodynamics. Error category: Visual Reasoning Error  
[Back to List of Figures](#) | [Back to Table Index](#)

# Thermodynamics

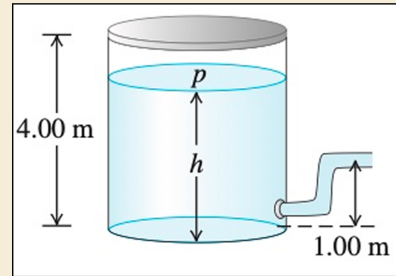


## Description:

A large tank of water has a hose connected to it. The tank is sealed at the top and has compressed air between the water surface and the top. When the water height  $h$  has the value 3.50 m, the absolute pressure  $p$  of the compressed air is  $4.20 \times 10^5$  Pa. Assume that the air above the water expands at constant temperature, and take the atmospheric pressure to be  $1.00 \times 10^5$  Pa.

## Question:

As water flows out of the tank,  $h$  decreases. At what value of  $h$  does the flow stop?



## GPT-4o:

To determine the value of  $h$  at which the flow stops, we need to analyze the system step by step. The flow stops when the pressure at the outlet of the tank equals the atmospheric pressure. Here's the reasoning:

Step 1: Understand the system

.....

Step 2: Pressure at the outlet

.....

Step 3: Relating the air pressure  $p$  to the water height  $h$

.....

**Step 4: Solve for  $h$  when the flow stops**

Substitute  $p = \frac{(4.20 \times 10^5)}{(0.50)(4.00 - h)}$  into the condition  $p + \rho g h = p_{\text{atm}}$ :

$$\frac{(4.20 \times 10^5)}{(0.50)(4.00 - h)} + (1000)(9.8) h = 1.00 \times 10^5$$

Simplify:

$$\frac{(2.10 \times 10^5)}{(4.00 - h)} + 9800 h = 1.00 \times 10^5$$

Rearrange:

$$\frac{(2.10 \times 10^5)}{(4.00 - h)} = 1.00 \times 10^5 - 9800 h$$

.....

Step 5: Solve the quadratic equation

.....

**Final Answer:**

The flow stops when  $h = 1.54$  m.

**Reasoning Type:** Multi-Formula Reasoning , Physical Model Grounding Reasoning

**Error Type:** Text Reasoning Errors

**Ground Truth:** 1.74m

Figure 14: A sample error case of Thermodynamics. Error category: Text Reasoning Error  
[Back to List of Figures](#) | [Back to Table Index](#)

# Thermodynamics

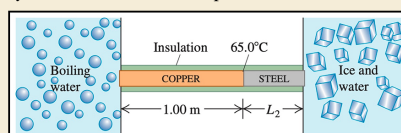


## Description:

A long rod, insulated to prevent heat loss along its sides, is in perfect thermal contact with boiling water (at atmospheric pressure) at one end and with an ice–water mixture at the other. The rod consists of a 1.00 m section of copper (one end in boiling water) joined end to end to a length  $L_2$  of steel (one end in the ice–water mixture). Both sections of the rod have cross-sectional areas of  $4.0 \text{ cm}^2$ . The temperature of the copper–steel junction is  $65.0^\circ\text{C}$  after a steady state has been set up.

## Question:

What is the length  $L_2$  of the steel section?



## GPT-4o:

To solve for the length  $(L_2)$  of the steel section, we use the concept of steady-state heat conduction. In steady-state conditions, the heat flow rate through the copper section is equal to the heat flow rate through the steel section. This is because no heat is lost along the sides of the rod, and the system is in thermal equilibrium.

...

Step 1: Write the heat flow rate for copper and steel

For the copper section:

$$\frac{Q}{t} = \frac{k_{\text{Cu}} A (T_{\text{boiling}} - T_{\text{junction}})}{L_{\text{Cu}}}$$

...

Step 2: Set the heat flow rates equal

...

Step 4: Substitute known values

- $k_{\text{Cu}} = 390 \text{ W/m}\cdot\text{K}$ ,
- $k_{\text{steel}} = 46 \text{ W/m}\cdot\text{K}$ ,
- $T_{\text{boiling}} = 100.0^\circ\text{C}$ ,
- $T_{\text{junction}} = 65.0^\circ\text{C}$ ,
- $T_{\text{ice}} = 0.0^\circ\text{C}$ ,
- $L_{\text{Cu}} = 1.00 \text{ m}$ .

Substitute these values into the equation:

...

Step 5: Perform the calculations

...

Final Answer:

The length of the steel section is:

$$\boxed{0.219 \text{ m}}$$

Reasoning Type: Physical Model Grounding Reasoning , Multi-Formula Reasoning

Error Type: Lack of Knowledge

Ground Truth:  $5.7 \times 10^{-24} \text{ N/C}$

Figure 15: A sample error case of Thermodynamics. Error category: Lack of Knowledge  
[Back to List of Figures](#) | [Back to Table Index](#)

## Wave/Acoustics

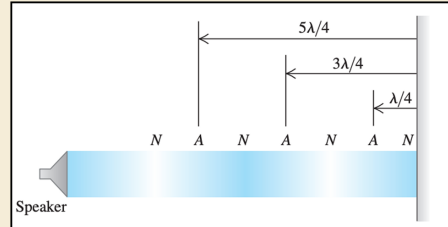


### Description:

A directional loudspeaker directs a sound wave of wavelength  $\lambda$  at a wall (figure)

### Question:

At what distances from the wall could you stand and hear no sound at all?



### GPT-4o:

To determine the distances from the wall where no sound is heard, we need to analyze the interference of the sound waves. Here's the step-by-step reasoning:

Step 1: Understand the setup

- A speaker emits sound waves toward a wall.
- The sound waves reflect off the wall and interfere with the incoming waves.
- At certain points, destructive interference occurs, resulting in no sound being heard.

Step 2: Condition for destructive interference

Destructive interference occurs when the path difference between the incident wave and the reflected wave is an odd multiple of half the wavelength ( $\lambda/2$ ):  $\text{Path difference} = (2m + 1) \frac{\lambda}{2}$ ,  $\text{quad } m = 0, 1, 2, \dots$

Here,  $m$  is an integer representing the order of the interference.

Step 3: Path difference in terms of distance from the wall

- Let the distance from the wall be  $d$ .
- The sound wave travels a distance  $d$  to the wall and another distance  $d$  back after reflection.
- The total path difference is  $2d$ .

For destructive interference:  $2d = (2m + 1) \frac{\lambda}{2}$

Step 4: Solve for  $d$

Rearranging the equation for  $d$ :  $d = \frac{(2m + 1) \lambda}{4}$ ,  $\text{quad } m = 0, 1, 2, \dots$

This gives the distances from the wall where destructive interference occurs.

Step 5: List the distances

For different values of  $m$ :

- $m = 0$ :  $d = \frac{\lambda}{4}$
- $m = 1$ :  $d = \frac{3\lambda}{4}$
- $m = 2$ :  $d = \frac{5\lambda}{4}$
- $m = 3$ :  $d = \frac{7\lambda}{4}$
- And so on...

Final Answer:

The distances from the wall where no sound is heard are:

$d = \frac{\lambda}{4}, \frac{3\lambda}{4}, \frac{5\lambda}{4}, \frac{7\lambda}{4}, \dots$

**Reasoning Type: Physical Model Grounding Reasoning , Spatial Relation Reasoning**

**Ground Truth:  $\lambda/4, 3\lambda/4, 5\lambda/4$**

Figure 16: A sample correct case of Wave/Acoustics.

[Back to List of Figures](#) | [Back to Table Index](#)

Wave/Acoustics

**Description:**  
 Small speakers A and B are driven in phase at 725Hz by the same audio oscillator. Both speakers start out 4.50m from the listener, but speaker A is slowly moved away.

**Question:**  
 At what distance d will the sound from the speakers first produce destructive interference at the listener's location?

**Options:**  
 A. 0.237m                      B. 0.336m                      C. 0.569m                      D. 0.414m

**GPT-4o:**  
 To determine the distance  $(d)$  at which destructive interference first occurs, we use the condition for destructive interference:  

$$\Delta L = \frac{\lambda}{2}$$
 where  $(\Delta L)$  is the path difference between the two speakers, and  $(\lambda)$  is the wavelength of the sound.  
  
 Step 1: Calculate the wavelength  $(\lambda)$   
 The speed of sound in air is approximately  $(v = 343 \text{ m/s})$ , and the frequency of the sound is  $(f = 725 \text{ Hz})$ . The wavelength is given by:  

$$\lambda = \frac{v}{f} = \frac{343}{725} \approx 0.473 \text{ m}$$
  
  
 Step 2: Path difference for destructive interference  
 For the first instance of destructive interference, the path difference  $(\Delta L)$  is:  

$$\Delta L = \frac{\lambda}{2} = \frac{0.473}{2} \approx 0.237 \text{ m}$$
  
  
 Step 3: Relating  $(\Delta L)$  to  $(d)$   
 The path difference  $(\Delta L)$  is caused by moving speaker  $(A)$  a distance  $(d)$  farther from the listener. Thus:  $(\Delta L = d)$   
 So:  $(d = 0.237 \text{ m})$   
  
 Final Answer: **A**

Reasoning Type: Physical Model Grounding Reasoning , Spatial Relation Reasoning

Ground Truth: A. 0.237m

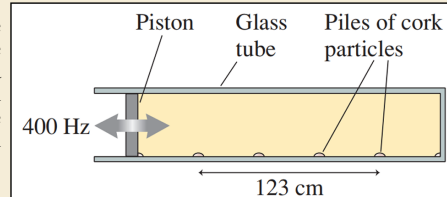
Figure 17: A sample correct case of Wave/Acoustics.  
[Back to List of Figures](#) | [Back to Table Index](#)

## Wave/Acoustics



### Description:

Very finely ground particles of cork are sprinkled in the bottom of the tube before the piston is inserted. As the vibrating piston is slowly moved forward, there are a few positions that cause the cork particles to collect in small, regularly spaced piles along the bottom. Figure shows an experiment in which the tube is filled with pure oxygen and the piston is driven at 400 Hz.



### Question:

What is the speed of sound in oxygen?

### GPT-4o:

To determine the speed of sound in oxygen using the given setup, we will analyze the standing wave pattern formed in the Kundt's tube. Here's the step-by-step reasoning:

Step 1: Understand the standing wave pattern

.....

Step 2: Relationship between the wavelength and the distance between nodes

.....

Step 3: Determine the wavelength

- From the diagram, the total length of the tube is  $(123 \text{ cm}) = 1.23 \text{ m}$ .

- The cork particles form regularly spaced piles, indicating the positions of the nodes.

- Count the number of node-to-node segments in the tube. From the diagram, there are 5 segments.

- The total length of the tube corresponds to 5 half-wavelengths:

$$5 \cdot \frac{\lambda}{2} = 1.23 \text{ m}$$

- Solve for  $(\lambda)$  (the wavelength):

$$\lambda = \frac{2 \cdot 1.23}{5} = 0.492 \text{ m}$$

Step 4: Use the wave equation to find the speed of sound

.....

### Final Answer:

The speed of sound in oxygen is approximately:

$$\boxed{196.8 \text{ m/s}}$$

Reasoning Type: Physical Model Grounding Reasoning , Multi-Formula Reasoning

Error Type: Visual Reasoning Errors

Ground Truth: 1.2 m/s

Figure 18: A sample error case of Wave/Acoustics. Error category: Visual Reasoning Error  
[Back to List of Figures](#) | [Back to Table Index](#)

## Wave/Acoustics

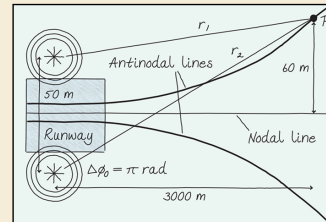


### Description:

Your team is designing a landing aid for pilots in rain or fog by placing two radio transmitters 50 m apart on either side of a runway. These transmitters emit the same frequency but are out of phase, creating a nodal line down the runway center. The pilot hears nothing when aligned, but hears a beep if off-center. For accurate guidance, the first intensity maxima should appear 60 m from the nodal line at a distance of 3.0 km.

### Question:

What frequency should you specify for the transmitters?



### GPT-4o:

To determine the frequency of the transmitters, we need to analyze the interference pattern created by the two sources. The goal is to ensure that the first antinodal line (intensity maxima) is  $60 \text{ m}$  away from the nodal line at a distance of  $3.0 \text{ km}$  from the transmitters.

#### Step 1: Geometry of the problem

The two transmitters are separated by a distance  $d = 50 \text{ m}$ . The nodal line is the line of destructive interference, where the path difference between the two sources is  $\Delta r = (m + \frac{1}{2})\lambda$ , with  $m = 0, 1, 2, \dots$ . The first antinodal line corresponds to constructive interference, where the path difference is  $\Delta r = m\lambda$ , with  $m = 1$ .

At a distance  $L = 3000 \text{ m}$  from the transmitters, the first antinodal line is  $y = 60 \text{ m}$  away from the nodal line. This forms a right triangle with the base  $(L)$  and height  $(y)$ .

#### Step 2: Path difference for the first antinodal line

...

#### Step 3: Wavelength of the radio waves

For the first antinodal line, the path difference  $\Delta r$  corresponds to one wavelength:

$$\Delta r = \lambda$$

$$\lambda = 1.0 \text{ m}$$

#### Step 4: Frequency of the radio waves

The frequency  $f$  of the radio waves is related to the wavelength  $\lambda$  and the speed of light  $c$  by:  $f = \frac{c}{\lambda}$ .

Using  $c = 3.0 \times 10^8 \text{ m/s}$  and  $\lambda = 1.0 \text{ m}$ :

$$f = \frac{3.0 \times 10^8}{1.0} = 3.0 \times 10^8 \text{ Hz}$$

#### Final Answer:

The frequency of the transmitters should be:  $\boxed{300 \text{ MHz}}$

**Reasoning Type: Spatial Relation Reasoning , Multi-Formula Reasoning**

**Error Type: Text Reasoning Errors**

**Ground Truth: 150 MHz**

Figure 19: A sample error case of Wave/Acoustics. Error category: Text Reasoning Error  
[Back to List of Figures](#) | [Back to Table Index](#)



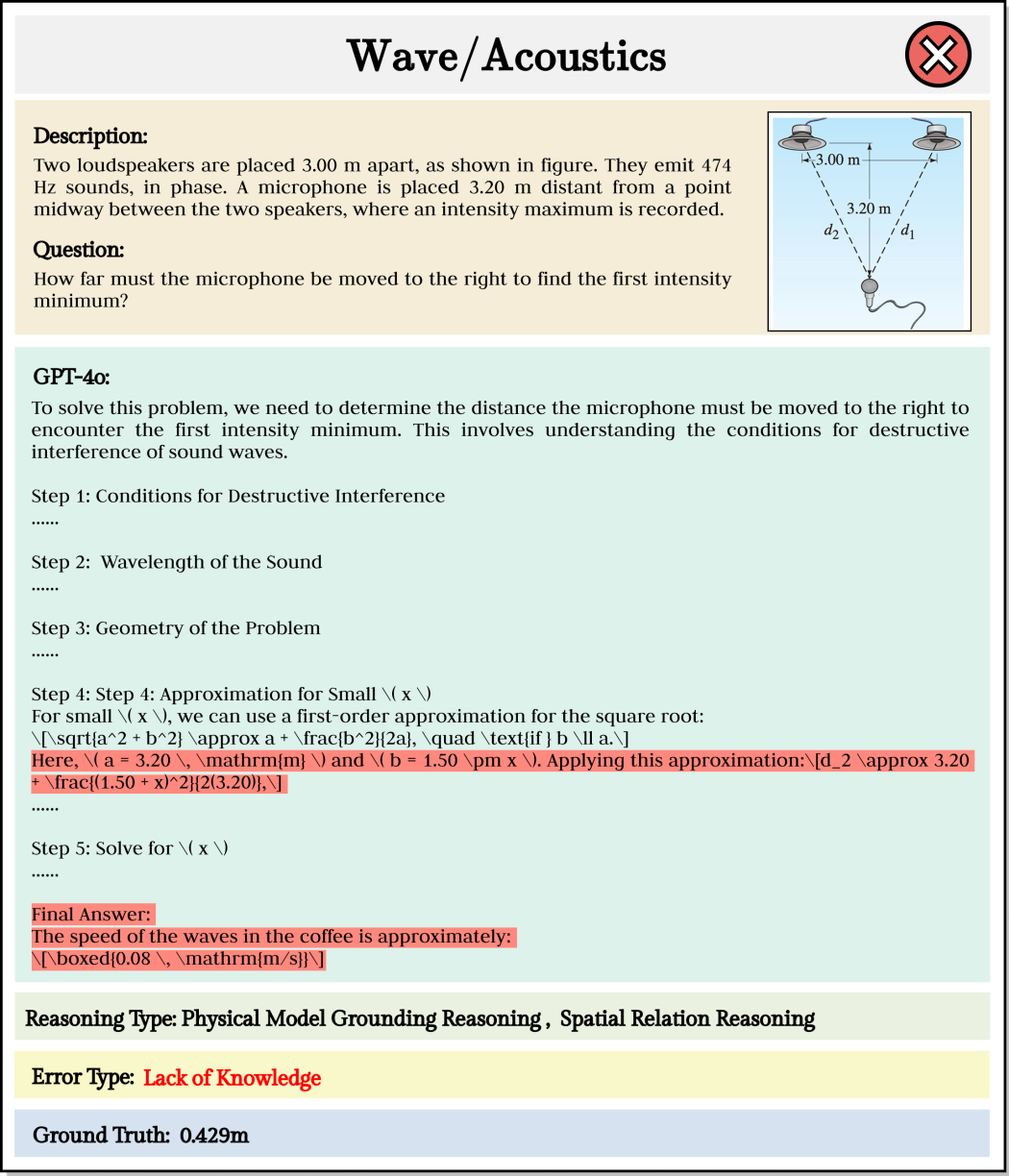


Figure 20: A sample error case of Wave/Acoustics. Error category: Lack of Knowledge  
[Back to List of Figures](#) | [Back to Table Index](#)

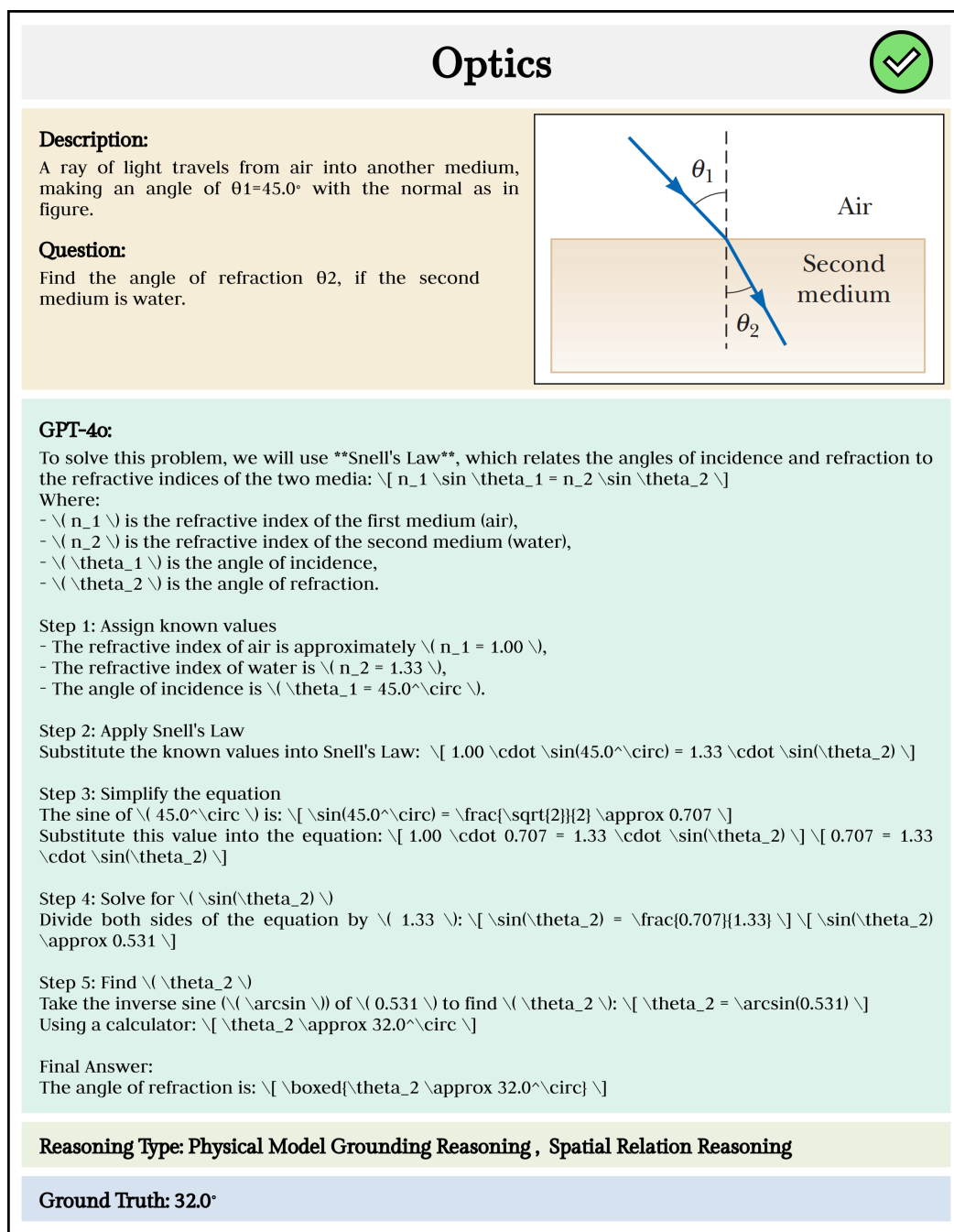


Figure 21: A sample correct case of Optics.  
[Back to List of Figures](#) | [Back to Table Index](#)

Optics

Description:

Assume a transparent rod with diameter  $d=2.00\text{ }\mu\text{m}$  and an index of refraction of 1.36.

Question:

Determine the maximum angle  $\theta$  at which light rays can be incident on the end of the rod (as shown in the figure) such that they undergo total internal reflection along the walls of the rod.

Options:

A.  $72.2^\circ$

B.  $65.4^\circ$

C.  $67.2^\circ$

D.  $60.0^\circ$

GPT-4o:

To determine the maximum angle  $\theta$ , we use the concept of total internal reflection. The critical angle  $\theta_c$  is given by:  $\sin \theta_c = \frac{n_2}{n_1}$  where  $n_1 = 1.36$  (index of refraction of the rod) and  $n_2 = 1.00$  (index of refraction of air).

Solving for  $\theta_c$ :

$$\sin \theta_c = \frac{1.00}{1.36} \implies \theta_c = \arcsin\left(\frac{1.00}{1.36}\right) \approx 47.8^\circ$$

The maximum angle  $\theta$  for total internal reflection is related to the critical angle by:

$$\theta = 90^\circ - \theta_c$$

Substituting  $\theta_c = 47.8^\circ$ :

$$\theta = 90^\circ - 47.8^\circ = 42.2^\circ$$

However, this is the angle relative to the normal. For the angle relative to the axis of the rod, we use:

$$\theta = 90^\circ - 42.2^\circ = 67.2^\circ$$

Thus, the correct answer is: C

Reasoning Type: Physical Model Grounding Reasoning , Spatial Relation Reasoning

Ground Truth: C . 67.2°

Figure 22: A sample correct case of Optics.  
[Back to List of Figures](#) | [Back to Table Index](#)

## Optics

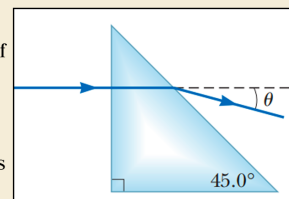


### Description:

When the light ray illustrated in figure passes through the glass block of index of refraction  $n = 1.50$ , it is shifted laterally by the distance  $d$ ."

### Question:

Find the time interval required for the light to pass through the glass block.



### GPT-4o:

To solve this problem, we will use Snell's Law and the geometry of the prism. The steps are as follows:

Step 1: Understand the geometry of the prism and the light path

.....

Step 2: Relate the angles inside the prism

- Inside the prism, the beam travels at an angle of  $(45^\circ - r)$  with respect to the normal to the hypotenuse. This is because the prism is isosceles, and the beam enters perpendicular to one leg.
- At the hypotenuse, the beam refracts and exits the prism. Let the angle of refraction (outside the prism) be  $r$ , measured with respect to the normal to the hypotenuse.

From the geometry of the problem:

$$\theta = 45^\circ - r$$

Substitute  $\theta = 15.0^\circ$ :

$$15.0^\circ = 45^\circ - r$$

$$r = 30.0^\circ$$

Step 3: Apply Snell's Law at the hypotenuse

.....

Step 4: Solve for  $n$

.....

Final Answer:

The index of refraction of the prism is:

$$\boxed{1.414}$$

Reasoning Type: Physical Model Grounding Reasoning , Spatial Relation Reasoning

Error Type: Visual Reasoning Errors

Ground Truth: 1.2m/s

Figure 23: A sample error case of Optics. Error category: Visual Reasoning Error  
[Back to List of Figures](#) | [Back to Table Index](#)

Optics

Description:

When the light ray illustrated in figure passes through the glass block of index of refraction  $n = 1.50$ , it is shifted laterally by the distance  $d$ .

Question:

Find the time interval required for the light to pass through the glass block.

GPT-4o:

To find the time interval required for the light to pass through the glass block, we need to calculate the time it takes for the light to travel the distance it covers inside the block. Here's the step-by-step reasoning:

Step 1: Understand the problem  
.....

Step 2: Speed of light in the glass  
.....

Step 3: Distance traveled by the light in the glass  
The light ray travels diagonally through the glass block. The thickness of the block is  $(2.00 \text{ cm}) = 0.0200 \text{ m}$ , and the light travels at an angle of  $(30^\circ)$  with respect to the normal.  
The actual distance  $(L)$  traveled by the light inside the block is the hypotenuse of a right triangle, where the thickness of the block is the adjacent side. Using trigonometry:  

$$L = \frac{\text{thickness}}{\cos(30^\circ)}$$
Substitute the values:  

$$L = \frac{0.0200}{\cos(30^\circ)}$$
...

Step 4: Time taken to travel through the glass  
.....

Final Answer:  
The time interval required for the light to pass through the glass block is approximately:  
 $t \approx 1.16 \times 10^{-10} \text{ s}$

Reasoning Type: Physical Model Grounding Reasoning , Spatial Relation Reasoning

Error Type: Text Reasoning Error

Ground Truth: 106ps

Figure 24: A sample error case of Optics. Error category: Text Reasoning Error  
[Back to List of Figures](#) | [Back to Table Index](#)

51

Optics

Description:

A narrow beam of ultrasonic waves reflects off the liver tumor illustrated in figure. The speed of the wave is 10.0% less in the liver than in the surrounding medium.

Question:

Determine the depth of the tumor.

GPT-4o:

To determine the depth of the tumor, we will use the information provided in the diagram and the relationship between the speed of the ultrasonic wave in the liver and the surrounding medium. Here's the step-by-step reasoning:

Step 1: Understand the geometry of the problem

.....

Step 2: Relate the geometry to the depth

The wave travels in a triangular path. The horizontal distance between the entry and exit points is  $12.0 \text{ cm}$ , and the wave reflects symmetrically. This means the horizontal distance from the entry point to the reflection point is  $6.0 \text{ cm}$ .

Using trigonometry, the depth  $d$  of the tumor can be related to the horizontal distance and the angle of incidence:  $\tan(50.0^\circ) = \frac{d}{6.0 \text{ cm}}$

Rearranging for  $d$ :  $d = 6.0 \text{ cm} \cdot \tan(50.0^\circ)$

Step 3: Step 3: Calculate  $d$

.....

Step 4: Adjust for the speed difference

.....

Final Answer:

The depth of the tumor is approximately:

$\boxed{7.94 \text{ cm}}$

Reasoning Type: Spatial Relation Reasoning , Physical Model Grounding Reasoning

Error Type: Lack of Knowledge

Ground Truth: 6.30cm

Figure 25: A sample error case of Optics. Error category: Lack of Knowledge  
[Back to List of Figures](#) | [Back to Table Index](#)

52

# Modern Physics

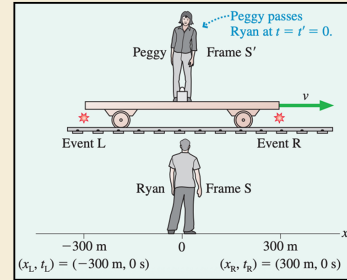


## Description:

Peggy is standing in the center of a long, flat railroad car that has firecrackers tied to both ends. The car moves past Ryan, who is standing on the ground, with velocity  $v = 0.8c$ . Flashes from the exploding firecrackers reach him simultaneously  $1.0\mu\text{s}$  after the instant that Peggy passes him, and he later finds burn marks on the track 300 m to either side of where he had been standing.

## Question:

According to Peggy, what times do the explosions occur relative to the time that Ryan passes her?



## GPT-4o:

To solve this problem, we will use the principles of special relativity, specifically the Lorentz transformation equations, to determine the times of the explosions in Peggy's frame ( $S'$ ) relative to the time that Ryan passes her ( $t' = 0$ ).

Step 1: Understand the problem and given data

Ryan's frame ( $S$ ):

- The firecrackers explode at  $x_L = -300\text{ m}$  and  $x_R = 300\text{ m}$ , both at  $t = 0$ .
- The flashes from the explosions reach Ryan simultaneously at  $t = 1.0\mu\text{s}$ .
- The velocity of Peggy's frame ( $S'$ ) relative to Ryan's frame ( $S$ ) is  $v = 0.8c$ .

Peggy's frame ( $S'$ ):

- Peggy is at rest in her frame, and the firecrackers are tied to the ends of the railroad car.
- We need to find the times of the explosions ( $t'_L$  and  $t'_R$ ) in Peggy's frame.

Step 2: Lorentz transformation equations

The Lorentz transformation equations relate the coordinates  $(x, t)$  in Ryan's frame ( $S$ ) to the coordinates  $(x', t')$  in Peggy's frame ( $S'$ ):  $t' = \gamma \left( t - \frac{vx}{c^2} \right)$ ,  $x' = \gamma (x - vt)$ , where:  $\gamma = \frac{1}{\sqrt{1 - v^2/c^2}}$ .

For  $v = 0.8c$ , we calculate:  $\gamma = \frac{1}{\sqrt{1 - (0.8)^2}} = \frac{1}{\sqrt{1 - 0.64}} = \frac{1}{\sqrt{0.36}} = \frac{5}{3}$ .

Step 3: Apply the Lorentz transformation for each event

Event L (explosion at  $x_L = -300\text{ m}$ ,  $t_L = 0$ ):

Using the Lorentz transformation for time:  $t'_L = \gamma \left( t_L - \frac{v x_L}{c^2} \right)$ .

Substitute the values:  $t'_L = \frac{5}{3} \left( 0 - \frac{(0.8c)(-300\text{ m})}{c^2} \right)$ .

Simplify:  $t'_L = \frac{5}{3} \left( \frac{240\text{ m}}{c} \right)$ .

Since  $c = 3 \times 10^8\text{ m/s}$ , we calculate:  $t'_L = \frac{5}{3} \cdot \frac{240}{3 \times 10^8} = \frac{5}{3} \cdot \frac{1200}{3 \times 10^8} = \frac{5}{3} \cdot \frac{4}{10^6} = \frac{20}{3} \times 10^{-6}\text{ s} = 1.33\mu\text{s}$ .

Event R (explosion at  $x_R = 300\text{ m}$ ,  $t_R = 0$ ):

Using the Lorentz transformation for time:  $t'_R = \gamma \left( t_R - \frac{v x_R}{c^2} \right)$ .

Substitute the values:  $t'_R = \frac{5}{3} \left( 0 - \frac{(0.8c)(300\text{ m})}{c^2} \right)$ .

Simplify:  $t'_R = \frac{5}{3} \left( -\frac{240\text{ m}}{c} \right)$ .  $t'_R = -\frac{5}{3} \cdot \frac{240}{3 \times 10^8} = -\frac{5}{3} \cdot \frac{1200}{3 \times 10^8} = -\frac{5}{3} \cdot \frac{4}{10^6}\text{ s} = -1.33\mu\text{s}$ .

Step 4: Interpret the results

- In Peggy's frame ( $S'$ ):

- The explosion at  $x'_L$  (left firecracker) occurs at  $t'_L = 1.33\mu\text{s}$ .
- The explosion at  $x'_R$  (right firecracker) occurs at  $t'_R = -1.33\mu\text{s}$ .

This means that, according to Peggy, the right firecracker explodes before Ryan passes her, and the left firecracker explodes after Ryan passes her.

**Reasoning Type: Physical Model Grounding Reasoning , Spatial Relation Reasoning**


**Ground Truth:  $-1.33\mu\text{s}$**

Figure 26: A sample correct case of Modern Physics.

[Back to List of Figures](#) | [Back to Table Index](#)



# Modern Physics



**Description:**

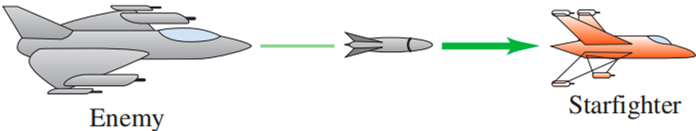
An enemy spaceship is moving toward your starfighter with a speed, as measured in your frame, of  $0.400c$ . The enemy ship fires a missile toward you at a speed of  $0.700c$  relative to the enemy ship. You measure that the enemy ship is  $8.00 \times 10^6$  km away from you when the missile is fired.

**Question:**

If you measure that the enemy ship is  $8.00 \times 10^6$  km away from you when the missile is fired, how much time, measured in your frame, will it take the missile to reach you?

**Options:**

A. 31.0s                      B. 30.4s                      C. 33.1s                      D. 32.8s



**GPT-4o:**

To solve this, we use the relativistic velocity addition formula to find the speed of the missile relative to the starfighter:

$$v_{\text{missile/starfighter}} = \frac{v_{\text{missile/enemy}} + v_{\text{enemy/starfighter}}}{1 + \frac{v_{\text{missile/enemy}} v_{\text{enemy/starfighter}}}{c^2}}$$

Substitute the given values:

$$v_{\text{missile/enemy}} = 0.700c, \quad v_{\text{enemy/starfighter}} = 0.400c$$

$$v_{\text{missile/starfighter}} = \frac{0.700c + 0.400c}{1 + \frac{(0.700c)(0.400c)}{c^2}}$$

$$v_{\text{missile/starfighter}} = \frac{1.100c}{1 + 0.280} = \frac{1.100c}{1.280} \approx 0.859c$$

Now, calculate the time it takes for the missile to travel the distance of  $(8.00 \times 10^6 \text{ km})$  (or  $(8.00 \times 10^9 \text{ m})$ ) at this speed:

$$t = \frac{\text{distance}}{\text{speed}} = \frac{8.00 \times 10^9 \text{ m}}{0.859c}$$

Substitute  $(c = 3.00 \times 10^8 \text{ m/s})$ :

$$t = \frac{8.00 \times 10^9}{0.859 \times 3.00 \times 10^8} \approx \frac{8.00}{0.859 \times 3.00} \times 10^1$$

$$t \approx \frac{8.00}{2.577} \times 10^1 \approx 3.10 \times 10^1 \text{ s} = 31.0 \text{ s}$$

The correct answer is: **A**

**Reasoning Type: Physical Model Grounding Reasoning , Multi-Formula Reasoning**

**Ground Truth: A . 31.0s**

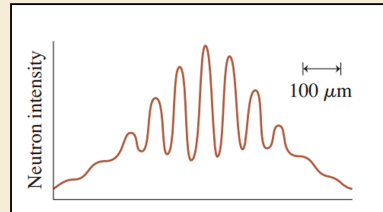
Figure 27: A sample correct case of Modern Physics.  
[Back to List of Figures](#) | [Back to Table Index](#)

# ModernPhysics



## Description:

An experiment was performed in which neutrons were shot through two slits spaced 0.10 nm apart and detected 3.5m behind the slits. Figure shows the detector output.



## Question:

To one significant figure, what was the speed of the neutrons?

## GPT-4o:

To determine the speed of the neutrons, we can use the principles of wave interference and de Broglie's hypothesis. Here's the step-by-step reasoning:

### Step 1: Understand the setup

The experiment involves neutrons passing through two slits spaced  $(d = 0.10 \text{ nm} = 1.0 \times 10^{-10} \text{ m})$  apart. The interference pattern is detected on a screen located  $(L = 3.5 \text{ m})$  behind the slits. The distance between adjacent maxima in the interference pattern is  $(\Delta y = 100 \mu\text{m} = 1.0 \times 10^{-4} \text{ m})$ .

### Step 2: Use the double-slit interference formula

The position of the maxima in a double-slit interference pattern is given by:

$$y_m = m \frac{\lambda L}{d},$$

...

### Step 3: Relate the wavelength to the speed of the neutrons

Using de Broglie's hypothesis, the wavelength of a particle is related to its momentum by:

$$\lambda = \frac{h}{p},$$

where:

- $(h = 6.63 \times 10^{-34} \text{ J}\cdot\text{s})$  is Planck's constant,
- $(p = mv)$  is the momentum of the neutron,
- $(m = 1.675 \times 10^{-27} \text{ kg})$  is the mass of a neutron,
- $(v)$  is the speed of the neutron.

Rearranging for  $(v)$ :

$$v = \frac{h}{m \lambda}.$$

Substitute the known values:

$$v = \frac{6.63 \times 10^{-34} \text{ J}\cdot\text{s}}{(1.675 \times 10^{-27} \text{ kg}) \cdot (2.86 \times 10^{-15} \text{ m})}.$$

$$v = 1.38 \times 10^3 \text{ m/s}.$$

### Step 4: Round to one significant figure

To one significant figure, the speed of the neutrons is:

$$v \approx 1 \times 10^3 \text{ m/s}.$$

Final Answer:

The speed of the neutrons is approximately  $(1 \times 10^3 \text{ m/s})$ .

**Reasoning Type: Physical Model Grounding Reasoning , Multi-Formula Reasoning**

**Error Type: Visual Reasoning Error**

**Ground Truth: 200m/S**

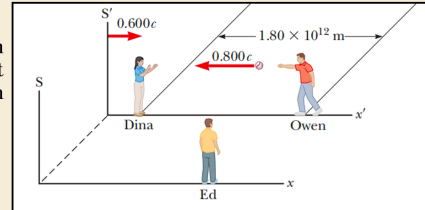
Figure 28: A sample error case of Modern Physics. Error category: Visual Reasoning Error  
[Back to List of Figures](#) | [Back to Table Index](#)

# ModernPhysics



## Description:

Owen and Dina are at rest in frame  $S$ , which is moving with respect to frame  $S'$ . They play a game of catch while Ed, at rest in frame  $S'$ , watches the action as shown in figure. Owen throws the ball to Dina.



## Question:

What time interval is required for the ball to reach Dina?

## GPT-4o:

To determine the time interval required for the ball to reach Dina, we need to analyze the situation using the principles of special relativity. Here's the step-by-step reasoning:

Step 1: Understand the problem and given data\*\*

- Frames of reference:\*\*
- Frame  $(S')$ : The rest frame of Owen and Dina.
- Frame  $(S)$ : The rest frame of Ed.

Given data:\*\*

- The relative velocity of frame  $(S')$  with respect to frame  $(S)$ :  $(v = 0.600c)$ .
- The velocity of the ball relative to  $(S')$ :  $(u' = 0.800c)$  (from Owen to Dina).
- The distance between Owen and Dina in  $(S')$ :  $(d' = 1.80 \times 10^{12} \text{ m})$ .

We are tasked with finding the time interval for the ball to reach Dina \*\*as observed in frame  $(S)$ \*\*.

Step 2: Relate the velocity of the ball in  $(S)$  to the velocity in  $(S')$ \*\*

The velocity of the ball in frame  $(S)$  ( $u$ ) can be calculated using the relativistic velocity addition formula:

$$u = \frac{u' + v}{1 + \frac{u'v}{c^2}}$$

Substitute the given values:

$$u = \frac{0.800c + 0.600c}{1 + \frac{(0.800c)(0.600c)}{c^2}}$$

$$u = \frac{1.400c}{1 + 0.48} = \frac{1.400c}{1.48}$$

$$u = \frac{0.800c + 0.600c}{1 + \frac{(0.800c)(0.600c)}{c^2}}$$

...

Step 3: Calculate the time interval in frame  $(S)$

...

Final Answer:

The time interval required for the ball to reach Dina, as observed in frame  $(S)$ , is approximately:

$$\boxed{6.34 \text{ s}}$$

Reasoning Type: Physical Model Grounding Reasoning , Multi-Formula Reasoning

Error Type: Text Reasoning Errors

Ground Truth:  $4.88 \times 10^{-3} \text{ s}$

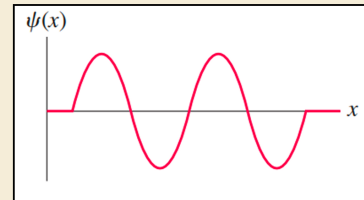
Figure 29: A sample error case of Modern Physics. Error category: Text Reasoning Error  
[Back to List of Figures](#) | [Back to Table Index](#)

## ModernPhysics



### Description:

Figure shows the wave function of an electron in a rigid box. The electron energy is 6.0eV.



### Question:

How long is the box?

### GPT-4o:

To determine the length of the box, we will use the quantum mechanical model of a particle in a rigid box. The energy levels of an electron in a rigid box are given by:

$$E_n = \frac{n^2 h^2}{8mL^2}$$

where:

- $E_n$  is the energy of the electron in the  $n$ -th energy level,
- $n$  is the quantum number (a positive integer),
- $h$  is Planck's constant ( $h = 6.626 \times 10^{-34} \text{ J}\cdot\text{s}$ ),
- $m$  is the mass of the electron ( $m = 9.109 \times 10^{-31} \text{ kg}$ ),
- $L$  is the length of the box.

Step 1: Identify the quantum number  $n$

...

Step 4: Convert to nanometers

$$L = 7.52 \times 10^{-10} \text{ m} = 0.752 \text{ nm}$$

Final Answer:

The length of the box is approximately:

$$\boxed{0.752 \text{ nm}}$$

**Reasoning Type:** Physical Model Grounding Reasoning , Spatial Relation Reasoning

**Error Type:** Lack of Knowledge

**Ground Truth:** 1 nm

Figure 30: A sample error case of Modern Physics. Error category: Lack of Knowledge  
[Back to List of Figures](#) | [Back to Table Index](#)

## F Data Annotation Protocol

This document outlines a detailed procedure for annotating a dataset of physics questions that include visual context.

### F.1 Data Collection

**Sources of Data.** Data is collected from freely accessible online resources, textbooks, and other materials. Annotators are instructed to use a wide range of sources rather than relying on just one.

#### Types of Questions:

- **Multiple-Choice Questions:** These consist of a question accompanied by four answer options, with only one being correct. For each multiple-choice question, annotators are also required to create a corresponding open-ended version of the same problem.
- **Open-Ended Questions:** These include formats such as short-answer and calculation-based problems. Questions with excessively lengthy answers should be avoided. For each open-ended question, a corresponding multiple-choice version should also be constructed.

**Image Types.** The annotators should find images with realistic physical scenarios.

### F.2 General Guidelines

- **General Principles:** Annotations should be accurate, uniform, and maintain a high level of academic quality.
- **Specific Instructions:**
  - All questions should be written in English.
  - All questions must contain one physical images.
  - All images in question should be realistic, in specific physical scenarios.
  - The question should not be ambiguous and can be answered with one of the given options or a short answer.
  - Annotate all data fields, including the description, simplified description, question, answer options, the correct answer, image, and domain.

### F.3 Data Format and Structure

- **JSON File Format:** The structured JSON format will include fields for index number, description, simplified description, question, answer options, correct answer, and domain.
- **Naming Conventions:**
  - Each collected sample will be stored in a line into a JSONL file.
  - Image files following a standard naming rule: **{QuesNum}.png**
- **Interleaving Question with Images:** The images should be inserted as a file path in the question.

### F.4 Quality Control and Validation

- Annotators will cross-check each other's work to ensure accuracy and compliance with the annotation guidelines.
- Periodic reviews of randomly selected samples from the dataset will be carried out to maintain consistent quality over time.

### F.5 Handling Ambiguities

Any ambiguous or unclear data entries should be marked for thorough review. Such questions will be collectively discussed during team meetings to develop a consistent and standardized annotation strategy.

## **F.6 Ethical Considerations**

- **Copyright and Licensing:** Annotators must strictly follow all applicable copyright and licensing rules. Content from sources that restrict reproduction or redistribution will be excluded without exception.
- **Data Privacy:** Upholding data privacy and ethical standards is essential. Annotators should refrain from including any questions that involve personal or sensitive information.

## **F.7 Data Contamination Considerations**

When developing benchmarks for evaluating foundation models, it is crucial to account for the potential risk of data contamination. To mitigate this, annotators should deliberately avoid simple questions with widely available answers. Instead, they should prioritize selecting problems whose solutions are embedded in less conspicuous places—such as in supplementary materials or at the end of lengthy textbooks. This strategy helps ensure that the benchmark effectively challenges models to demonstrate genuine comprehension and reasoning across complex and less accessible content.

## NeurIPS Paper Checklist

### 1. Claims

Question: Do the main claims made in the abstract and introduction accurately reflect the paper's contributions and scope?

Answer: [\[Yes\]](#)

Justification: We clearly present our contribution in abstract and introduction. The dataset, experiments, error analysis, and ablation studies support our contribution.

Guidelines:

- The answer NA means that the abstract and introduction do not include the claims made in the paper.
- The abstract and/or introduction should clearly state the claims made, including the contributions made in the paper and important assumptions and limitations. A No or NA answer to this question will not be perceived well by the reviewers.
- The claims made should match theoretical and experimental results, and reflect how much the results can be expected to generalize to other settings.
- It is fine to include aspirational goals as motivation as long as it is clear that these goals are not attained by the paper.

### 2. Limitations

Question: Does the paper discuss the limitations of the work performed by the authors?

Answer: [\[Yes\]](#)

Justification: We discuss the limitations in Section 5.

Guidelines:

- The answer NA means that the paper has no limitation while the answer No means that the paper has limitations, but those are not discussed in the paper.
- The authors are encouraged to create a separate "Limitations" section in their paper.
- The paper should point out any strong assumptions and how robust the results are to violations of these assumptions (e.g., independence assumptions, noiseless settings, model well-specification, asymptotic approximations only holding locally). The authors should reflect on how these assumptions might be violated in practice and what the implications would be.
- The authors should reflect on the scope of the claims made, e.g., if the approach was only tested on a few datasets or with a few runs. In general, empirical results often depend on implicit assumptions, which should be articulated.
- The authors should reflect on the factors that influence the performance of the approach. For example, a facial recognition algorithm may perform poorly when image resolution is low or images are taken in low lighting. Or a speech-to-text system might not be used reliably to provide closed captions for online lectures because it fails to handle technical jargon.
- The authors should discuss the computational efficiency of the proposed algorithms and how they scale with dataset size.
- If applicable, the authors should discuss possible limitations of their approach to address problems of privacy and fairness.
- While the authors might fear that complete honesty about limitations might be used by reviewers as grounds for rejection, a worse outcome might be that reviewers discover limitations that aren't acknowledged in the paper. The authors should use their best judgment and recognize that individual actions in favor of transparency play an important role in developing norms that preserve the integrity of the community. Reviewers will be specifically instructed to not penalize honesty concerning limitations.

### 3. Theory Assumptions and Proofs

Question: For each theoretical result, does the paper provide the full set of assumptions and a complete (and correct) proof?

Answer: [\[NA\]](#)



Justification: This paper mainly focus on dataset curation, benchmark construction, and experiments analysis.

Guidelines:

- The answer NA means that the paper does not include theoretical results.
- All the theorems, formulas, and proofs in the paper should be numbered and cross-referenced.
- All assumptions should be clearly stated or referenced in the statement of any theorems.
- The proofs can either appear in the main paper or the supplemental material, but if they appear in the supplemental material, the authors are encouraged to provide a short proof sketch to provide intuition.
- Inversely, any informal proof provided in the core of the paper should be complemented by formal proofs provided in appendix or supplemental material.
- Theorems and Lemmas that the proof relies upon should be properly referenced.

#### 4. Experimental Result Reproducibility

Question: Does the paper fully disclose all the information needed to reproduce the main experimental results of the paper to the extent that it affects the main claims and/or conclusions of the paper (regardless of whether the code and data are provided or not)?

Answer: [\[Yes\]](#)

Justification: We have released our code and data for reproducibility.

Guidelines:

- The answer NA means that the paper does not include experiments.
- If the paper includes experiments, a No answer to this question will not be perceived well by the reviewers: Making the paper reproducible is important, regardless of whether the code and data are provided or not.
- If the contribution is a dataset and/or model, the authors should describe the steps taken to make their results reproducible or verifiable.
- Depending on the contribution, reproducibility can be accomplished in various ways. For example, if the contribution is a novel architecture, describing the architecture fully might suffice, or if the contribution is a specific model and empirical evaluation, it may be necessary to either make it possible for others to replicate the model with the same dataset, or provide access to the model. In general, releasing code and data is often one good way to accomplish this, but reproducibility can also be provided via detailed instructions for how to replicate the results, access to a hosted model (e.g., in the case of a large language model), releasing of a model checkpoint, or other means that are appropriate to the research performed.
- While NeurIPS does not require releasing code, the conference does require all submissions to provide some reasonable avenue for reproducibility, which may depend on the nature of the contribution. For example
  - (a) If the contribution is primarily a new algorithm, the paper should make it clear how to reproduce that algorithm.
  - (b) If the contribution is primarily a new model architecture, the paper should describe the architecture clearly and fully.
  - (c) If the contribution is a new model (e.g., a large language model), then there should either be a way to access this model for reproducing the results or a way to reproduce the model (e.g., with an open-source dataset or instructions for how to construct the dataset).
  - (d) We recognize that reproducibility may be tricky in some cases, in which case authors are welcome to describe the particular way they provide for reproducibility. In the case of closed-source models, it may be that access to the model is limited in some way (e.g., to registered users), but it should be possible for other researchers to have some path to reproducing or verifying the results.

#### 5. Open access to data and code

Question: Does the paper provide open access to the data and code, with sufficient instructions to faithfully reproduce the main experimental results, as described in supplemental material?

Answer: [Yes]

Justification: Since the submission is single-blinded, we have made our code and dataset publicly available to ensure reproducibility.

Guidelines:

- The answer NA means that paper does not include experiments requiring code.
- Please see the NeurIPS code and data submission guidelines (<https://nips.cc/public/guides/CodeSubmissionPolicy>) for more details.
- While we encourage the release of code and data, we understand that this might not be possible, so “No” is an acceptable answer. Papers cannot be rejected simply for not including code, unless this is central to the contribution (e.g., for a new open-source benchmark).
- The instructions should contain the exact command and environment needed to run to reproduce the results. See the NeurIPS code and data submission guidelines (<https://nips.cc/public/guides/CodeSubmissionPolicy>) for more details.
- The authors should provide instructions on data access and preparation, including how to access the raw data, preprocessed data, intermediate data, and generated data, etc.
- The authors should provide scripts to reproduce all experimental results for the new proposed method and baselines. If only a subset of experiments are reproducible, they should state which ones are omitted from the script and why.
- At submission time, to preserve anonymity, the authors should release anonymized versions (if applicable).
- Providing as much information as possible in supplemental material (appended to the paper) is recommended, but including URLs to data and code is permitted.

## 6. Experimental Setting/Details

Question: Does the paper specify all the training and test details (e.g., data splits, hyper-parameters, how they were chosen, type of optimizer, etc.) necessary to understand the results?

Answer: [Yes]

Justification: We have presented all the details of experiments in the main paper Section 3 and Appendix.

Guidelines:

- The answer NA means that the paper does not include experiments.
- The experimental setting should be presented in the core of the paper to a level of detail that is necessary to appreciate the results and make sense of them.
- The full details can be provided either with the code, in appendix, or as supplemental material.

## 7. Experiment Statistical Significance

Question: Does the paper report error bars suitably and correctly defined or other appropriate information about the statistical significance of the experiments?

Answer: [Yes]

Justification: We report the statistical results in Section 3.

Guidelines:

- The answer NA means that the paper does not include experiments.
- The authors should answer "Yes" if the results are accompanied by error bars, confidence intervals, or statistical significance tests, at least for the experiments that support the main claims of the paper.
- The factors of variability that the error bars are capturing should be clearly stated (for example, train/test split, initialization, random drawing of some parameter, or overall run with given experimental conditions).
- The method for calculating the error bars should be explained (closed form formula, call to a library function, bootstrap, etc.)
- The assumptions made should be given (e.g., Normally distributed errors).

- It should be clear whether the error bar is the standard deviation or the standard error of the mean.
- It is OK to report 1-sigma error bars, but one should state it. The authors should preferably report a 2-sigma error bar than state that they have a 96% CI, if the hypothesis of Normality of errors is not verified.
- For asymmetric distributions, the authors should be careful not to show in tables or figures symmetric error bars that would yield results that are out of range (e.g. negative error rates).
- If error bars are reported in tables or plots, The authors should explain in the text how they were calculated and reference the corresponding figures or tables in the text.

## 8. Experiments Compute Resources

Question: For each experiment, does the paper provide sufficient information on the computer resources (type of compute workers, memory, time of execution) needed to reproduce the experiments?

Answer: [Yes]

Justification: We discuss the compute resources in Section 3 and Appendix D.

Guidelines:

- The answer NA means that the paper does not include experiments.
- The paper should indicate the type of compute workers CPU or GPU, internal cluster, or cloud provider, including relevant memory and storage.
- The paper should provide the amount of compute required for each of the individual experimental runs as well as estimate the total compute.
- The paper should disclose whether the full research project required more compute than the experiments reported in the paper (e.g., preliminary or failed experiments that didn't make it into the paper).

## 9. Code Of Ethics

Question: Does the research conducted in the paper conform, in every respect, with the NeurIPS Code of Ethics <https://neurips.cc/public/EthicsGuidelines>?

Answer: [Yes]

Justification: We have carefully checked the code of ethics.

Guidelines:

- The answer NA means that the authors have not reviewed the NeurIPS Code of Ethics.
- If the authors answer No, they should explain the special circumstances that require a deviation from the Code of Ethics.
- The authors should make sure to preserve anonymity (e.g., if there is a special consideration due to laws or regulations in their jurisdiction).

## 10. Broader Impacts

Question: Does the paper discuss both potential positive societal impacts and negative societal impacts of the work performed?

Answer: [Yes]

Justification: We discuss the broader impacts of the paper in Section B.

Guidelines:

- The answer NA means that there is no societal impact of the work performed.
- If the authors answer NA or No, they should explain why their work has no societal impact or why the paper does not address societal impact.
- Examples of negative societal impacts include potential malicious or unintended uses (e.g., disinformation, generating fake profiles, surveillance), fairness considerations (e.g., deployment of technologies that could make decisions that unfairly impact specific groups), privacy considerations, and security considerations.

- The conference expects that many papers will be foundational research and not tied to particular applications, let alone deployments. However, if there is a direct path to any negative applications, the authors should point it out. For example, it is legitimate to point out that an improvement in the quality of generative models could be used to generate deepfakes for disinformation. On the other hand, it is not needed to point out that a generic algorithm for optimizing neural networks could enable people to train models that generate Deepfakes faster.
- The authors should consider possible harms that could arise when the technology is being used as intended and functioning correctly, harms that could arise when the technology is being used as intended but gives incorrect results, and harms following from (intentional or unintentional) misuse of the technology.
- If there are negative societal impacts, the authors could also discuss possible mitigation strategies (e.g., gated release of models, providing defenses in addition to attacks, mechanisms for monitoring misuse, mechanisms to monitor how a system learns from feedback over time, improving the efficiency and accessibility of ML).

## 11. Safeguards

Question: Does the paper describe safeguards that have been put in place for responsible release of data or models that have a high risk for misuse (e.g., pretrained language models, image generators, or scraped datasets)?

Answer: [\[Yes\]](#)

Justification: We discussed the source of our data, and the benchmark is purely for academic usage.

Guidelines:

- The answer NA means that the paper poses no such risks.
- Released models that have a high risk for misuse or dual-use should be released with necessary safeguards to allow for controlled use of the model, for example by requiring that users adhere to usage guidelines or restrictions to access the model or implementing safety filters.
- Datasets that have been scraped from the Internet could pose safety risks. The authors should describe how they avoided releasing unsafe images.
- We recognize that providing effective safeguards is challenging, and many papers do not require this, but we encourage authors to take this into account and make a best faith effort.

## 12. Licenses for existing assets

Question: Are the creators or original owners of assets (e.g., code, data, models), used in the paper, properly credited and are the license and terms of use explicitly mentioned and properly respected?

Answer: [\[Yes\]](#)

Justification: We have cited the works such as VLMEvalKit.

Guidelines:

- The answer NA means that the paper does not use existing assets.
- The authors should cite the original paper that produced the code package or dataset.
- The authors should state which version of the asset is used and, if possible, include a URL.
- The name of the license (e.g., CC-BY 4.0) should be included for each asset.
- For scraped data from a particular source (e.g., website), the copyright and terms of service of that source should be provided.
- If assets are released, the license, copyright information, and terms of use in the package should be provided. For popular datasets, [paperswithcode.com/datasets](https://paperswithcode.com/datasets) has curated licenses for some datasets. Their licensing guide can help determine the license of a dataset.
- For existing datasets that are re-packaged, both the original license and the license of the derived asset (if it has changed) should be provided.

- If this information is not available online, the authors are encouraged to reach out to the asset’s creators.

### 13. **New Assets**

Question: Are new assets introduced in the paper well documented and is the documentation provided alongside the assets?

Answer: [NA]

Justification: This paper does not release new assets.

Guidelines:

- The answer NA means that the paper does not release new assets.
- Researchers should communicate the details of the dataset/code/model as part of their submissions via structured templates. This includes details about training, license, limitations, etc.
- The paper should discuss whether and how consent was obtained from people whose asset is used.
- At submission time, remember to anonymize your assets (if applicable). You can either create an anonymized URL or include an anonymized zip file.

### 14. **Crowdsourcing and Research with Human Subjects**

Question: For crowdsourcing experiments and research with human subjects, does the paper include the full text of instructions given to participants and screenshots, if applicable, as well as details about compensation (if any)?

Answer: [NA]

Justification: This paper does not involve crowdsourcing nor research with human subjects.

Guidelines:

- The answer NA means that the paper does not involve crowdsourcing nor research with human subjects.
- Including this information in the supplemental material is fine, but if the main contribution of the paper involves human subjects, then as much detail as possible should be included in the main paper.
- According to the NeurIPS Code of Ethics, workers involved in data collection, curation, or other labor should be paid at least the minimum wage in the country of the data collector.

### 15. **Institutional Review Board (IRB) Approvals or Equivalent for Research with Human Subjects**

Question: Does the paper describe potential risks incurred by study participants, whether such risks were disclosed to the subjects, and whether Institutional Review Board (IRB) approvals (or an equivalent approval/review based on the requirements of your country or institution) were obtained?

Answer: [NA]

Justification: This paper does not involve research with human subjects.

Guidelines:

- The answer NA means that the paper does not involve crowdsourcing nor research with human subjects.
- Depending on the country in which research is conducted, IRB approval (or equivalent) may be required for any human subjects research. If you obtained IRB approval, you should clearly state this in the paper.
- We recognize that the procedures for this may vary significantly between institutions and locations, and we expect authors to adhere to the NeurIPS Code of Ethics and the guidelines for their institution.
- For initial submissions, do not include any information that would break anonymity (if applicable), such as the institution conducting the review.

### 16. **Declaration of LLM usage**

Question: Does the paper describe the usage of LLMs if it is an important, original, or non-standard component of the core methods in this research? Note that if the LLM is used only for writing, editing, or formatting purposes and does not impact the core methodology, scientific rigorousness, or originality of the research, declaration is not required.

Answer: [Yes]

Justification: We use LLM to judge the extracted answer with ground truth, detailed in Section 2.

Guidelines:

- The answer NA means that the core method development in this research does not involve LLMs as any important, original, or non-standard components.
- Please refer to our LLM policy (<https://neurips.cc/Conferences/2025/LLM>) for what should or should not be described.